



Autour de la table de 4

question 1

$$4 \times 3$$

Réponse :

$$4 \times 3 = 12$$

question 2

$$3 \times 4$$

Réponse :

$$3 \times 4 = 12$$

Complète.

$$4 \times \dots = 12$$

Réponse :

$$4 \times 3 = 12$$

Complète.

$$3 \times \dots = 12$$

Réponse :

$$3 \times 4 = 12$$

Complète.

$$\dots \times 4 = 12$$

Réponse :

$$3 \times 4 = 12$$

Complète.

$$\dots \times 3 = 12$$

Réponse :

$$4 \times 3 = 12$$

question 7

$$12 = \dots \times \dots$$

Réponse :

$$12 = 4 \times 3$$

ou

...

Dans 12,
combien de fois 4 ?

Réponse :

$$12 = 3 \times 4$$

Dans 12, il y a 3 fois 4.

Dans 15,
combien de fois 4 ?

Réponse :

$$15 = 3 \times 4 + 3$$

Dans 15, il y 3 fois 4.

Quel est le reste de la division euclidienne
de 14 par 4 ?

Réponse :

$$14 = 3 \times 4 + 2$$

Le reste de la division euclidienne
de 14 par 4 est 2.

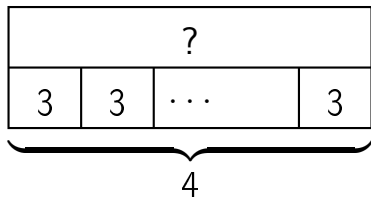
question 11

$$12 \div 4$$

Réponse :

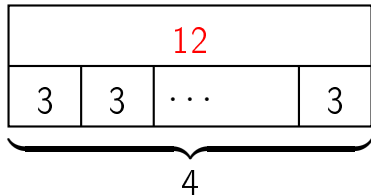
$$12 \div 4 = 3$$

question 12

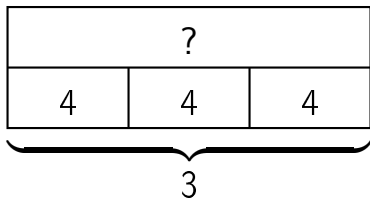


Réponse :

$$4 \times 3 = 12$$

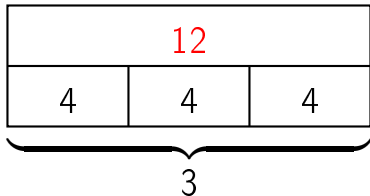


question 13

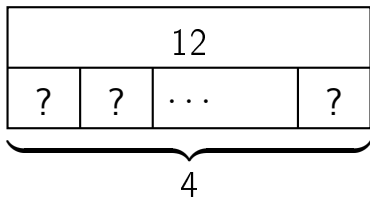


Réponse :

$$3 \times 4 = 12$$



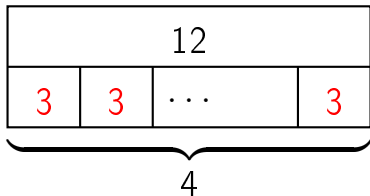
question 14



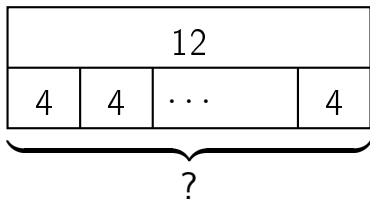
Réponse :

$$4 \times ? = 12$$

$$\text{donc } ? = 12 \div 4 = 3$$



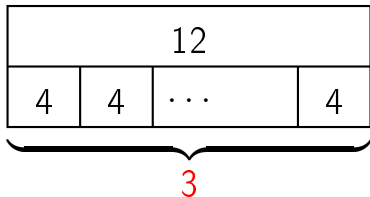
question 15



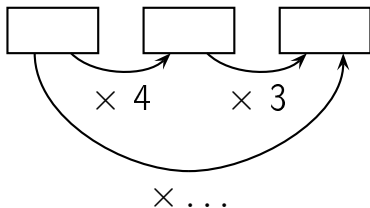
Réponse :

$$? \times 4 = 12$$

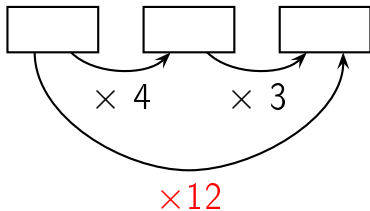
$$\text{donc } ? = 12 \div 4 = 3$$



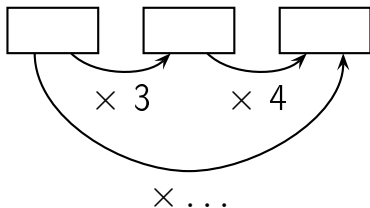
Complète.



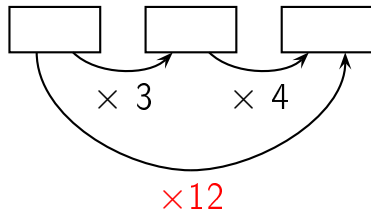
Réponse :



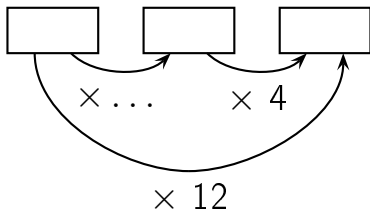
Complète.



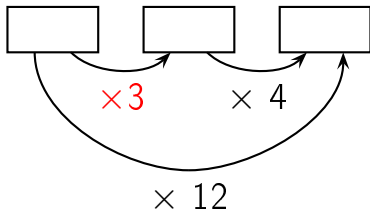
Réponse :



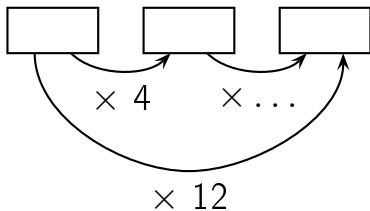
Complète.



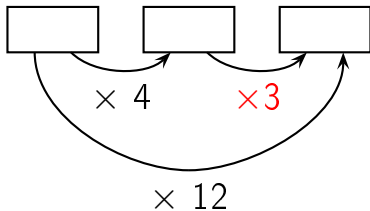
Réponse :



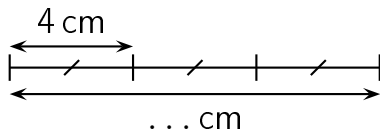
Complète.



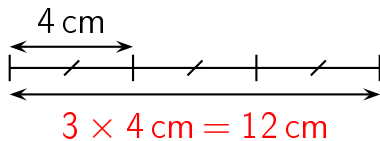
Réponse :



Complète.

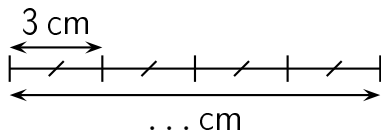


Réponse :

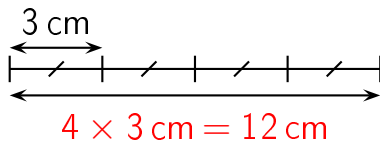


question 21

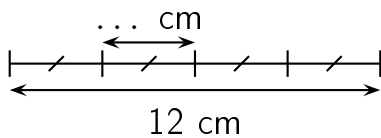
Complète.



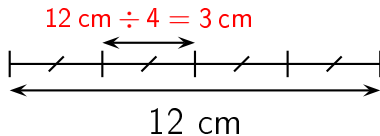
Réponse :




Complète.



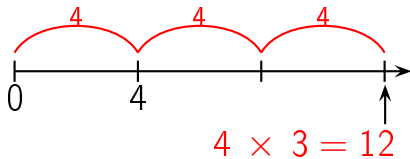
Réponse :



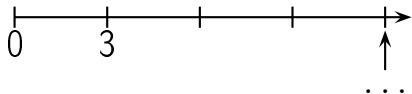
question 23



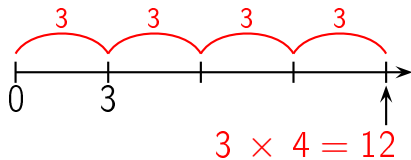
Réponse :



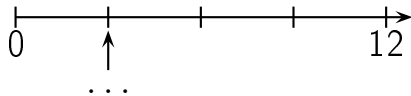
question 24



Réponse :

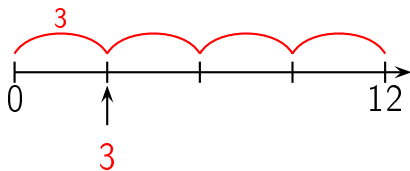


question 25




réponse à la question 25

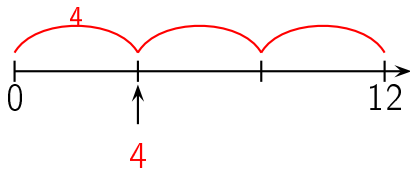
Réponse :



question 26



Réponse :



Combien y a-t-il de fleurs ?



Réponse :

12 fleurs

Il y a 4 lignes de 3 fleurs chacune. Il y a donc
 $4 \times 3 = 12$ fleurs.

Autre manière:

Il y a 3 colonnes de 4 fleurs chacune. Il y a donc $3 \times$
 $4 = 12$ fleurs.

Combien y a-t-il de fleurs ?



Réponse :

12 fleurs

Il y a 3 lignes de 4 fleurs chacune. Il y a donc

$$3 \times 4 = 12 \text{ fleurs.}$$

Autre manière:

Il y a 4 colonnes de 3 fleurs chacune. Il y a donc $4 \times$

$$3 = 12 \text{ fleurs.}$$

question 29

$$4 \times 4$$

Réponse :

$$4 \times 4 = 16$$

Complète.

$$4 \times \dots = 16$$

Réponse :

$$4 \times 4 = 16$$

Complète.

$$\dots \times 4 = 16$$

Réponse :

$$4 \times 4 = 16$$

question 32

$$16 = \dots \times \dots$$

Réponse :

$$16 = 4 \times 4$$

ou

...

question 33

Dans 16,
combien de fois 4 ?

Réponse :

$$16 = 4 \times 4$$

Dans 16, il y a 4 fois 4.

Dans 18,
combien de fois 4 ?

Réponse :

$$18 = 4 \times 4 + 2$$

Dans 18, il y 4 fois 4.

Quel est le reste de la division euclidienne
de 19 par 4 ?

Réponse :

$$19 = 4 \times 4 + 3$$

Le reste de la division euclidienne
de 19 par 4 est 3.

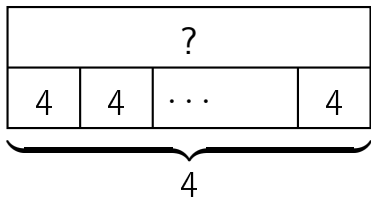
question 36

$$16 \div 4$$

Réponse :

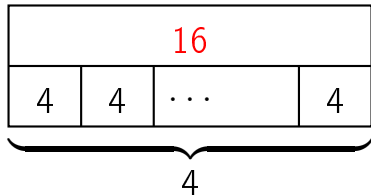
$$16 \div 4 = 4$$

question 37

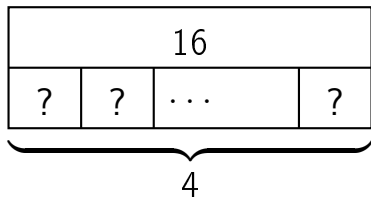


Réponse :

$$4 \times 4 = 16$$



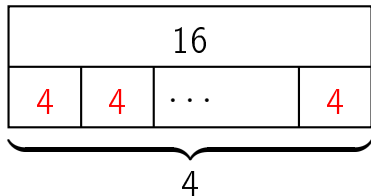
question 38



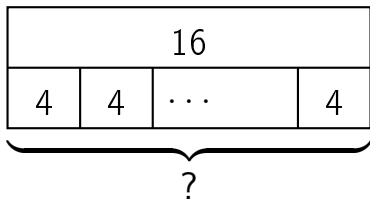
Réponse :

$$4 \times ? = 16$$

$$\text{donc } ? = 16 \div 4 = 4$$



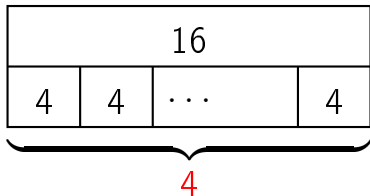
question 39



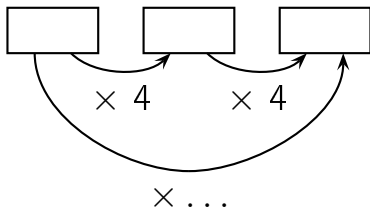
Réponse :

$$? \times 4 = 16$$

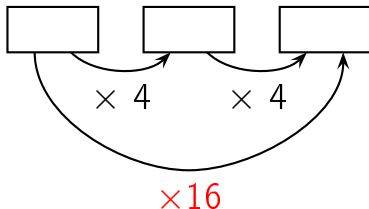
$$\text{donc } ? = 16 \div 4 = 4$$



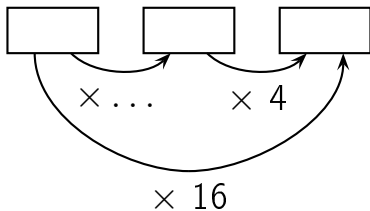
Complète.



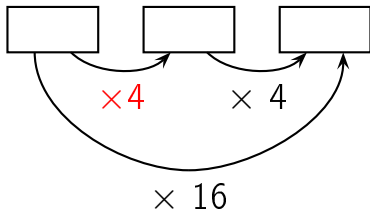
Réponse :



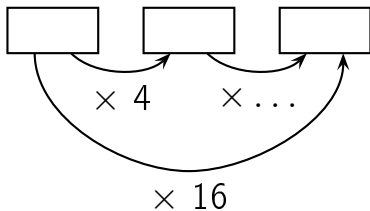
Complète.



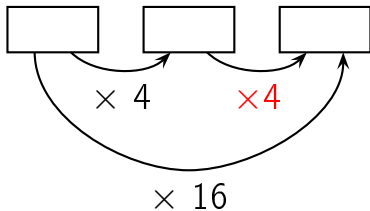
Réponse :



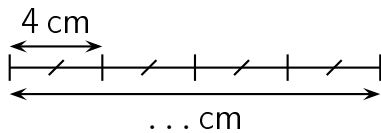
Complète.



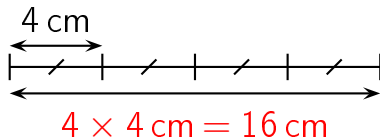
Réponse :



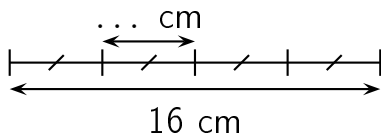
Complète.



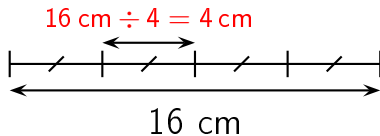
Réponse :



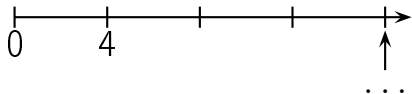
Complète.



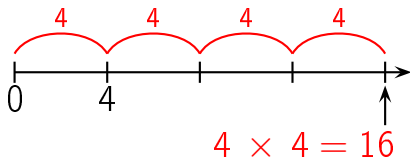
Réponse :



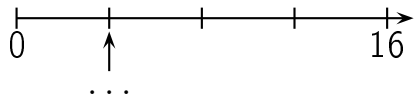
question 45



Réponse :

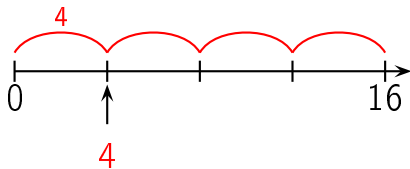


question 46



réponse à la question 46

Réponse :



Combien y a-t-il de fleurs ?



Réponse :

16 fleurs

Il y a 4 lignes de 4 fleurs chacune. Il y a donc
 $4 \times 4 = 16$ fleurs.

Autre manière:

Il y a 4 colonnes de 4 fleurs chacune. Il y a donc $4 \times 4 = 16$ fleurs.

question 48

$$4 \times 5$$

Réponse :

$$4 \times 5 = 20$$

question 49

$$5 \times 4$$

Réponse :

$$5 \times 4 = 20$$

Complète.

$$4 \times \dots = 20$$

Réponse :

$$4 \times 5 = 20$$

Complète.

$$5 \times \dots = 20$$

Réponse :

$$5 \times 4 = 20$$

Complète.

$$\dots \times 4 = 20$$

Réponse :

$$5 \times 4 = 20$$

Complète.

$$\dots \times 5 = 20$$

Réponse :

$$4 \times 5 = 20$$

question 54

$$20 = \dots \times \dots$$

Réponse :

$$20 = 4 \times 5$$

ou

...

question 55

Dans 20,
combien de fois 4 ?

Réponse :

$$20 = 5 \times 4$$

Dans 20, il y a 5 fois 4.

Dans 22,
combien de fois 4 ?

Réponse :

$$22 = 5 \times 4 + 2$$

Dans 22, il y 5 fois 4.

Quel est le reste de la division euclidienne
de 21 par 4 ?

Réponse :

$$21 = 5 \times 4 + 1$$

Le reste de la division euclidienne
de 21 par 4 est 1.

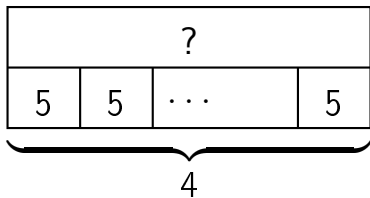
question 58

$$20 \div 4$$

Réponse :

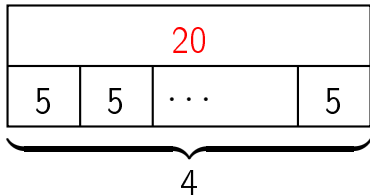
$$20 \div 4 = 5$$

question 59

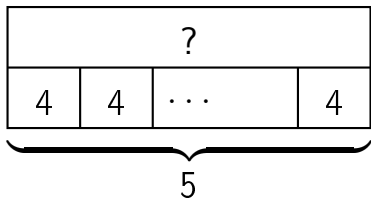


Réponse :

$$4 \times 5 = 20$$

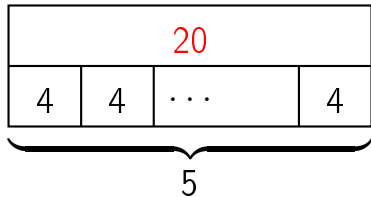


question 60

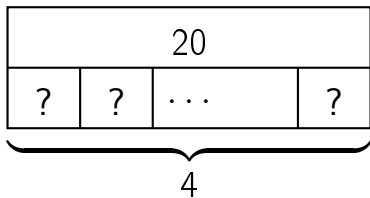


Réponse :

$$5 \times 4 = 20$$



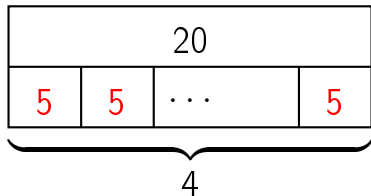
question 61



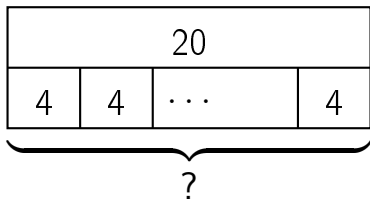
Réponse :

$$4 \times ? = 20$$

$$\text{donc } ? = 20 \div 4 = 5$$



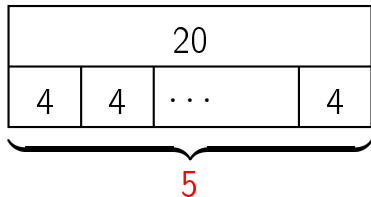
question 62



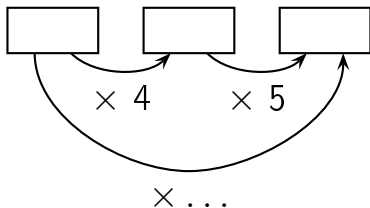
Réponse :

$$? \times 4 = 20$$

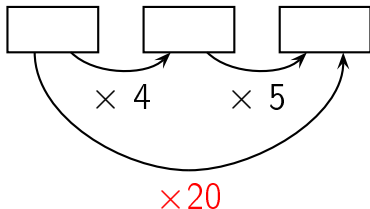
$$\text{donc } ? = 20 \div 4 = 5$$



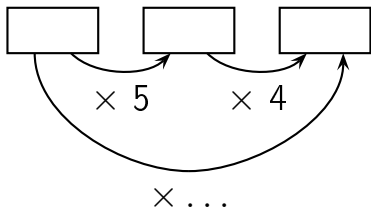
Complète.



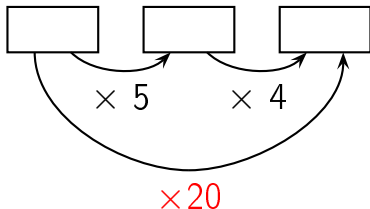
Réponse :



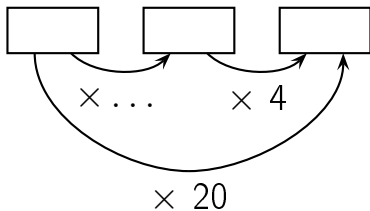
Complète.



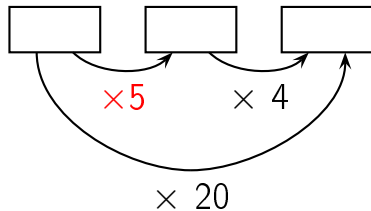
Réponse :



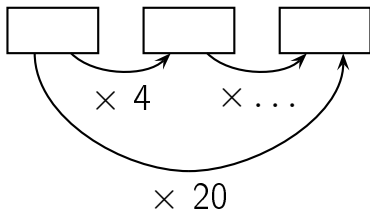
Complète.



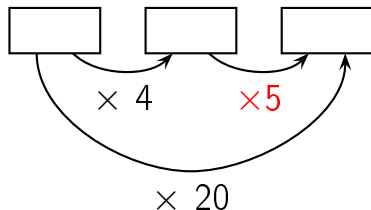
Réponse :



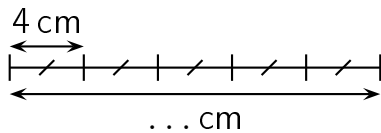
Complète.



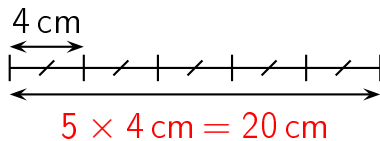
Réponse :



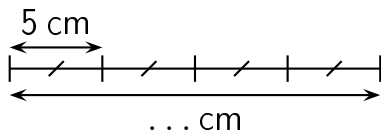
Complète.



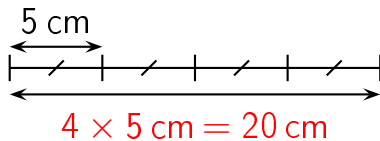
Réponse :



Complète.

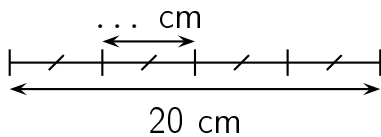


Réponse :

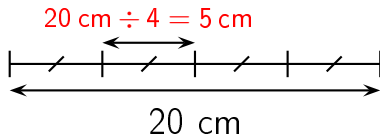


question 69

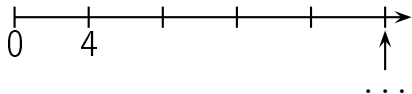
Complète.



Réponse :

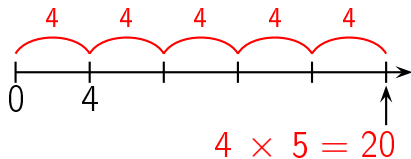


question 70

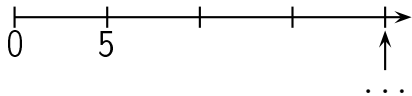


réponse à la question 70

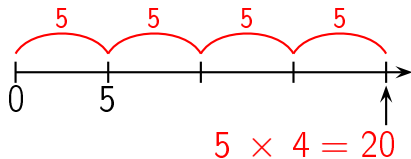
Réponse :



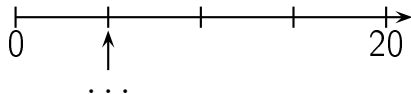
question 71



Réponse :

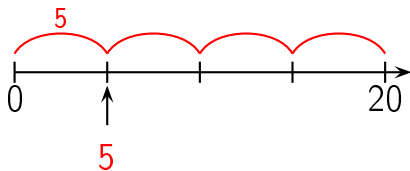


question 72

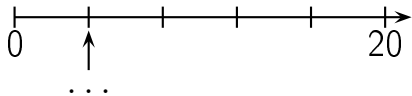


réponse à la question 72

Réponse :

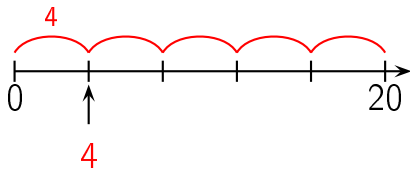


question 73




réponse à la question 73

Réponse :



Combien y a-t-il de fleurs ?



Réponse :

20 fleurs

Il y a 4 lignes de 5 fleurs chacune. Il y a donc
 $4 \times 5 = 20$ fleurs.

Autre manière:

Il y a 5 colonnes de 4 fleurs chacune. Il y a donc $5 \times$
 $4 = 20$ fleurs.

Combien y a-t-il de fleurs ?



Réponse :

20 fleurs

Il y a 5 lignes de 4 fleurs chacune. Il y a donc
 $5 \times 4 = 20$ fleurs.

Autre manière:

Il y a 4 colonnes de 5 fleurs chacune. Il y a donc $4 \times$
 $5 = 20$ fleurs.

question 76

$$4 \times 6$$

Réponse :

$$4 \times 6 = 24$$

question 77

$$6 \times 4$$

Réponse :

$$6 \times 4 = 24$$

Complète.

$$4 \times \dots = 24$$

Réponse :

$$4 \times 6 = 24$$

Complète.

$$6 \times \dots = 24$$

Réponse :

$$6 \times 4 = 24$$

Complète.

$$\dots \times 4 = 24$$

Réponse :

$$6 \times 4 = 24$$

Complète.

$$\dots \times 6 = 24$$

Réponse :

$$4 \times 6 = 24$$

question 82

$$24 = \dots \times \dots$$

Réponse :

$$24 = 4 \times 6$$

ou

...

Dans 24,
combien de fois 4 ?

Réponse :

$$24 = 6 \times 4$$

Dans 24, il y a 6 fois 4.

Dans 25,
combien de fois 4 ?

Réponse :

$$25 = 6 \times 4 + 1$$

Dans 25, il y 6 fois 4.

Quel est le reste de la division euclidienne
de 26 par 4 ?

Réponse :

$$26 = 6 \times 4 + 2$$

Le reste de la division euclidienne
de 26 par 4 est 2.

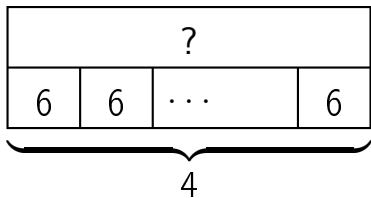
question 86

$$24 \div 4$$

Réponse :

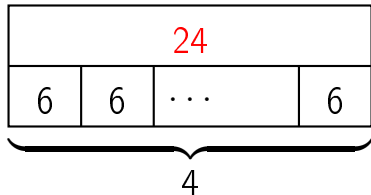
$$24 \div 4 = 6$$

question 87

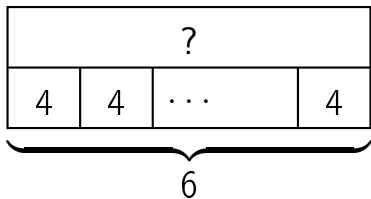


Réponse :

$$4 \times 6 = 24$$

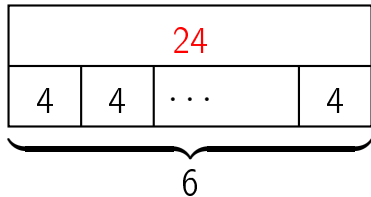


question 88

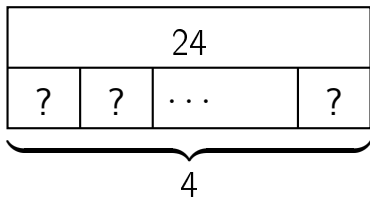


Réponse :

$$6 \times 4 = 24$$



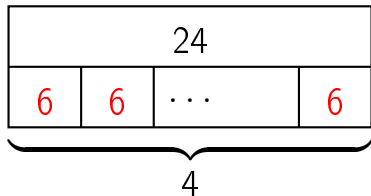
question 89



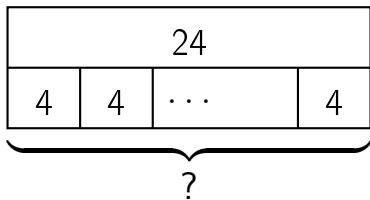
Réponse :

$$4 \times ? = 24$$

$$\text{donc } ? = 24 \div 4 = 6$$



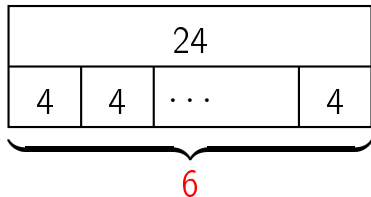
question 90



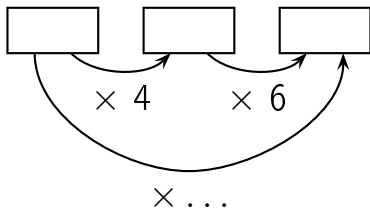
Réponse :

$$? \times 4 = 24$$

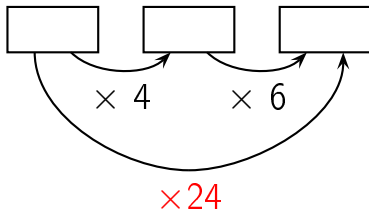
$$\text{donc } ? = 24 \div 4 = 6$$



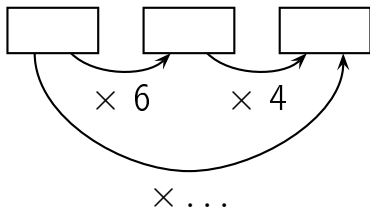
Complète.



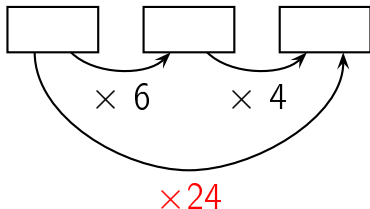
Réponse :



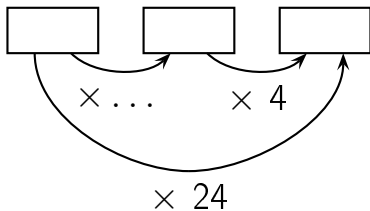
Complète.



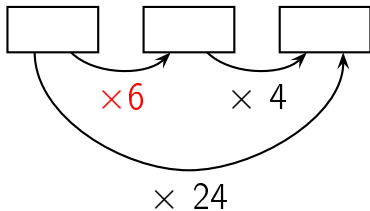
Réponse :



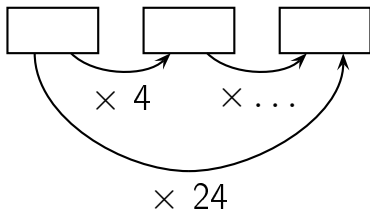
Complète.



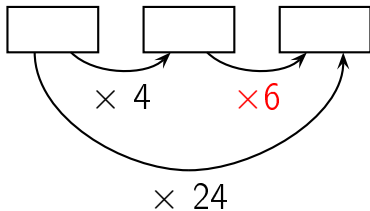
Réponse :



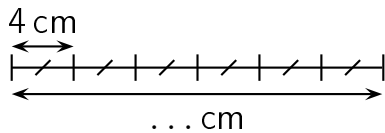
Complète.



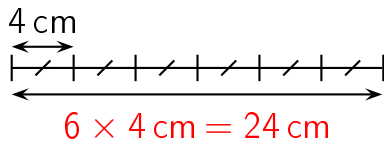
Réponse :



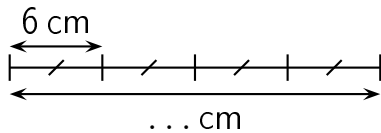
Complète.



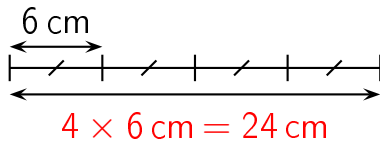
Réponse :



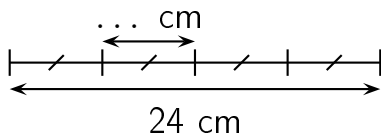
Complète.



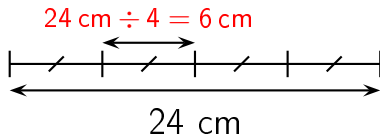
Réponse :



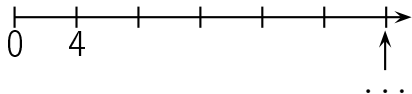
Complète.



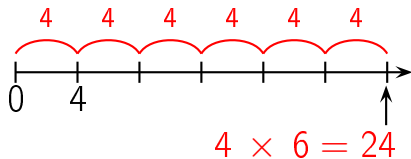
Réponse :



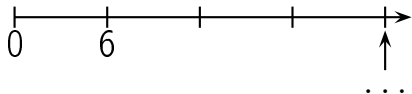
question 98



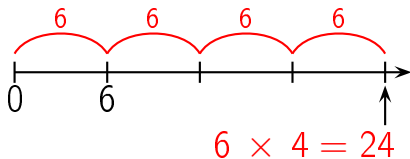
Réponse :



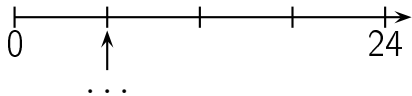
question 99



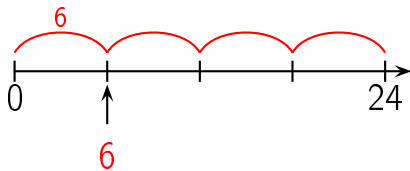
Réponse :



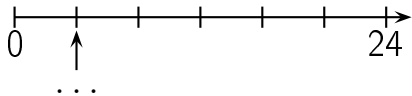
question 100



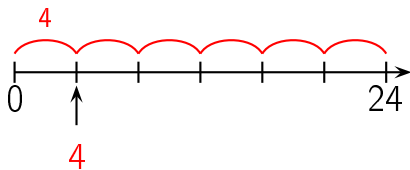
Réponse :



question 101



Réponse :



Combien y a-t-il de fleurs ?



Réponse :

24 fleurs

Il y a 4 lignes de 6 fleurs chacune. Il y a donc
 $4 \times 6 = 24$ fleurs.

Autre manière:

Il y a 6 colonnes de 4 fleurs chacune. Il y a donc $6 \times$
 $4 = 24$ fleurs.

Combien y a-t-il de fleurs ?



Réponse :

24 fleurs

Il y a 6 lignes de 4 fleurs chacune. Il y a donc

$$6 \times 4 = 24 \text{ fleurs.}$$

Autre manière:

Il y a 4 colonnes de 6 fleurs chacune. Il y a donc $4 \times$

$$6 = 24 \text{ fleurs.}$$

question 104

$$4 \times 7$$

Réponse :

$$4 \times 7 = 28$$

question 105

$$7 \times 4$$

Réponse :

$$7 \times 4 = 28$$

Complète.

$$4 \times \dots = 28$$

Réponse :

$$4 \times 7 = 28$$

Complète.

$$7 \times \dots = 28$$

Réponse :

$$7 \times 4 = 28$$

Complète.

$$\dots \times 4 = 28$$

Réponse :

$$7 \times 4 = 28$$

Complète.

$$\dots \times 7 = 28$$

Réponse :

$$4 \times 7 = 28$$

question 110

$$28 = \dots \times \dots$$

Réponse :

$$28 = 4 \times 7$$

ou

...

Dans 28,
combien de fois 4 ?

Réponse :

$$28 = 7 \times 4$$

Dans 28, il y a 7 fois 4.

Dans 30,
combien de fois 4 ?

Réponse :

$$30 = 7 \times 4 + 2$$

Dans 30, il y 7 fois 4.

Quel est le reste de la division euclidienne
de 31 par 4 ?

Réponse :

$$31 = 7 \times 4 + 3$$

Le reste de la division euclidienne
de 31 par 4 est 3.

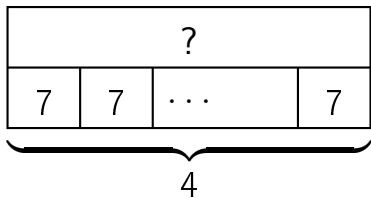
question 114

$$28 \div 4$$

Réponse :

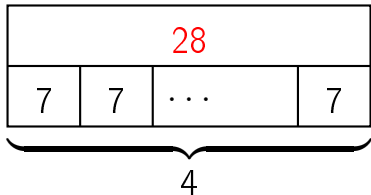
$$28 \div 4 = 7$$

question 115

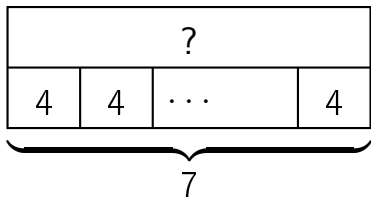


Réponse :

$$4 \times 7 = 28$$

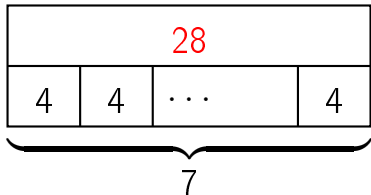


question 116

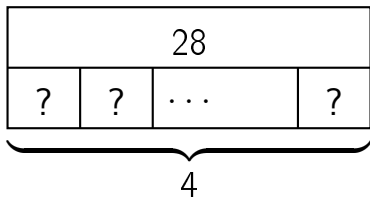


Réponse :

$$7 \times 4 = 28$$



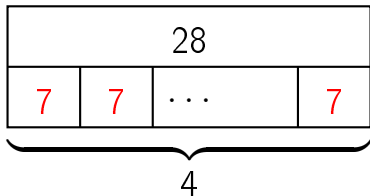
question 117



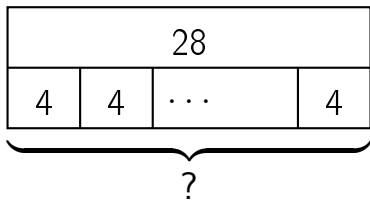
Réponse :

$$4 \times ? = 28$$

$$\text{donc } ? = 28 \div 4 = 7$$



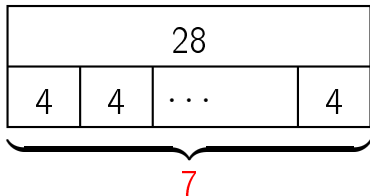
question 118



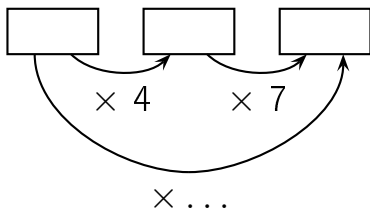
Réponse :

$$? \times 4 = 28$$

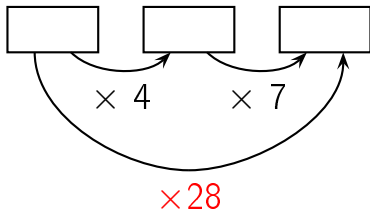
$$\text{donc } ? = 28 \div 4 = 7$$



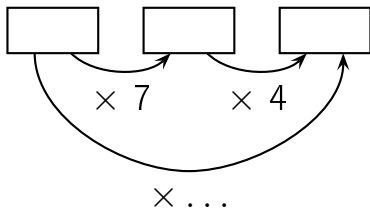
Complète.



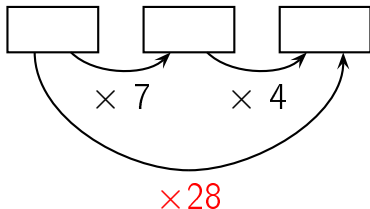
Réponse :



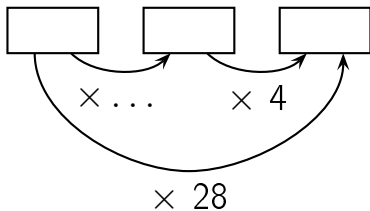
Complète.



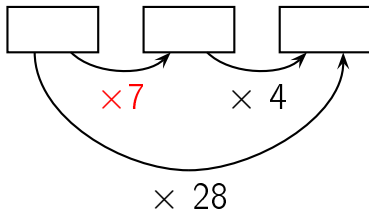
Réponse :



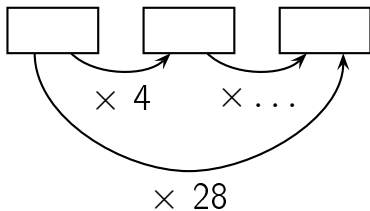
Complète.



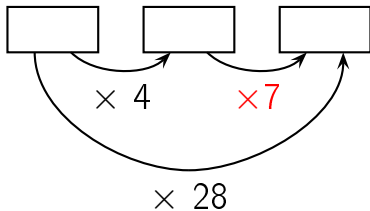
Réponse :



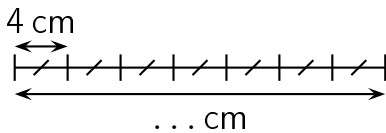
Complète.



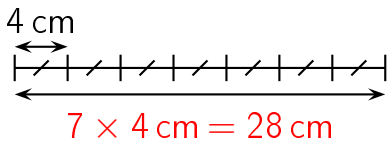
Réponse :



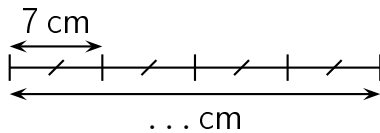
Complète.



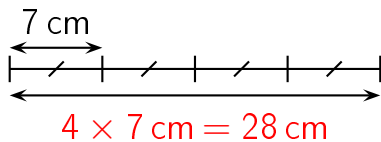
Réponse :



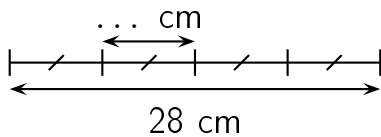
Complète.



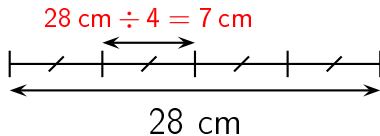
Réponse :



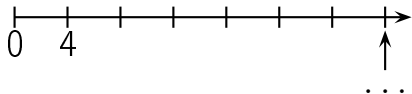
Complète.



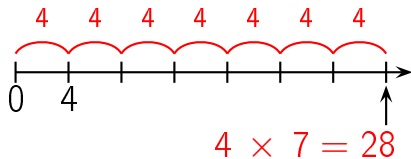
Réponse :



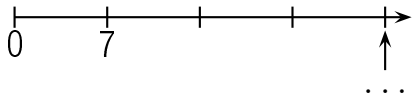
question 126



Réponse :

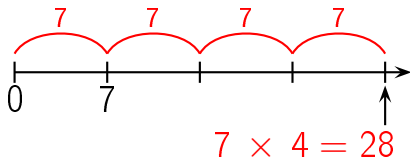


question 127

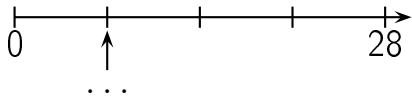


réponse à la question 127

Réponse :

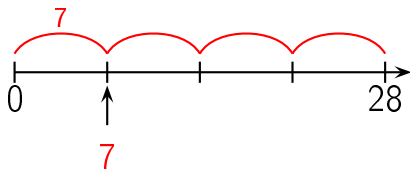


question 128

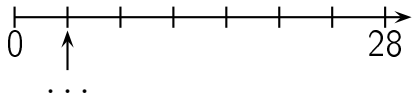


réponse à la question 128

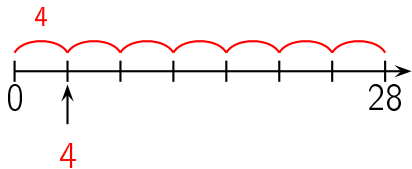
Réponse :




question 129



Réponse :



Combien y a-t-il de fleurs ?



Réponse :

28 fleurs

Il y a 4 lignes de 7 fleurs chacune. Il y a donc
 $4 \times 7 = 28$ fleurs.

Autre manière:

Il y a 7 colonnes de 4 fleurs chacune. Il y a donc $7 \times$
 $4 = 28$ fleurs.

Combien y a-t-il de fleurs ?



Réponse :

28 fleurs

Il y a 7 lignes de 4 fleurs chacune. Il y a donc

$$7 \times 4 = 28 \text{ fleurs.}$$

Autre manière:

Il y a 4 colonnes de 7 fleurs chacune. Il y a donc $4 \times$

$$7 = 28 \text{ fleurs.}$$

question 132

$$4 \times 8$$

Réponse :

$$4 \times 8 = 32$$

question 133

$$8 \times 4$$

Réponse :

$$8 \times 4 = 32$$

Complète.

$$4 \times \dots = 32$$

Réponse :

$$4 \times 8 = 32$$

Complète.

$$8 \times \dots = 32$$

Réponse :

$$8 \times 4 = 32$$

Complète.

$$\dots \times 4 = 32$$

Réponse :

$$8 \times 4 = 32$$

Complète.

$$\dots \times 8 = 32$$

Réponse :

$$4 \times 8 = 32$$

question 138

$$32 = \dots \times \dots$$

Réponse :

$$32 = 4 \times 8$$

ou

...

Dans 32,
combien de fois 4 ?

Réponse :

$$32 = 8 \times 4$$

Dans 32, il y a 8 fois 4.

Dans 34,
combien de fois 4 ?

Réponse :

$$34 = 8 \times 4 + 2$$

Dans 34, il y 8 fois 4.

Quel est le reste de la division euclidienne
de 33 par 4 ?

Réponse :

$$33 = 8 \times 4 + 1$$

Le reste de la division euclidienne
de 33 par 4 est 1.

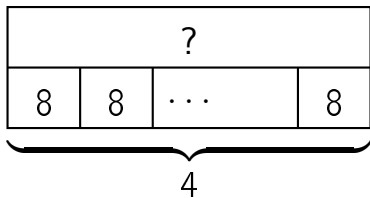
question 142

$$32 \div 4$$

Réponse :

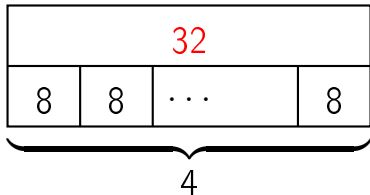
$$32 \div 4 = 8$$

question 143

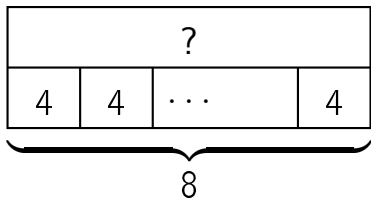


Réponse :

$$4 \times 8 = 32$$

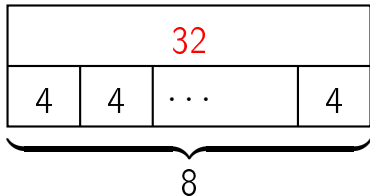


question 144

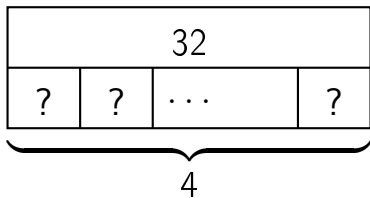


Réponse :

$$8 \times 4 = 32$$



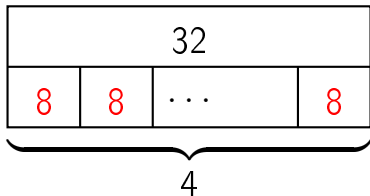
question 145



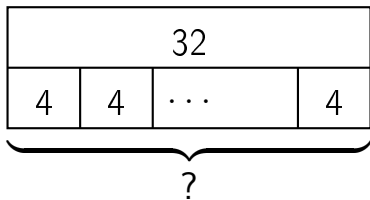
Réponse :

$$4 \times ? = 32$$

$$\text{donc } ? = 32 \div 4 = 8$$



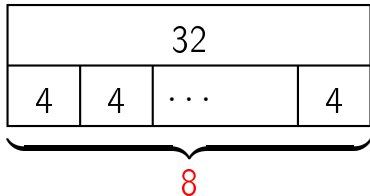
question 146



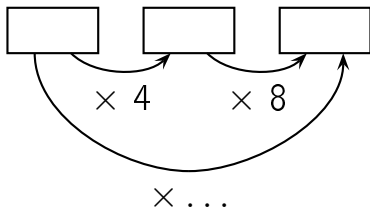
Réponse :

$$? \times 4 = 32$$

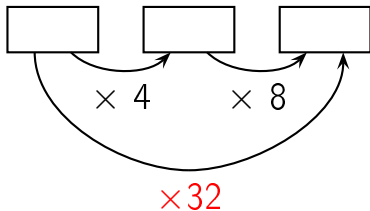
$$\text{donc } ? = 32 \div 4 = 8$$



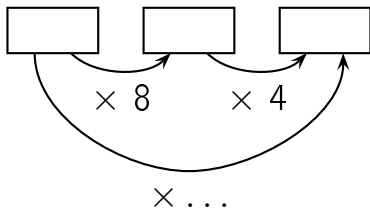
Complète.



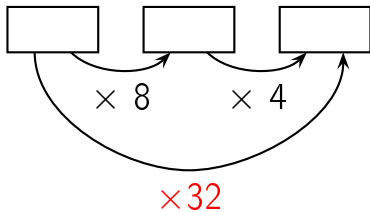
Réponse :



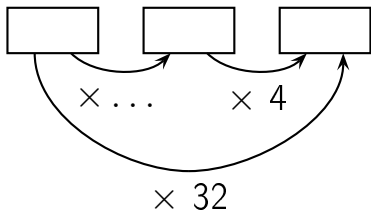
Complète.



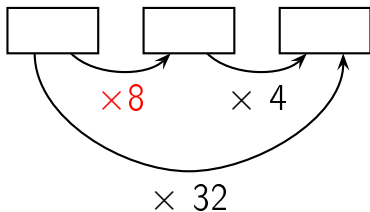
Réponse :



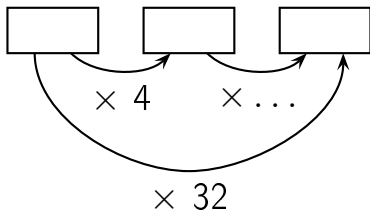
Complète.



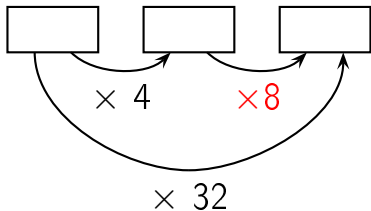
Réponse :



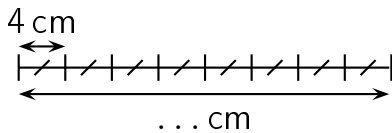
Complète.



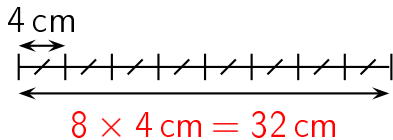
Réponse :



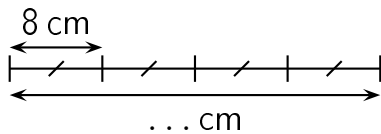
Complète.



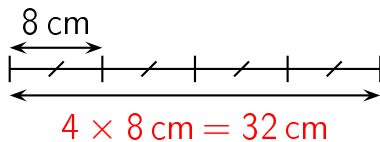
Réponse :



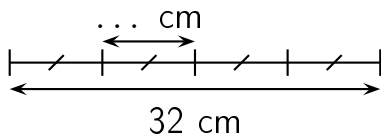
Complète.



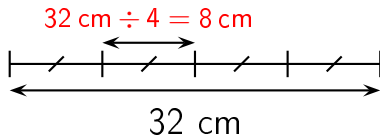
Réponse :



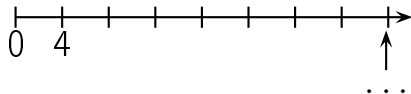
Complète.



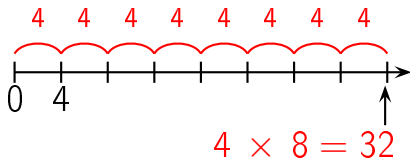
Réponse :



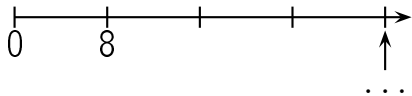
question 154



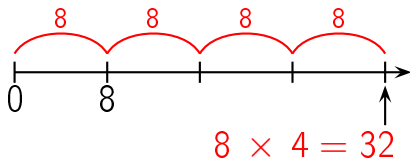
Réponse :



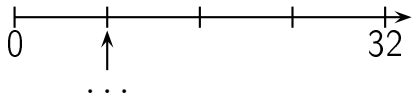
question 155



Réponse :

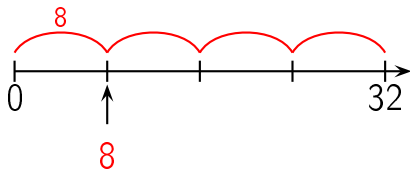


question 156

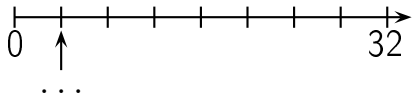


réponse à la question 156

Réponse :

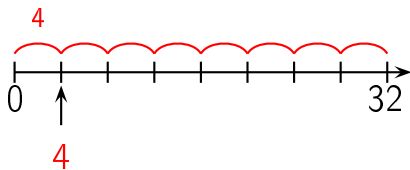


question 157



réponse à la question 157

Réponse :



Combien y a-t-il de fleurs ?



Réponse :

32 fleurs

Il y a 4 lignes de 8 fleurs chacune. Il y a donc

$$4 \times 8 = 32 \text{ fleurs.}$$

Autre manière:

Il y a 8 colonnes de 4 fleurs chacune. Il y a donc $8 \times$

$$4 = 32 \text{ fleurs.}$$

Combien y a-t-il de fleurs ?



Réponse :

32 fleurs

Il y a 8 lignes de 4 fleurs chacune. Il y a donc

$$8 \times 4 = 32 \text{ fleurs.}$$

Autre manière:

Il y a 4 colonnes de 8 fleurs chacune. Il y a donc $4 \times$

$$8 = 32 \text{ fleurs.}$$

question 160

$$4 \times 9$$

Réponse :

$$4 \times 9 = 36$$

question 161

$$9 \times 4$$

Réponse :

$$9 \times 4 = 36$$

Complète.

$$4 \times \dots = 36$$

Réponse :

$$4 \times 9 = 36$$

Complète.

$$9 \times \dots = 36$$

Réponse :

$$9 \times 4 = 36$$

Complète.

$$\dots \times 4 = 36$$

Réponse :

$$9 \times 4 = 36$$

Complète.

$$\dots \times 9 = 36$$

Réponse :

$$4 \times 9 = 36$$

question 166

$$36 = \dots \times \dots$$

Réponse :

$$36 = 4 \times 9$$

ou

...

Dans 36,
combien de fois 4 ?

Réponse :

$$36 = 9 \times 4$$

Dans 36, il y a 9 fois 4.

Dans 39,
combien de fois 4 ?

Réponse :

$$39 = 9 \times 4 + 3$$

Dans 39, il y 9 fois 4.

Quel est le reste de la division euclidienne
de 37 par 4 ?

Réponse :

$$37 = 9 \times 4 + 1$$

Le reste de la division euclidienne
de 37 par 4 est 1.

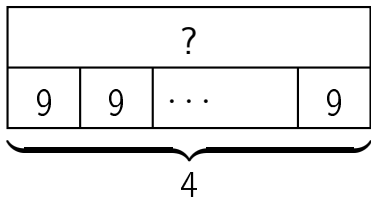
question 170

$$36 \div 4$$

Réponse :

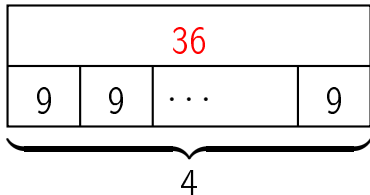
$$36 \div 4 = 9$$

question 171

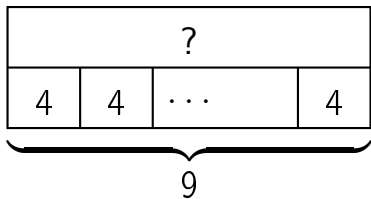


Réponse :

$$4 \times 9 = 36$$

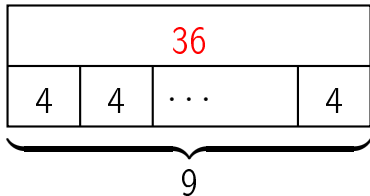


question 172

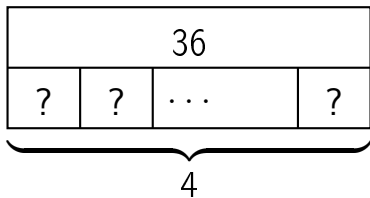


Réponse :

$$9 \times 4 = 36$$



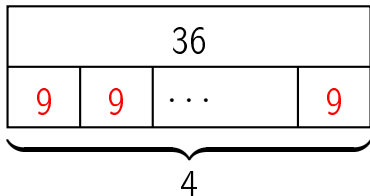
question 173



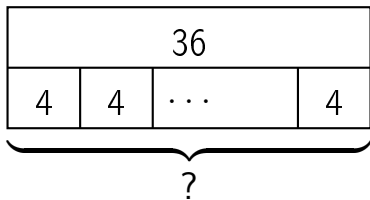
Réponse :

$$4 \times ? = 36$$

$$\text{donc } ? = 36 \div 4 = 9$$



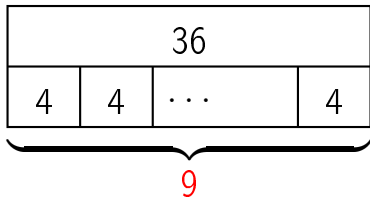
question 174



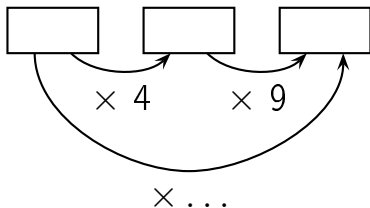
Réponse :

$$? \times 4 = 36$$

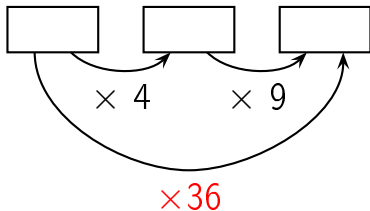
$$\text{donc } ? = 36 \div 4 = 9$$



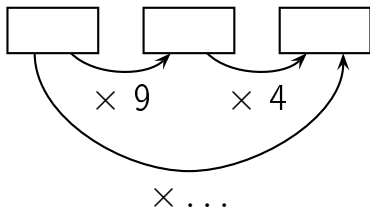
Complète.



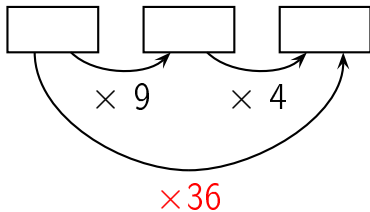
Réponse :



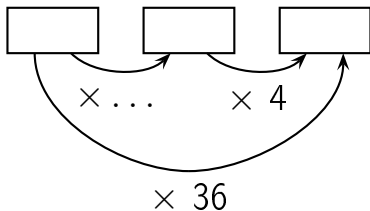
Complète.



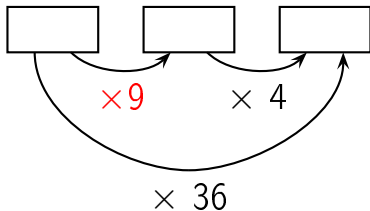
Réponse :



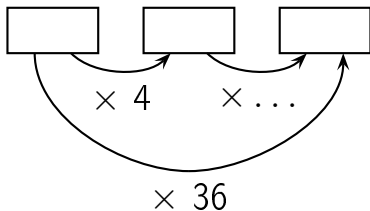
Complète.



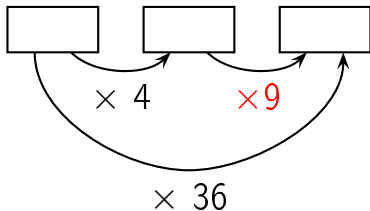
Réponse :



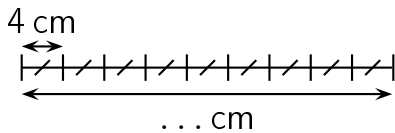
Complète.



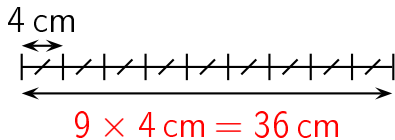
Réponse :



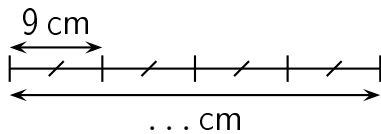
Complète.



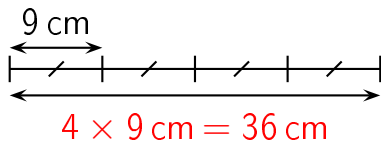
Réponse :



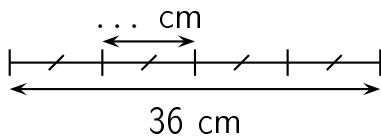
Complète.



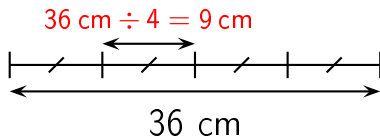
Réponse :



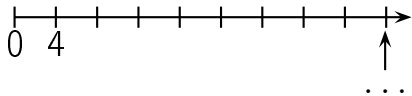
Complète.



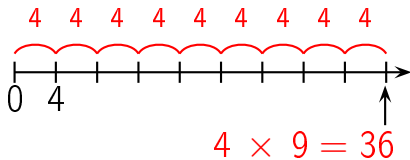
Réponse :



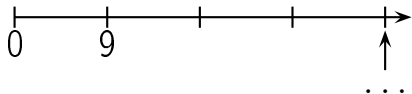
question 182



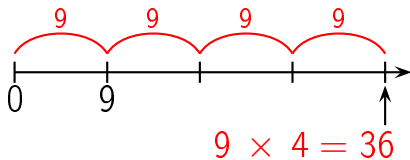
Réponse :



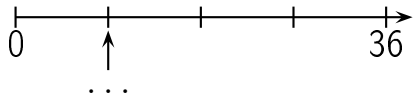
question 183



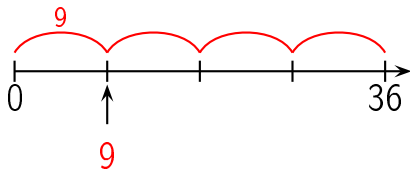
Réponse :



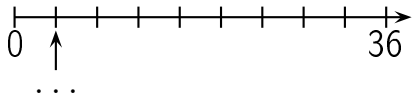
question 184



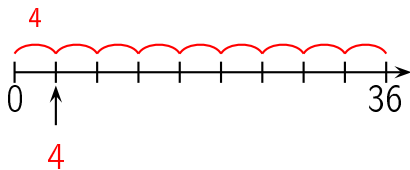
Réponse :




question 185



Réponse :



Combien y a-t-il de fleurs ?



Réponse :


36 fleurs

Il y a 4 lignes de 9 fleurs chacune. Il y a donc
 $4 \times 9 = 36$ fleurs.

Autre manière:

Il y a 9 colonnes de 4 fleurs chacune. Il y a donc $9 \times$
 $4 = 36$ fleurs.

Combien y a-t-il de fleurs ?



Réponse :

36 fleurs

Il y a 9 lignes de 4 fleurs chacune. Il y a donc
 $9 \times 4 = 36$ fleurs.

Autre manière:

Il y a 4 colonnes de 9 fleurs chacune. Il y a donc $4 \times 9 = 36$ fleurs.