



Autour de la table de 6

question 1

$$6 \times 3$$

Réponse :

$$6 \times 3 = 18$$

question 2

$$3 \times 6$$

Réponse :

$$3 \times 6 = 18$$

question 3

Complète.

$$6 \times \dots = 18$$

Réponse :

$$6 \times 3 = 18$$

Complète.

$$3 \times \dots = 18$$

Réponse :

$$3 \times 6 = 18$$

Complète.

$$\dots \times 6 = 18$$

Réponse :

$$3 \times 6 = 18$$

Complète.

$$\dots \times 3 = 18$$

Réponse :

$$6 \times 3 = 18$$

question 7

$$18 = \dots \times \dots$$

Réponse :

$$18 = 6 \times 3$$

ou

...

Dans 18,
combien de fois 6 ?

Réponse :

$$18 = 3 \times 6$$

Dans 18, il y a 3 fois 6.

Dans 20,
combien de fois 6 ?

Réponse :

$$20 = 3 \times 6 + 2$$

Dans 20, il y 3 fois 6.

Quel est le reste de la division euclidienne
de 20 par 6 ?

Réponse :

$$20 = 3 \times 6 + 2$$

Le reste de la division euclidienne
de 20 par 6 est 2.

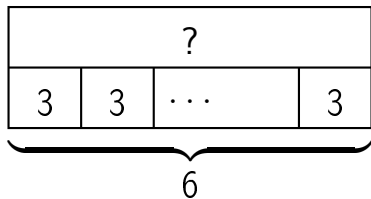
question 11

$$18 \div 6$$

Réponse :

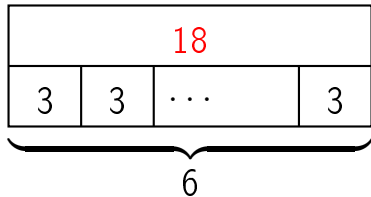
$$18 \div 6 = 3$$

question 12

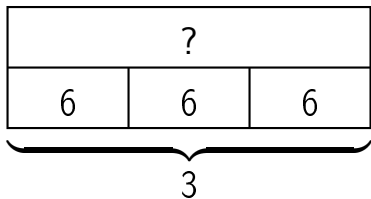


Réponse :

$$6 \times 3 = 18$$

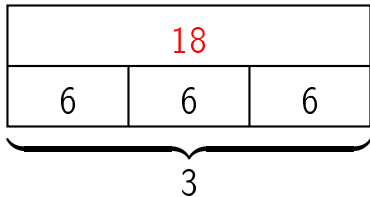


question 13

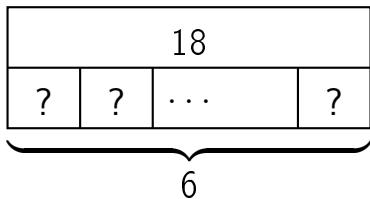


Réponse :

$$3 \times 6 = 18$$



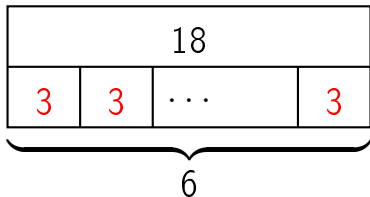
question 14



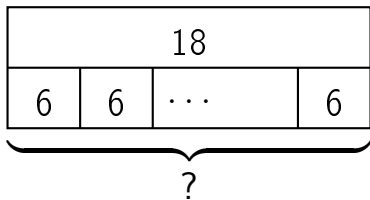
Réponse :

$$6 \times ? = 18$$

$$\text{donc } ? = 18 \div 6 = 3$$



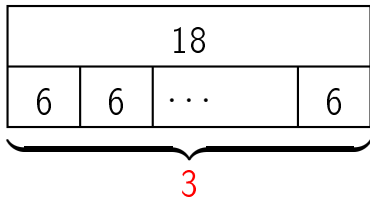
question 15



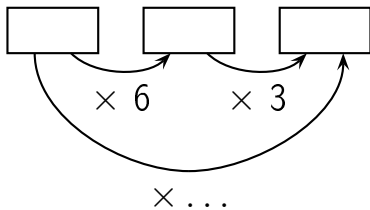
Réponse :

$$? \times 6 = 18$$

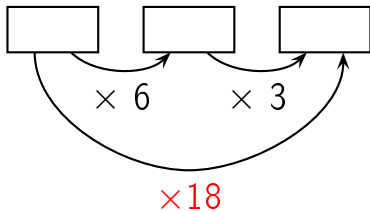
$$\text{donc } ? = 18 \div 6 = 3$$



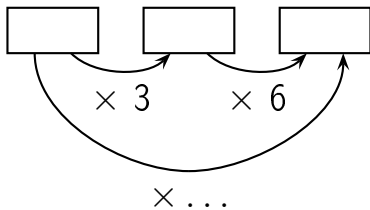
Complète.



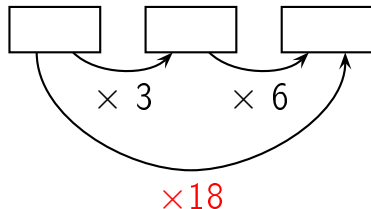
Réponse :



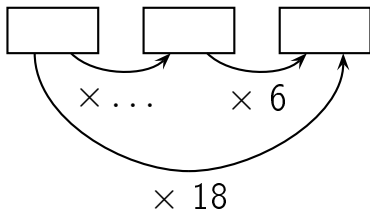
Complète.



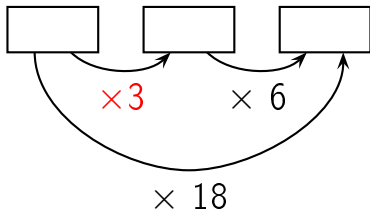
Réponse :



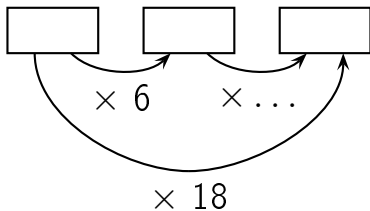
Complète.



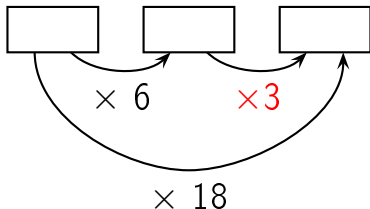
Réponse :



Complète.

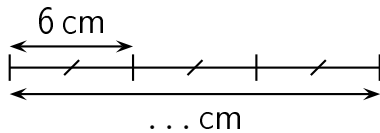


Réponse :

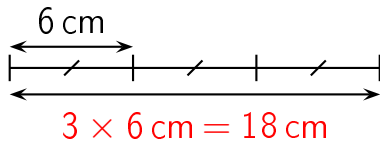


question 20

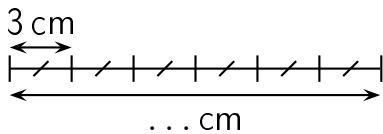
Complète.



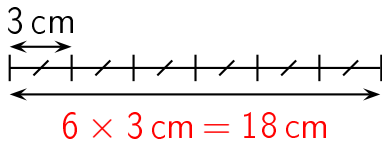
Réponse :



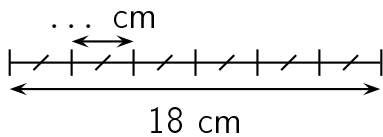
Complète.



Réponse :

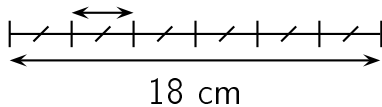


Complète.




Réponse :

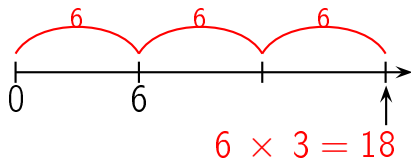
$$18 \text{ cm} \div 6 = 3 \text{ cm}$$



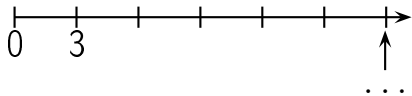
question 23



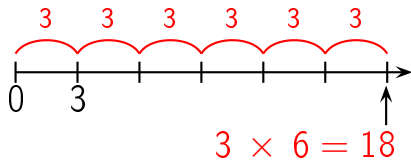
Réponse :



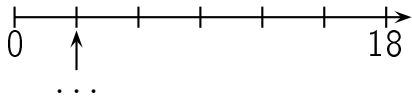
question 24



Réponse :

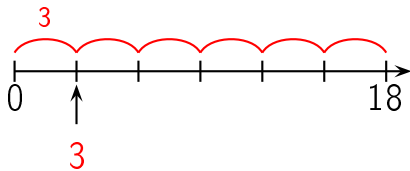


question 25




réponse à la question 25

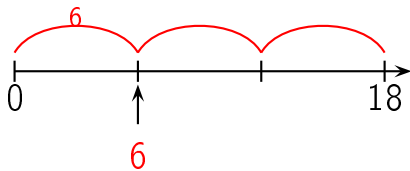
Réponse :



question 26



Réponse :



Combien y a-t-il de fleurs ?



Réponse :

18 fleurs

Il y a 6 lignes de 3 fleurs chacune. Il y a donc

$$6 \times 3 = 18 \text{ fleurs.}$$

Autre manière:

Il y a 3 colonnes de 6 fleurs chacune. Il y a donc $3 \times$

$$6 = 18 \text{ fleurs.}$$

Combien y a-t-il de fleurs ?



Réponse :

18 fleurs

Il y a 3 lignes de 6 fleurs chacune. Il y a donc

$$3 \times 6 = 18 \text{ fleurs.}$$

Autre manière:

Il y a 6 colonnes de 3 fleurs chacune. Il y a donc $6 \times$

$$3 = 18 \text{ fleurs.}$$

question 29

$$6 \times 4$$

Réponse :

$$6 \times 4 = 24$$

question 30

$$4 \times 6$$

Réponse :

$$4 \times 6 = 24$$

Complète.

$$6 \times \dots = 24$$

Réponse :

$$6 \times 4 = 24$$

Complète.

$$4 \times \dots = 24$$

Réponse :

$$4 \times 6 = 24$$

Complète.

$$\dots \times 6 = 24$$

Réponse :

$$4 \times 6 = 24$$

Complète.

$$\dots \times 4 = 24$$

Réponse :

$$6 \times 4 = 24$$

question 35

$$24 = \dots \times \dots$$

Réponse :

$$24 = 6 \times 4$$

ou

...

question 36

Dans 24,
combien de fois 6 ?

Réponse :

$$24 = 4 \times 6$$

Dans 24, il y a 4 fois 6.

question 37

Dans 29,
combien de fois 6 ?

Réponse :

$$29 = 4 \times 6 + 5$$

Dans 29, il y 4 fois 6.

Quel est le reste de la division euclidienne
de 25 par 6 ?

Réponse :

$$25 = 4 \times 6 + 1$$

Le reste de la division euclidienne
de 25 par 6 est 1.

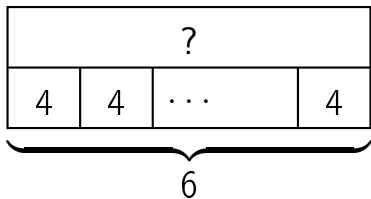
question 39

$$24 \div 6$$

Réponse :

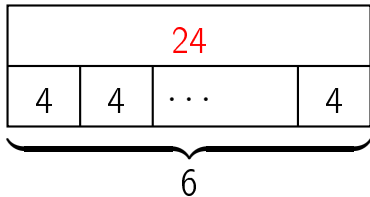
$$24 \div 6 = 4$$

question 40

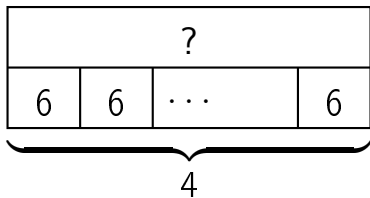


Réponse :

$$6 \times 4 = 24$$

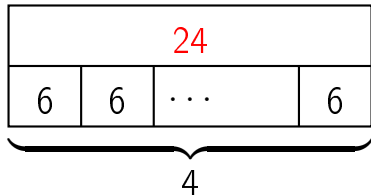


question 41

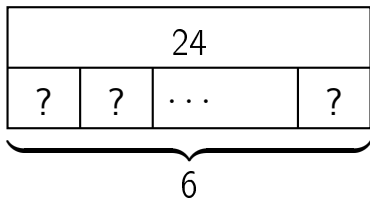


Réponse :

$$4 \times 6 = 24$$



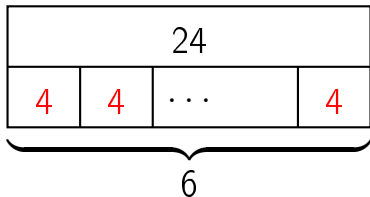
question 42



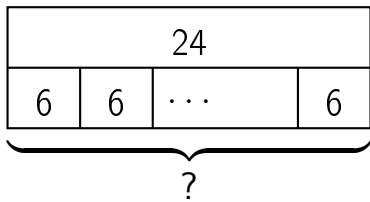
Réponse :

$$6 \times ? = 24$$

$$\text{donc } ? = 24 \div 6 = 4$$



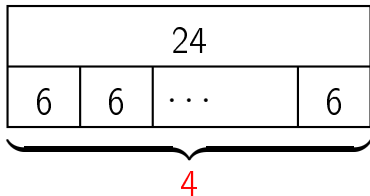
question 43



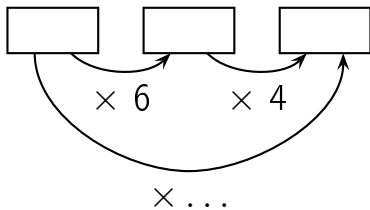
Réponse :

$$? \times 6 = 24$$

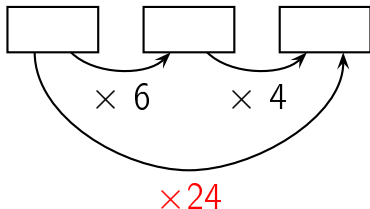
$$\text{donc } ? = 24 \div 6 = 4$$



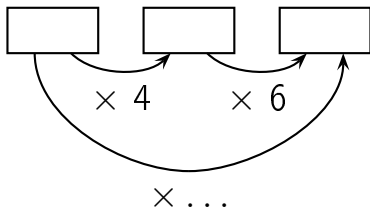
Complète.



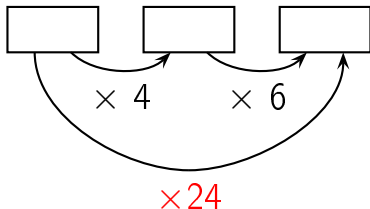
Réponse :



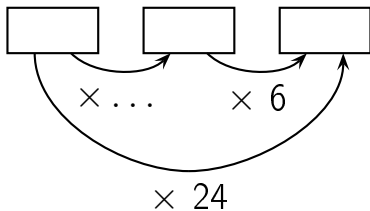
Complète.



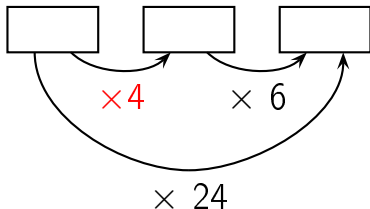
Réponse :



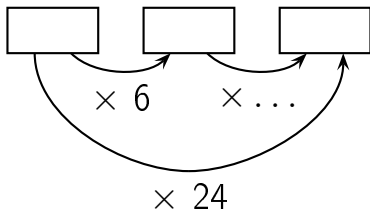
Complète.



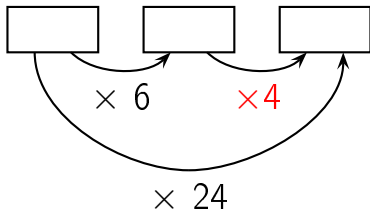
Réponse :



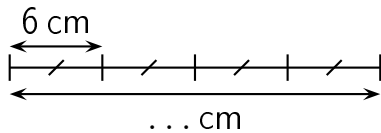
Complète.



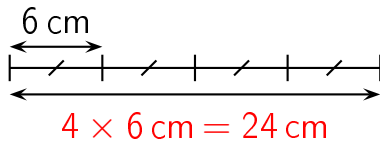
Réponse :



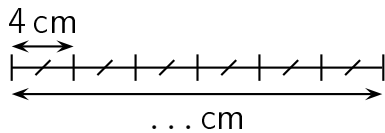
Complète.



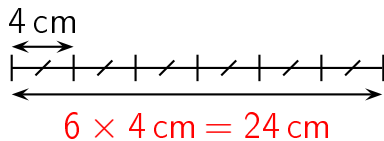
Réponse :



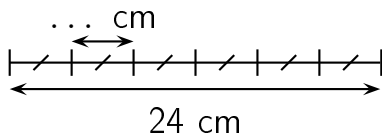
Complète.



Réponse :

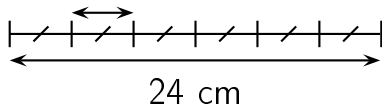


Complète.

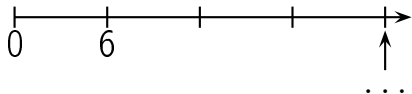


Réponse :

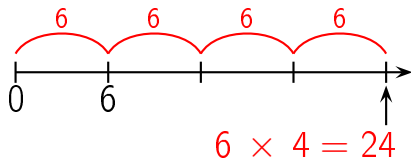
$$24 \text{ cm} \div 6 = 4 \text{ cm}$$



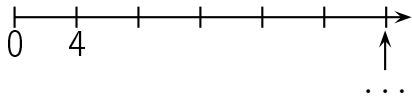
question 51



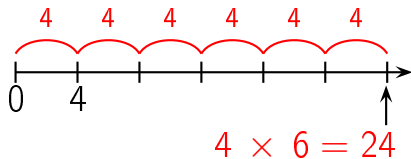
Réponse :



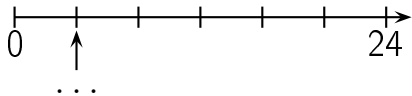
question 52



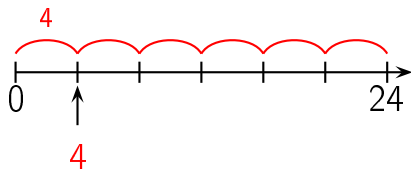
Réponse :



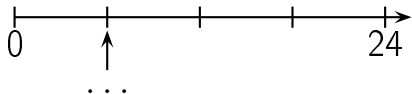
question 53



Réponse :

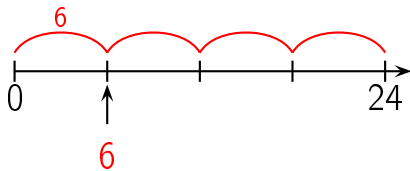


question 54



réponse à la question 54

Réponse :



Combien y a-t-il de fleurs ?



Réponse :

24 fleurs

Il y a 6 lignes de 4 fleurs chacune. Il y a donc

$$6 \times 4 = 24 \text{ fleurs.}$$

Autre manière:

Il y a 4 colonnes de 6 fleurs chacune. Il y a donc $4 \times$

$$6 = 24 \text{ fleurs.}$$

Combien y a-t-il de fleurs ?



Réponse :

24 fleurs

Il y a 4 lignes de 6 fleurs chacune. Il y a donc

$$4 \times 6 = 24 \text{ fleurs.}$$

Autre manière:

Il y a 6 colonnes de 4 fleurs chacune. Il y a donc $6 \times$

$$4 = 24 \text{ fleurs.}$$

question 57

$$6 \times 5$$

Réponse :

$$6 \times 5 = 30$$

question 58

$$5 \times 6$$

Réponse :

$$5 \times 6 = 30$$

Complète.

$$6 \times \dots = 30$$

Réponse :

$$6 \times 5 = 30$$

Complète.

$$5 \times \dots = 30$$

Réponse :

$$5 \times 6 = 30$$

Complète.

$$\dots \times 6 = 30$$

Réponse :

$$5 \times 6 = 30$$

Complète.

$$\dots \times 5 = 30$$

Réponse :

$$6 \times 5 = 30$$

question 63

$$30 = \dots \times \dots$$

Réponse :

$$30 = 6 \times 5$$

ou

...

Dans 30,
combien de fois 6 ?

Réponse :

$$30 = 5 \times 6$$

Dans 30, il y a 5 fois 6.

question 65

Dans 31,
combien de fois 6 ?

Réponse :

$$31 = 5 \times 6 + 1$$

Dans 31, il y 5 fois 6.

Quel est le reste de la division euclidienne
de 35 par 6 ?

Réponse :

$$35 = 5 \times 6 + 5$$

Le reste de la division euclidienne
de 35 par 6 est 5.

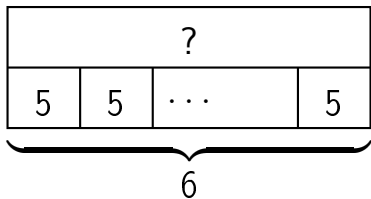
question 67

$$30 \div 6$$

Réponse :

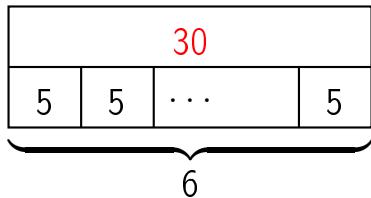
$$30 \div 6 = 5$$

question 68

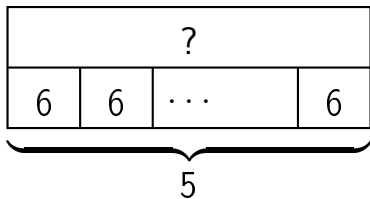


Réponse :

$$6 \times 5 = 30$$

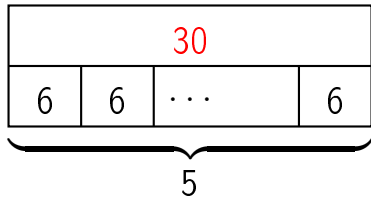


question 69

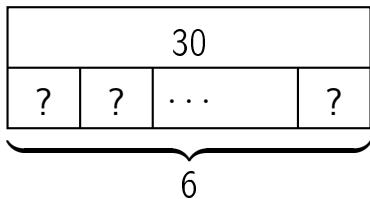


Réponse :

$$5 \times 6 = 30$$



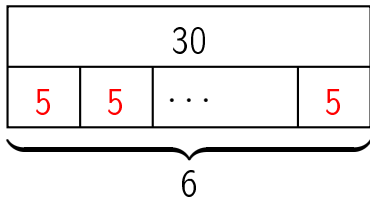
question 70



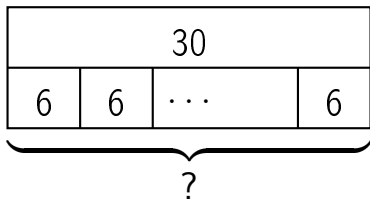
Réponse :

$$6 \times ? = 30$$

$$\text{donc } ? = 30 \div 6 = 5$$



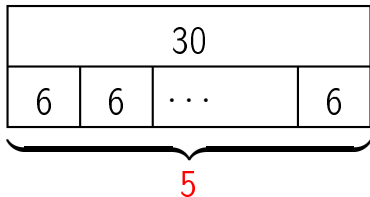
question 71



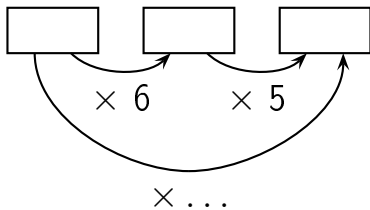
Réponse :

$$? \times 6 = 30$$

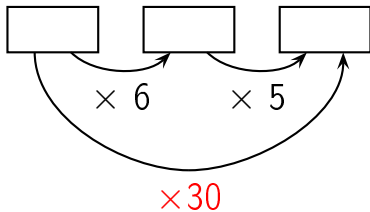
$$\text{donc } ? = 30 \div 6 = 5$$



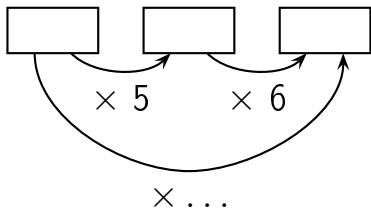
Complète.



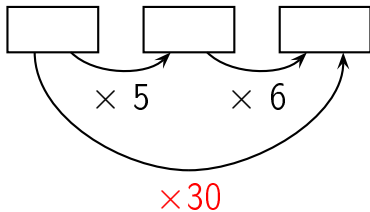
Réponse :



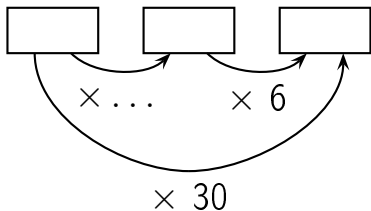
Complète.



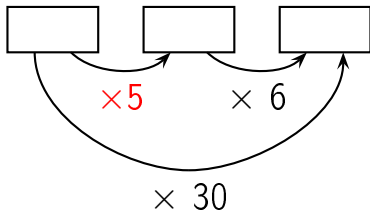
Réponse :



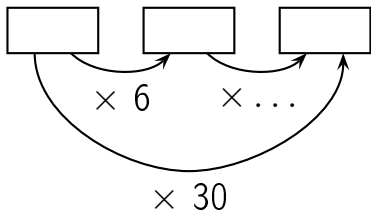
Complète.



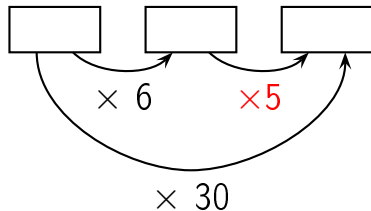
Réponse :



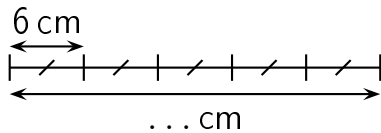
Complète.



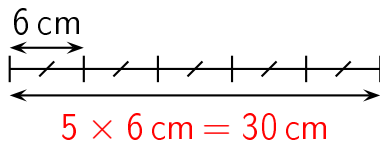
Réponse :



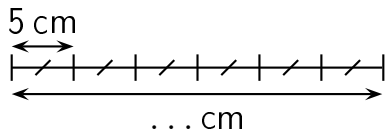
Complète.



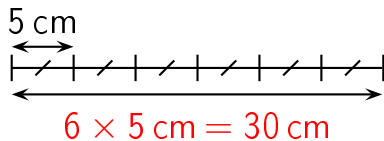
Réponse :



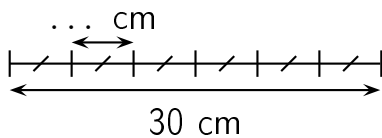
Complète.



Réponse :

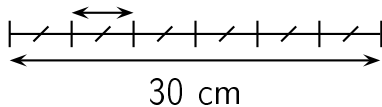


Complète.

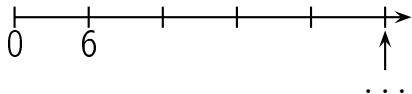


Réponse :

$$30 \text{ cm} \div 6 = 5 \text{ cm}$$

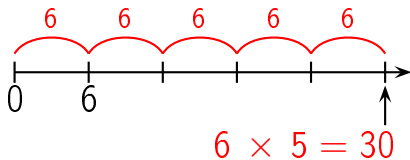


question 79

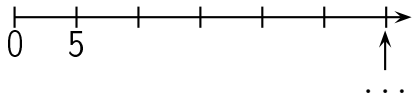


réponse à la question 79

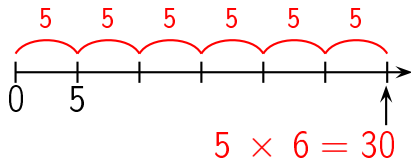
Réponse :



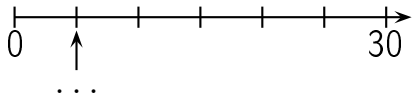
question 80



Réponse :

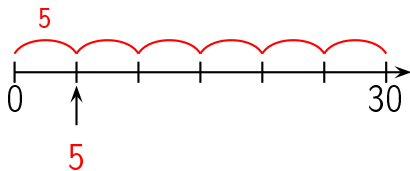


question 81

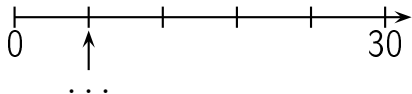


réponse à la question 81

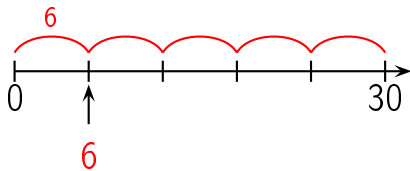
Réponse :




question 82



Réponse :



Combien y a-t-il de fleurs ?



Réponse :

30 fleurs

Il y a 6 lignes de 5 fleurs chacune. Il y a donc


$$6 \times 5 = 30 \text{ fleurs.}$$

Autre manière:

Il y a 5 colonnes de 6 fleurs chacune. Il y a donc $5 \times$

$$6 = 30 \text{ fleurs.}$$

Combien y a-t-il de fleurs ?



Réponse :

30 fleurs

Il y a 5 lignes de 6 fleurs chacune. Il y a donc

$$5 \times 6 = 30 \text{ fleurs.}$$

Autre manière:

Il y a 6 colonnes de 5 fleurs chacune. Il y a donc $6 \times$

$$5 = 30 \text{ fleurs.}$$

question 85

$$6 \times 6$$

Réponse :

$$6 \times 6 = 36$$

Complète.

$$6 \times \dots = 36$$

Réponse :

$$6 \times 6 = 36$$

Complète.

$$\dots \times 6 = 36$$

Réponse :

$$6 \times 6 = 36$$

question 88

$$36 = \dots \times \dots$$

Réponse :

$$36 = 6 \times 6$$

ou

...

Dans 36,
combien de fois 6 ?

Réponse :

$$36 = 6 \times 6$$

Dans 36, il y a 6 fois 6.

Dans 39,
combien de fois 6 ?

Réponse :

$$39 = 6 \times 6 + 3$$

Dans 39, il y 6 fois 6.

Quel est le reste de la division euclidienne
de 40 par 6 ?

Réponse :

$$40 = 6 \times 6 + 4$$

Le reste de la division euclidienne
de 40 par 6 est 4.

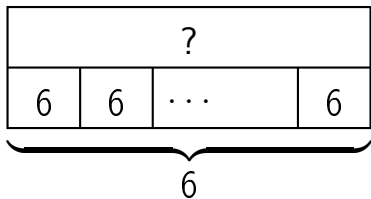
question 92

$$36 \div 6$$

Réponse :

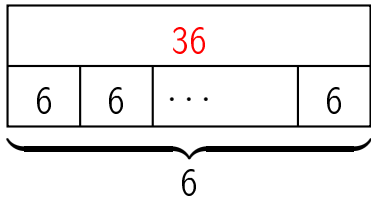
$$36 \div 6 = 6$$

question 93

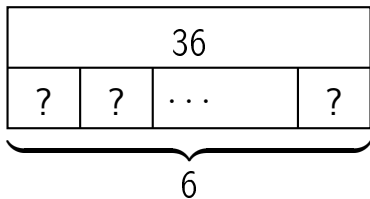


Réponse :

$$6 \times 6 = 36$$



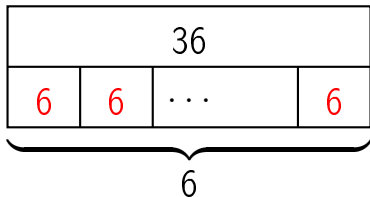
question 94



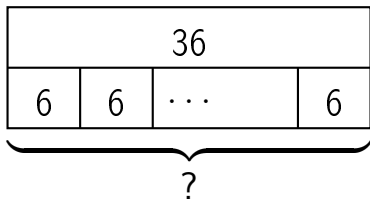
Réponse :

$$6 \times ? = 36$$

$$\text{donc } ? = 36 \div 6 = 6$$



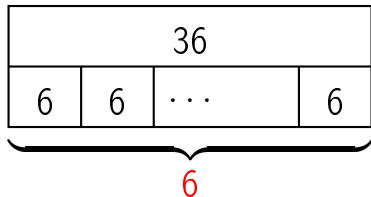
question 95



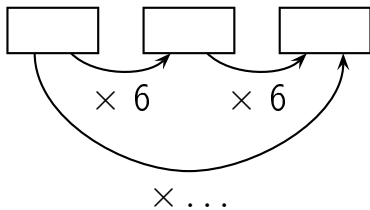
Réponse :

$$? \times 6 = 36$$

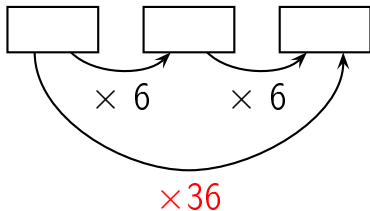
$$\text{donc } ? = 36 \div 6 = 6$$



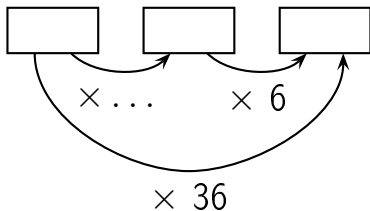
Complète.



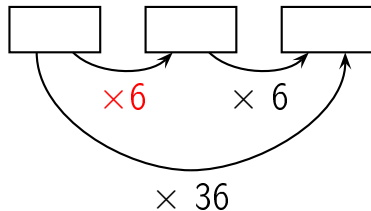
Réponse :



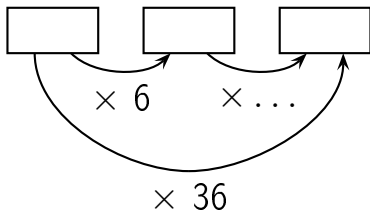
Complète.



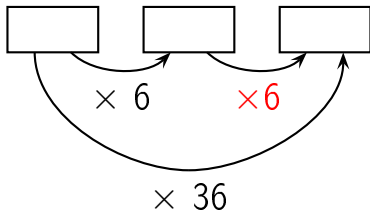
Réponse :



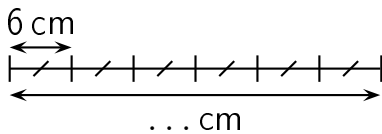
Complète.



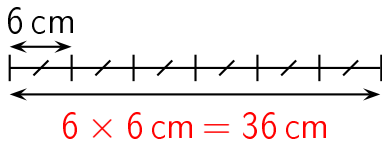
Réponse :



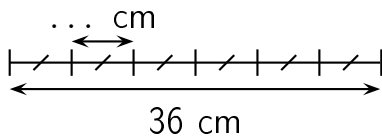
Complète.



Réponse :

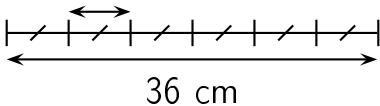


Complète.

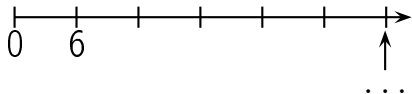


Réponse :

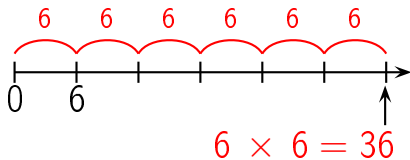
$$36 \text{ cm} \div 6 = 6 \text{ cm}$$



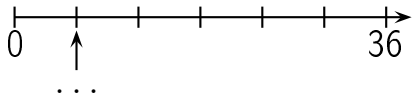
question 101



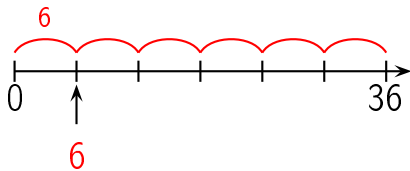
Réponse :




question 102



Réponse :



Combien y a-t-il de fleurs ?



Réponse :

36 fleurs

Il y a 6 lignes de 6 fleurs chacune. Il y a donc

$$6 \times 6 = 36 \text{ fleurs.}$$

Autre manière:

Il y a 6 colonnes de 6 fleurs chacune. Il y a donc $6 \times$

$$6 = 36 \text{ fleurs.}$$

question 104

$$6 \times 7$$

Réponse :

$$6 \times 7 = 42$$

question 105

$$7 \times 6$$

Réponse :

$$7 \times 6 = 42$$

Complète.

$$6 \times \dots = 42$$

Réponse :

$$6 \times 7 = 42$$

Complète.

$$7 \times \dots = 42$$

Réponse :

$$7 \times 6 = 42$$

Complète.

$$\dots \times 6 = 42$$

Réponse :

$$7 \times 6 = 42$$

Complète.

$$\dots \times 7 = 42$$

Réponse :

$$6 \times 7 = 42$$

question 110

$$42 = \dots \times \dots$$

Réponse :

$$42 = 6 \times 7$$

ou

...

Dans 42,
combien de fois 6 ?

Réponse :

$$42 = 7 \times 6$$

Dans 42, il y a 7 fois 6.

Dans 46,
combien de fois 6 ?

Réponse :

$$46 = 7 \times 6 + 4$$

Dans 46, il y 7 fois 6.

Quel est le reste de la division euclidienne
de 44 par 6 ?

Réponse :

$$44 = 7 \times 6 + 2$$

Le reste de la division euclidienne
de 44 par 6 est 2.

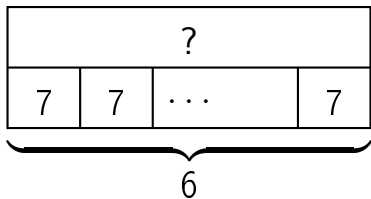
question 114

$$42 \div 6$$

Réponse :

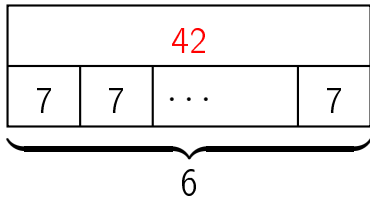
$$42 \div 6 = 7$$

question 115

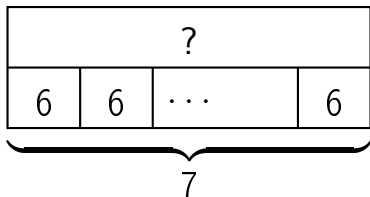


Réponse :

$$6 \times 7 = 42$$

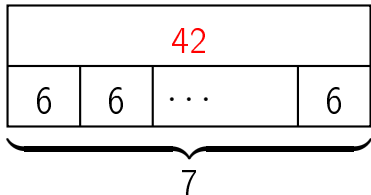


question 116

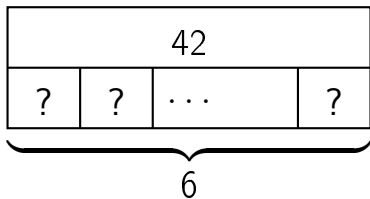


Réponse :

$$7 \times 6 = 42$$



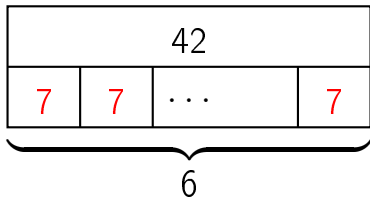
question 117



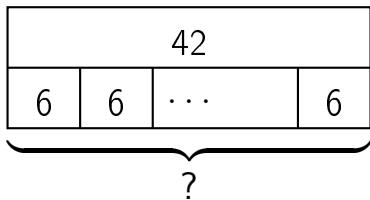
Réponse :

$$6 \times ? = 42$$

$$\text{donc } ? = 42 \div 6 = 7$$



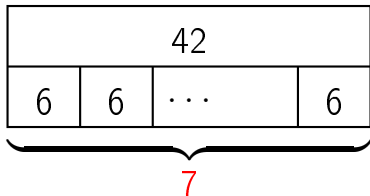
question 118



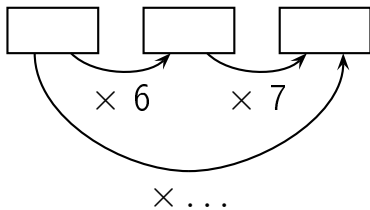
Réponse :

$$? \times 6 = 42$$

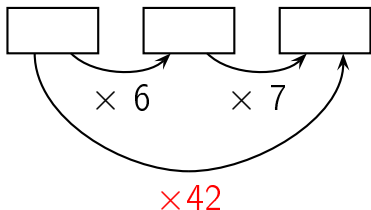
$$\text{donc } ? = 42 \div 6 = 7$$



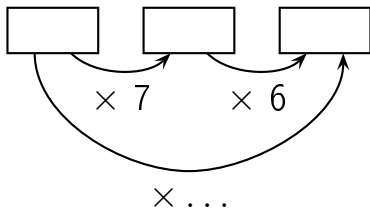
Complète.



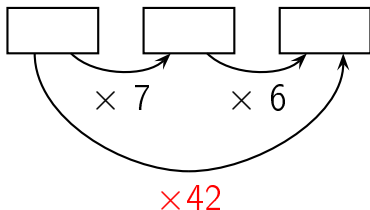
Réponse :



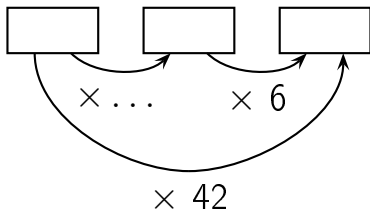
Complète.



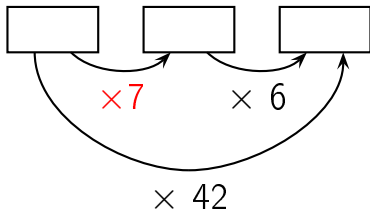
Réponse :



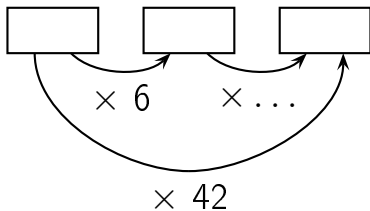
Complète.



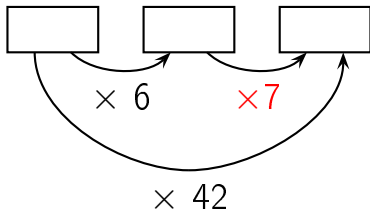
Réponse :



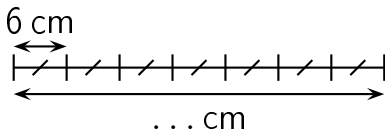
Complète.



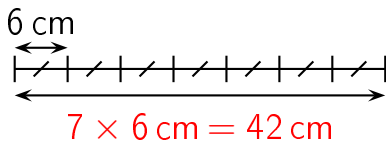
Réponse :



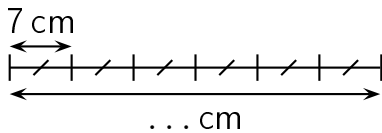
Complète.



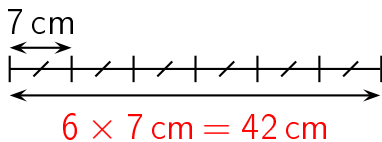
Réponse :



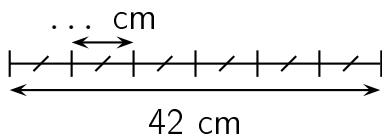
Complète.



Réponse :

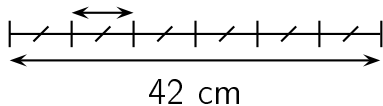


Complète.

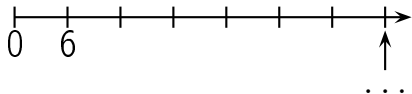


Réponse :

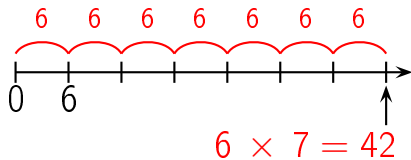
$$42 \text{ cm} \div 6 = 7 \text{ cm}$$



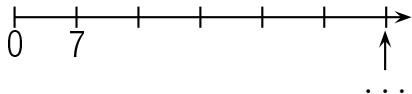
question 126



Réponse :

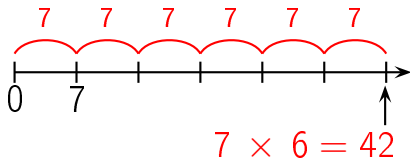


question 127

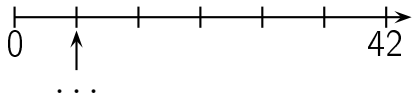


réponse à la question 127

Réponse :

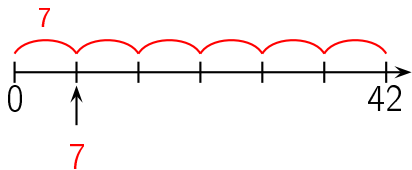


question 128

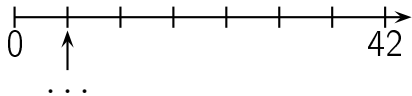


réponse à la question 128

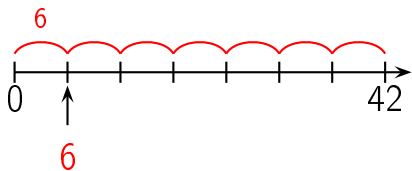
Réponse :




question 129



Réponse :



Combien y a-t-il de fleurs ?



Réponse :

42 fleurs

Il y a 6 lignes de 7 fleurs chacune. Il y a donc


$$6 \times 7 = 42 \text{ fleurs.}$$

Autre manière:

Il y a 7 colonnes de 6 fleurs chacune. Il y a donc $7 \times$

$$6 = 42 \text{ fleurs.}$$

Combien y a-t-il de fleurs ?



Réponse :

42 fleurs

Il y a 7 lignes de 6 fleurs chacune. Il y a donc

$$7 \times 6 = 42 \text{ fleurs.}$$

Autre manière:

Il y a 6 colonnes de 7 fleurs chacune. Il y a donc $6 \times$

$$7 = 42 \text{ fleurs.}$$

question 132

$$6 \times 8$$

Réponse :

$$6 \times 8 = 48$$

question 133

$$8 \times 6$$

Réponse :

$$8 \times 6 = 48$$

Complète.

$$6 \times \dots = 48$$

Réponse :

$$6 \times 8 = 48$$

Complète.

$$8 \times \dots = 48$$

Réponse :

$$8 \times 6 = 48$$

Complète.

$$\dots \times 6 = 48$$

Réponse :

$$8 \times 6 = 48$$

Complète.

$$\dots \times 8 = 48$$

Réponse :

$$6 \times 8 = 48$$

question 138

$$48 = \dots \times \dots$$

Réponse :

$$48 = 6 \times 8$$

ou

...

Dans 48,
combien de fois 6 ?

Réponse :

$$48 = 8 \times 6$$

Dans 48, il y a 8 fois 6.

Dans 50,
combien de fois 6 ?

Réponse :

$$50 = 8 \times 6 + 2$$

Dans 50, il y a 8 fois 6.

Quel est le reste de la division euclidienne
de 49 par 6 ?

Réponse :

$$49 = 8 \times 6 + 1$$

Le reste de la division euclidienne
de 49 par 6 est 1.

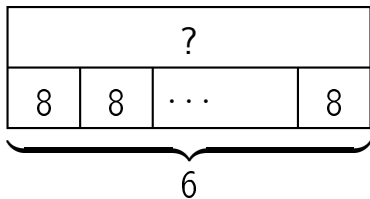
question 142

$$48 \div 6$$

Réponse :

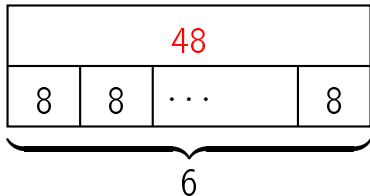
$$48 \div 6 = 8$$

question 143

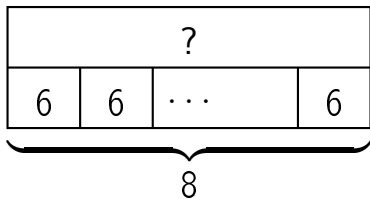


Réponse :

$$6 \times 8 = 48$$

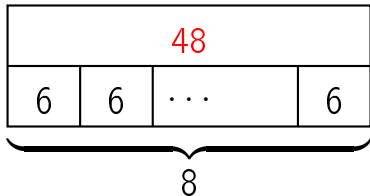


question 144

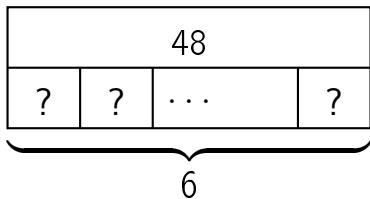


Réponse :

$$8 \times 6 = 48$$



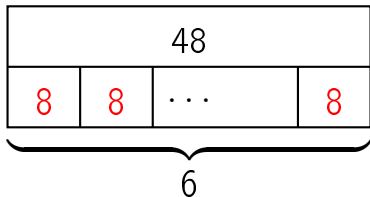
question 145



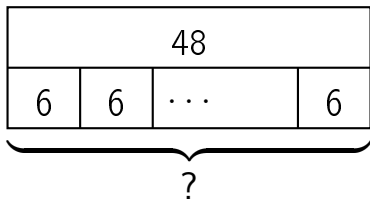
Réponse :

$$6 \times ? = 48$$

$$\text{donc } ? = 48 \div 6 = 8$$



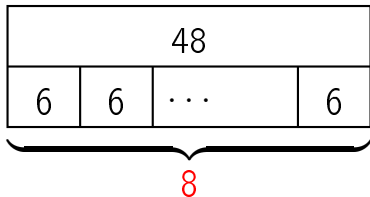
question 146



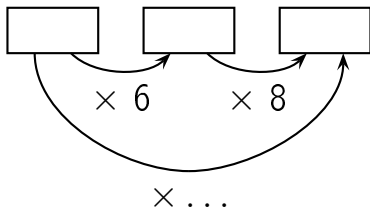
Réponse :

$$? \times 6 = 48$$

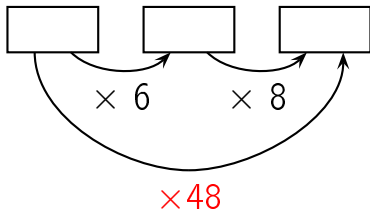
$$\text{donc } ? = 48 \div 6 = 8$$



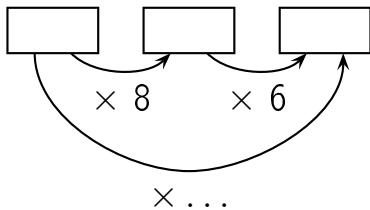
Complète.



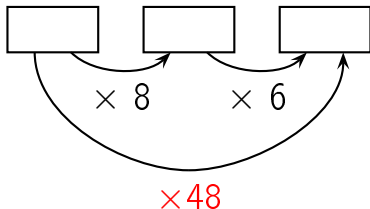
Réponse :



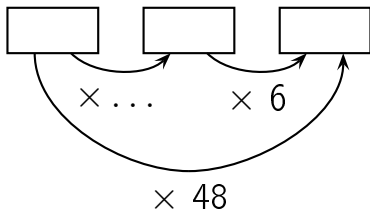
Complète.



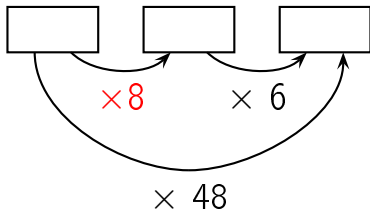
Réponse :



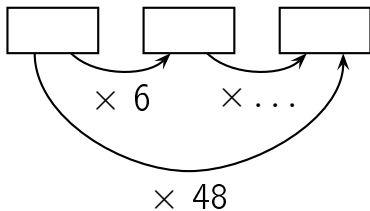
Complète.



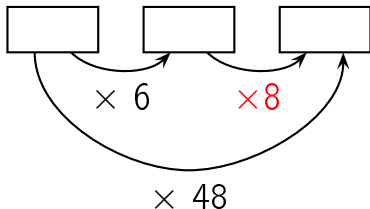
Réponse :



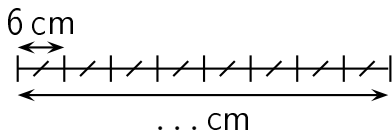
Complète.



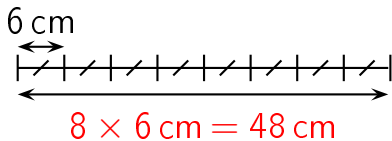
Réponse :



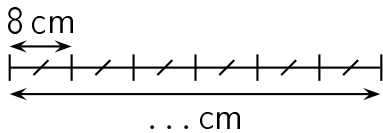
Complète.



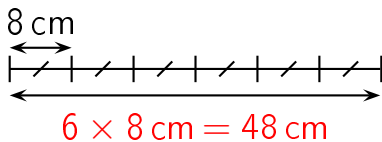
Réponse :



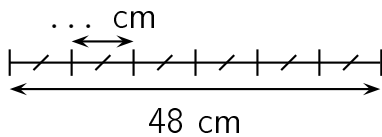
Complète.



Réponse :

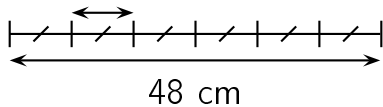


Complète.

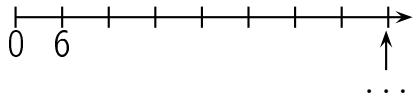


Réponse :

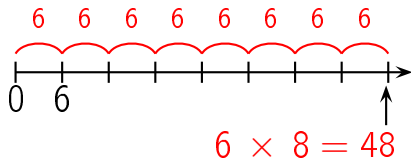
$$48 \text{ cm} \div 6 = 8 \text{ cm}$$



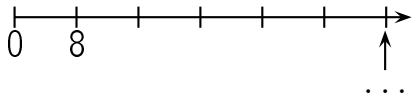
question 154



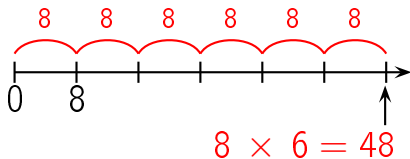
Réponse :



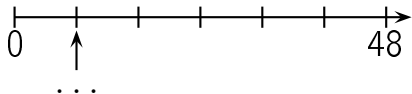
question 155



Réponse :

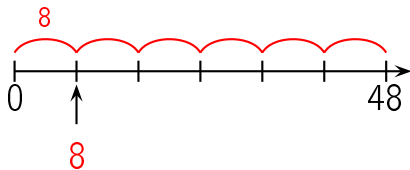


question 156

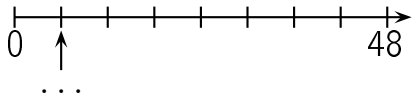


réponse à la question 156

Réponse :

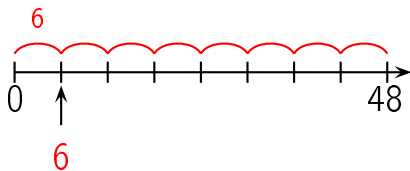


question 157




réponse à la question 157

Réponse :



Combien y a-t-il de fleurs ?



Réponse :

48 fleurs

Il y a 6 lignes de 8 fleurs chacune. Il y a donc


$$6 \times 8 = 48 \text{ fleurs.}$$

Autre manière:

Il y a 8 colonnes de 6 fleurs chacune. Il y a donc $8 \times$

$$6 = 48 \text{ fleurs.}$$

Combien y a-t-il de fleurs ?



Réponse :

48 fleurs

Il y a 8 lignes de 6 fleurs chacune. Il y a donc

$$8 \times 6 = 48 \text{ fleurs.}$$

Autre manière:

Il y a 6 colonnes de 8 fleurs chacune. Il y a donc $6 \times$

$$8 = 48 \text{ fleurs.}$$

question 160

$$6 \times 9$$

Réponse :

$$6 \times 9 = 54$$

question 161

$$9 \times 6$$

Réponse :

$$9 \times 6 = 54$$

Complète.

$$6 \times \dots = 54$$

Réponse :

$$6 \times 9 = 54$$

Complète.

$$9 \times \dots = 54$$

Réponse :

$$9 \times 6 = 54$$

Complète.

$$\dots \times 6 = 54$$

Réponse :

$$9 \times 6 = 54$$

Complète.

$$\dots \times 9 = 54$$

Réponse :

$$6 \times 9 = 54$$

question 166

$$54 = \dots \times \dots$$

Réponse :

$$54 = 6 \times 9$$

ou

...

Dans 54,
combien de fois 6 ?

Réponse :

$$54 = 9 \times 6$$

Dans 54, il y a 9 fois 6.

Dans 59,
combien de fois 6 ?

Réponse :

$$59 = 9 \times 6 + 5$$

Dans 59, il y 9 fois 6.

Quel est le reste de la division euclidienne
de 57 par 6 ?

Réponse :

$$57 = 9 \times 6 + 3$$

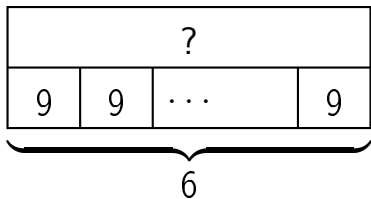
Le reste de la division euclidienne
de 57 par 6 est 3.

$$54 \div 6$$

Réponse :

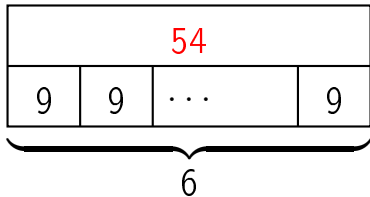
$$54 \div 6 = 9$$

question 171

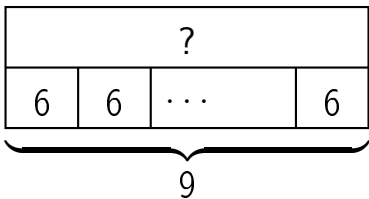


Réponse :

$$6 \times 9 = 54$$

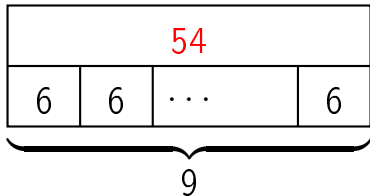


question 172

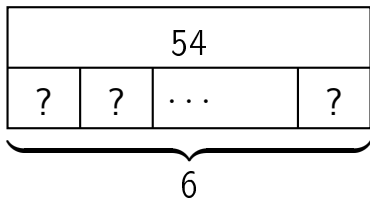


Réponse :

$$9 \times 6 = 54$$



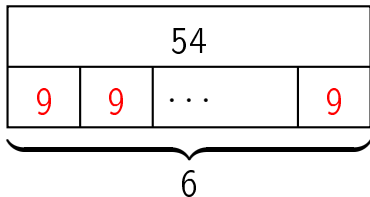
question 173



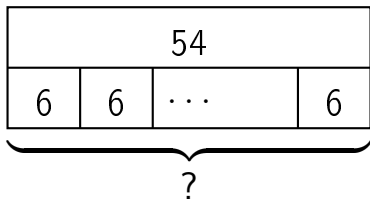
Réponse :

$$6 \times ? = 54$$

$$\text{donc } ? = 54 \div 6 = 9$$



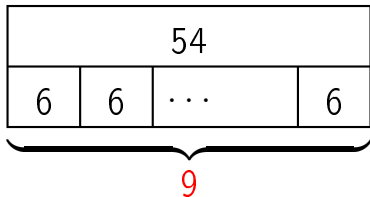
question 174



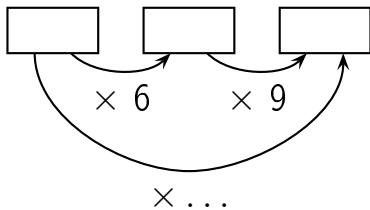
Réponse :

$$? \times 6 = 54$$

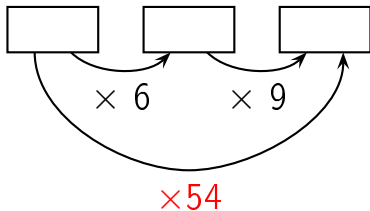
$$\text{donc } ? = 54 \div 6 = 9$$



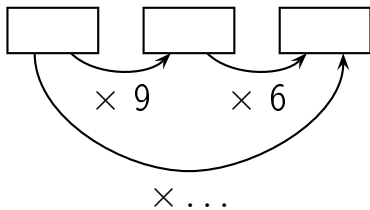
Complète.



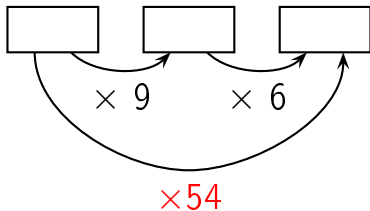
Réponse :



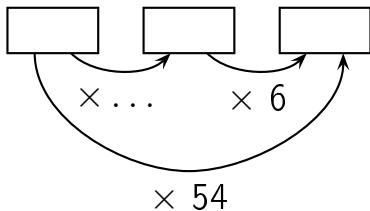
Complète.



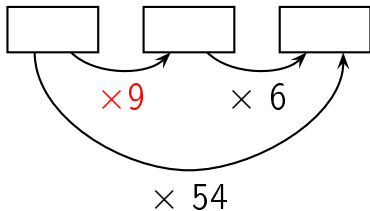
Réponse :



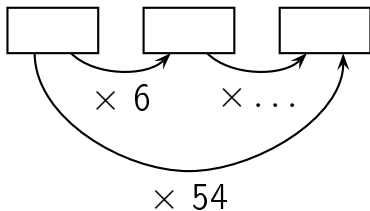
Complète.



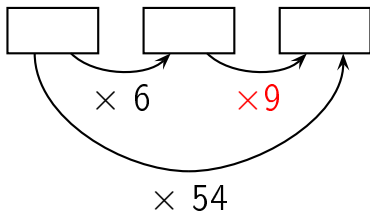
Réponse :



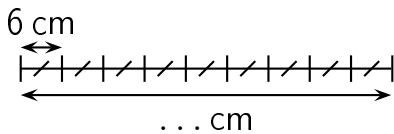
Complète.



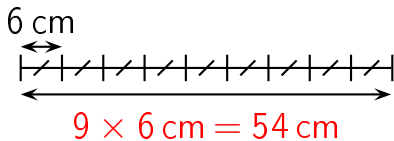
Réponse :



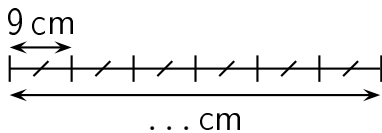
Complète.



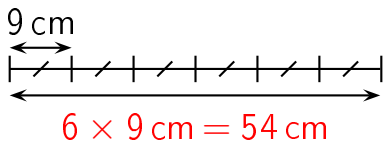
Réponse :



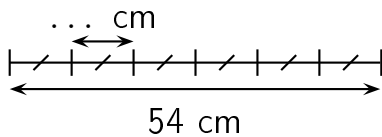
Complète.



Réponse :

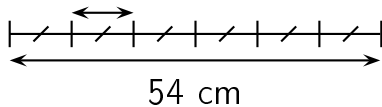


Complète.

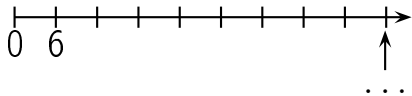


Réponse :

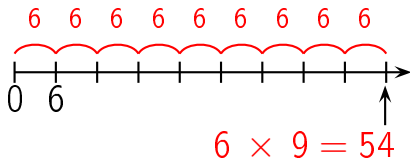
$$54 \text{ cm} \div 6 = 9 \text{ cm}$$



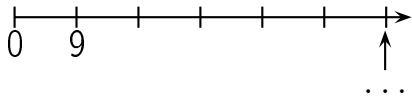
question 182



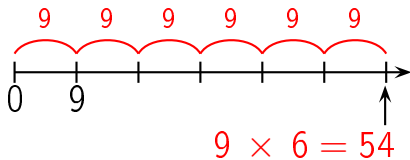
Réponse :



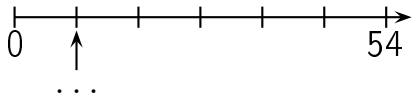
question 183



Réponse :

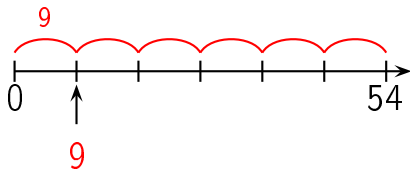


question 184

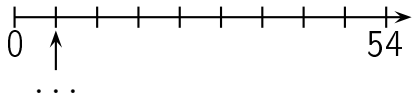


réponse à la question 184

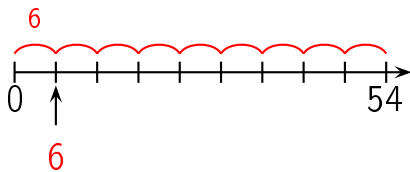
Réponse :




question 185



Réponse :



Combien y a-t-il de fleurs ?



Réponse :

54 fleurs

Il y a 6 lignes de 9 fleurs chacune. Il y a donc


$$6 \times 9 = 54 \text{ fleurs.}$$

Autre manière:

Il y a 9 colonnes de 6 fleurs chacune. Il y a donc $9 \times$

$$6 = 54 \text{ fleurs.}$$

Combien y a-t-il de fleurs ?



Réponse :

54 fleurs

Il y a 9 lignes de 6 fleurs chacune. Il y a donc
 $9 \times 6 = 54$ fleurs.

Autre manière:

Il y a 6 colonnes de 9 fleurs chacune. Il y a donc $6 \times 9 = 54$ fleurs.