



# Autour de la table de 7

# question 1

$$7 \times 3$$

**Réponse :**

$$7 \times 3 = 21$$

## question 2

$$3 \times 7$$

**Réponse :**

$$3 \times 7 = 21$$

Complète.

$$7 \times \dots = 21$$

**Réponse :**

$$7 \times 3 = 21$$

Complète.

$$3 \times \dots = 21$$



**Réponse :**

$$3 \times 7 = 21$$

Complète.

$$\dots \times 7 = 21$$

**Réponse :**

$$3 \times 7 = 21$$

Complète.

$$\dots \times 3 = 21$$

**Réponse :**

$$7 \times 3 = 21$$

# question 7

$$21 = \dots \times \dots$$

**Réponse :**

$$21 = 7 \times 3$$

ou

...

Dans 21,  
combien de fois 7 ?



**Réponse :**

$$21 = 3 \times 7$$

Dans 21, il y a 3 fois 7.

Dans 27,  
combien de fois 7 ?

## Réponse :

$$27 = 3 \times 7 + 6$$

Dans 27, il y 3 fois 7.

Quel est le reste de la division euclidienne  
de 22 par 7 ?

**Réponse :**

$$22 = 3 \times 7 + 1$$

Le reste de la division euclidienne  
de 22 par 7 est 1.

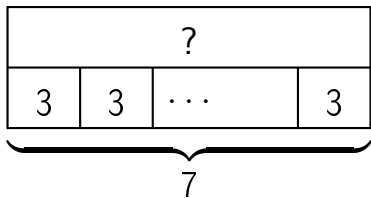
# question 11

$$21 \div 7$$

**Réponse :**

$$21 \div 7 = 3$$

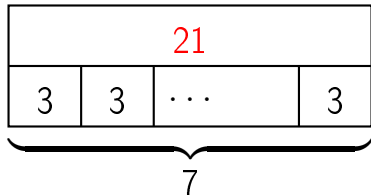
# question 12



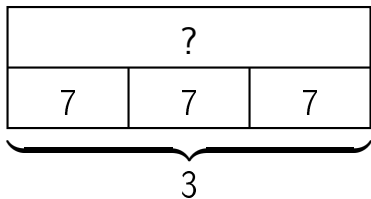


**Réponse :**

$$7 \times 3 = 21$$

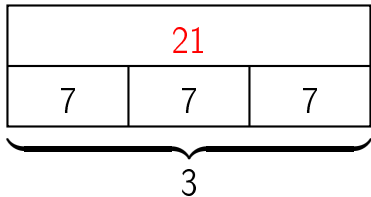


# question 13

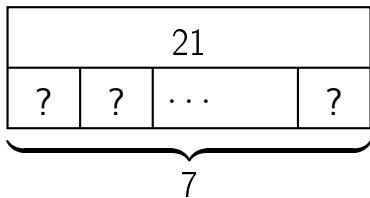


**Réponse :**

$$3 \times 7 = 21$$



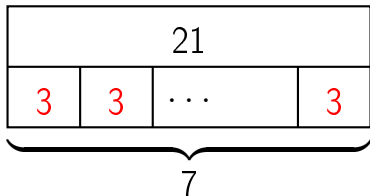
# question 14



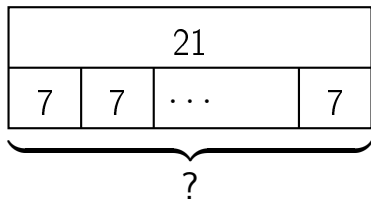
**Réponse :**

$$7 \times ? = 21$$

$$\text{donc } ? = 21 \div 7 = 3$$



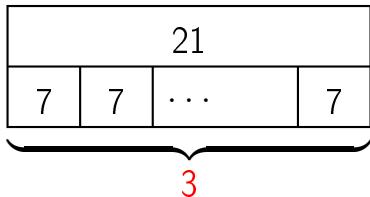
# question 15



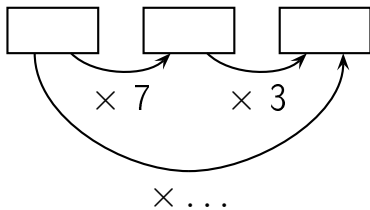
**Réponse :**

$$? \times 7 = 21$$

$$\text{donc } ? = 21 \div 7 = 3$$

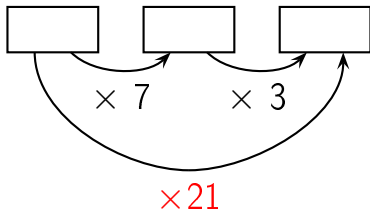


Complète.

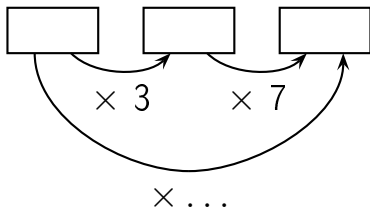




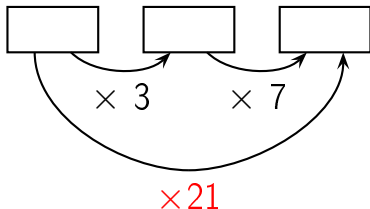
Réponse :



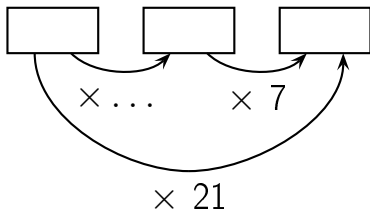
Complète.



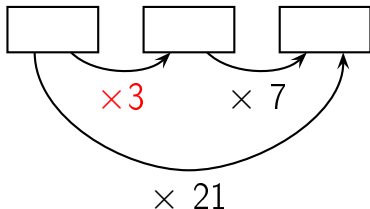
Réponse :



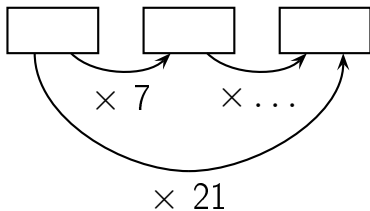
Complète.



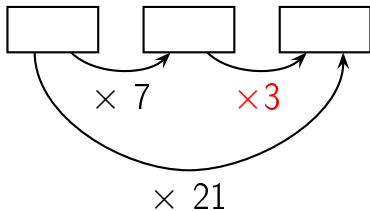
Réponse :



Complète.

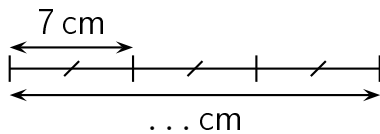


Réponse :



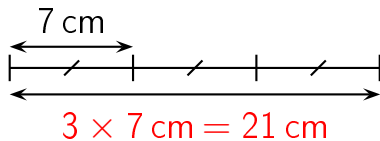
question 20

Complète.

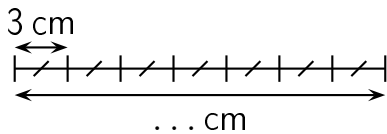




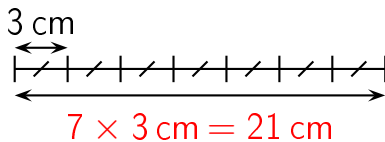
Réponse :



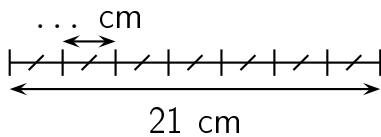
Complète.



Réponse :

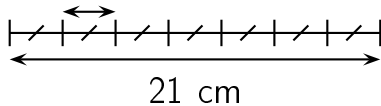


Complète.




Réponse :

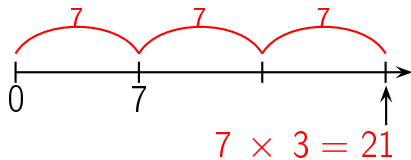
$$21 \text{ cm} \div 7 = 3 \text{ cm}$$



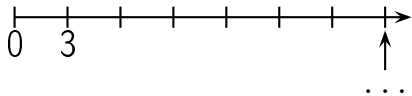
# question 23



Réponse :



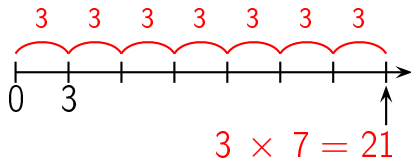
# question 24



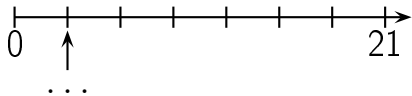


réponse à la question 24

Réponse :

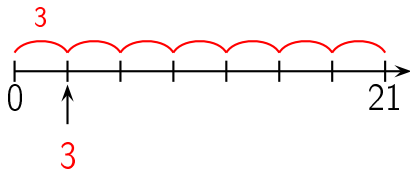


# question 25




réponse à la question 25

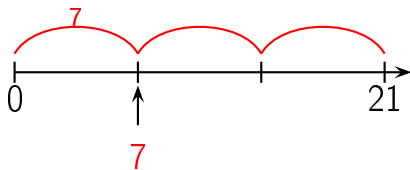
Réponse :



# question 26



Réponse :



Combien y a-t-il de fleurs ?



**Réponse :**

21 fleurs

Il y a 7 lignes de 3 fleurs chacune. Il y a donc

$$7 \times 3 = 21 \text{ fleurs.}$$

Autre manière:

Il y a 3 colonnes de 7 fleurs chacune. Il y a donc  $3 \times$

$$7 = 21 \text{ fleurs.}$$

Combien y a-t-il de fleurs ?





**Réponse :**

21 fleurs

Il y a 3 lignes de 7 fleurs chacune. Il y a donc

$$3 \times 7 = 21 \text{ fleurs.}$$

Autre manière:

Il y a 7 colonnes de 3 fleurs chacune. Il y a donc  $7 \times$

$$3 = 21 \text{ fleurs.}$$

# question 29

$$7 \times 4$$

**Réponse :**

$$7 \times 4 = 28$$

# question 30

$$4 \times 7$$

**Réponse :**

$$4 \times 7 = 28$$

Complète.

$$7 \times \dots = 28$$

**Réponse :**

$$7 \times 4 = 28$$

Complète.

$$4 \times \dots = 28$$



**Réponse :**

$$4 \times 7 = 28$$

Complète.

$$\dots \times 7 = 28$$

**Réponse :**

$$4 \times 7 = 28$$

Complète.

$$\dots \times 4 = 28$$

**Réponse :**

$$7 \times 4 = 28$$

# question 35

$$28 = \dots \times \dots$$

**Réponse :**

$$28 = 7 \times 4$$

ou

...

## question 36

Dans 28,  
combien de fois 7 ?



**Réponse :**

$$28 = 4 \times 7$$

Dans 28, il y a 4 fois 7.

# question 37

Dans 33,  
combien de fois 7 ?

## Réponse :

$$33 = 4 \times 7 + 5$$

Dans 33, il y 4 fois 7.

Quel est le reste de la division euclidienne  
de 32 par 7 ?

**Réponse :**

$$32 = 4 \times 7 + 4$$

Le reste de la division euclidienne  
de 32 par 7 est 4.

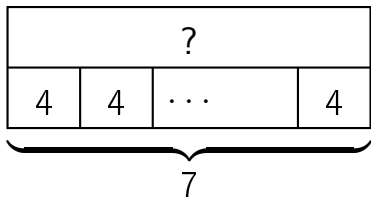
# question 39

$$28 \div 7$$

**Réponse :**

$$28 \div 7 = 4$$

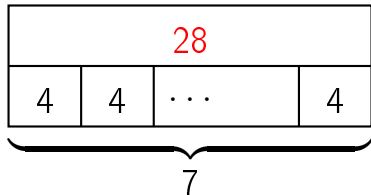
# question 40



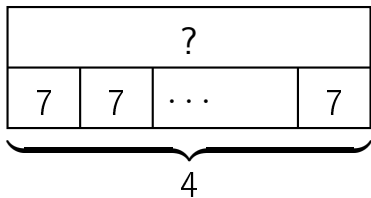


**Réponse :**

$$7 \times 4 = 28$$

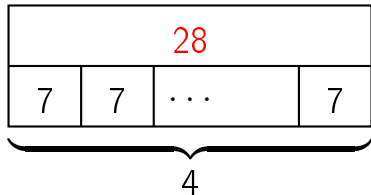


# question 41

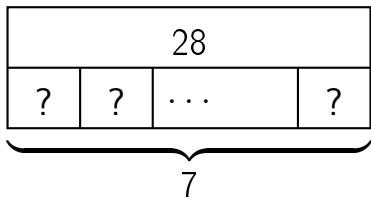


**Réponse :**

$$4 \times 7 = 28$$



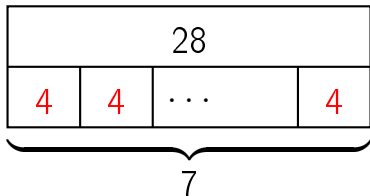
question 42



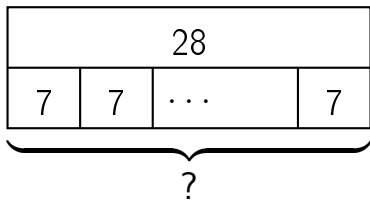
**Réponse :**

$$7 \times ? = 28$$

$$\text{donc } ? = 28 \div 7 = 4$$



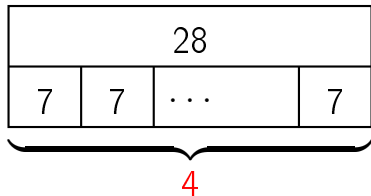
# question 43



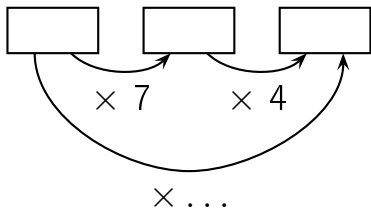
**Réponse :**

$$? \times 7 = 28$$

$$\text{donc } ? = 28 \div 7 = 4$$

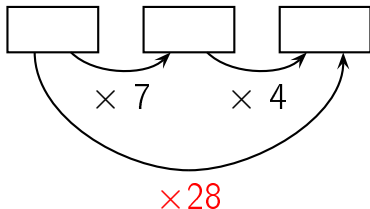


Complète.

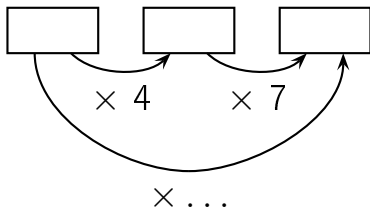




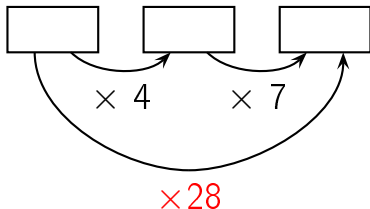
Réponse :



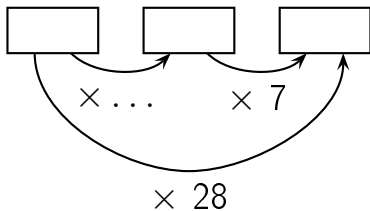
Complète.



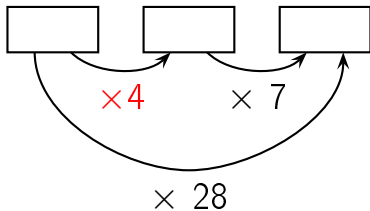
Réponse :



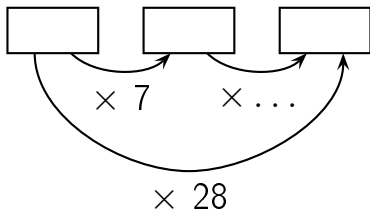
Complète.



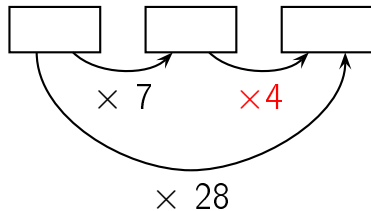
Réponse :



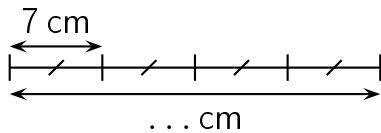
Complète.



Réponse :

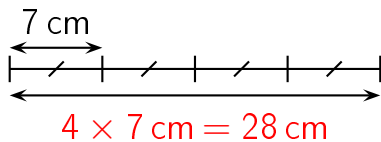


Complète.

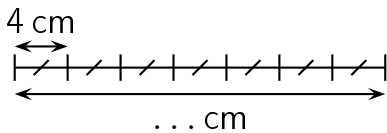




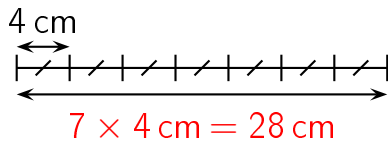
Réponse :



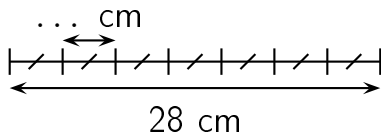
Complète.



Réponse :

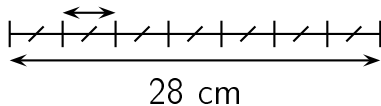


Complète.

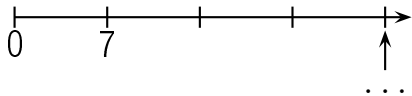


Réponse :

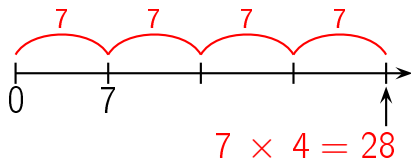
$$28 \text{ cm} \div 7 = 4 \text{ cm}$$



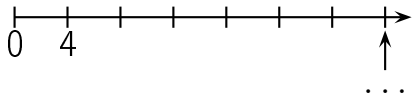
# question 51



Réponse :

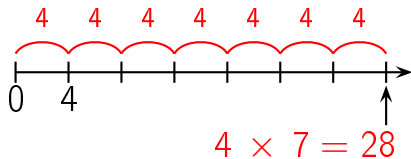


# question 52

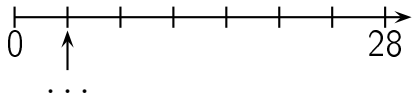




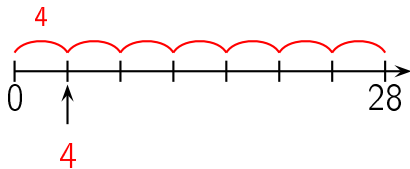
Réponse :



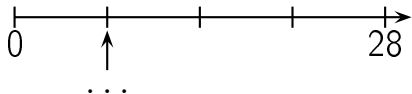
# question 53



Réponse :

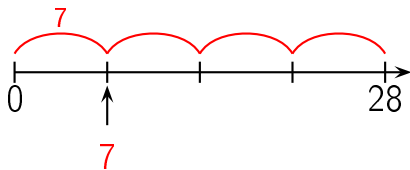


question 54



réponse à la question 54

Réponse :



Combien y a-t-il de fleurs ?



**Réponse :**

**28 fleurs**

Il y a 7 lignes de 4 fleurs chacune. Il y a donc


$$7 \times 4 = 28 \text{ fleurs.}$$

Autre manière:

Il y a 4 colonnes de 7 fleurs chacune. Il y a donc  $4 \times$

$$7 = 28 \text{ fleurs.}$$

Combien y a-t-il de fleurs ?





**Réponse :**

**28 fleurs**

Il y a 4 lignes de 7 fleurs chacune. Il y a donc  
 $4 \times 7 = 28$  fleurs.

Autre manière:

Il y a 7 colonnes de 4 fleurs chacune. Il y a donc  $7 \times$   
 $4 = 28$  fleurs.

# question 57

$$7 \times 5$$

**Réponse :**

$$7 \times 5 = 35$$

# question 58

$$5 \times 7$$

**Réponse :**

$$5 \times 7 = 35$$

Complète.

$$7 \times \dots = 35$$

**Réponse :**

$$7 \times 5 = 35$$

Complète.

$$5 \times \dots = 35$$



**Réponse :**

$$5 \times 7 = 35$$

Complète.

$$\dots \times 7 = 35$$

**Réponse :**

$$5 \times 7 = 35$$

Complète.

$$\dots \times 5 = 35$$

**Réponse :**

$$7 \times 5 = 35$$

# question 63

$$35 = \dots \times \dots$$

**Réponse :**

$$35 = 7 \times 5$$

ou

...

Dans 35,  
combien de fois 7 ?



**Réponse :**

$$35 = 5 \times 7$$

Dans 35, il y a 5 fois 7.

# question 65

Dans 37,  
combien de fois 7 ?

**Réponse :**

$$37 = 5 \times 7 + 2$$

Dans 37, il y a 5 fois 7.

Quel est le reste de la division euclidienne  
de 39 par 7 ?

**Réponse :**

$$39 = 5 \times 7 + 4$$

Le reste de la division euclidienne  
de 39 par 7 est 4.

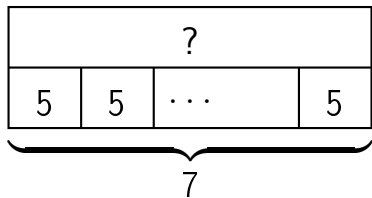
# question 67

$$35 \div 7$$

**Réponse :**

$$35 \div 7 = 5$$

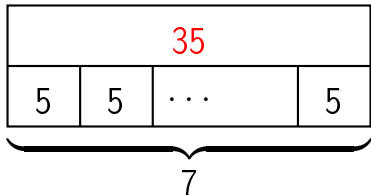
# question 68



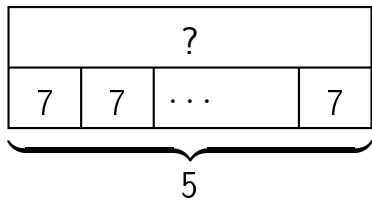


Réponse :

$$7 \times 5 = 35$$

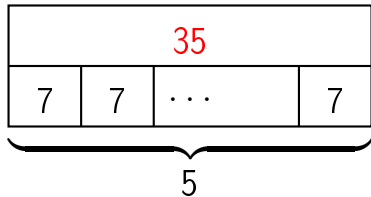


question 69

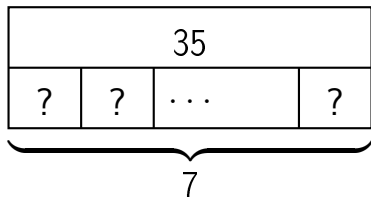


Réponse :

$$5 \times 7 = 35$$



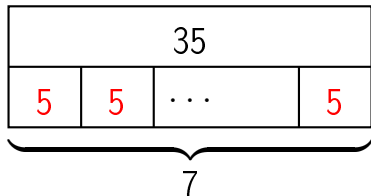
question 70



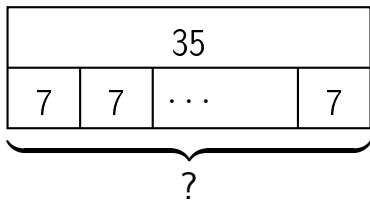
**Réponse :**

$$7 \times ? = 35$$

$$\text{donc } ? = 35 \div 7 = 5$$



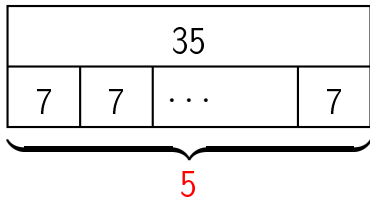
# question 71



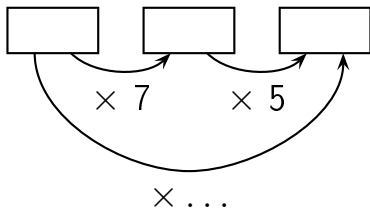
**Réponse :**

$$? \times 7 = 35$$

$$\text{donc } ? = 35 \div 7 = 5$$

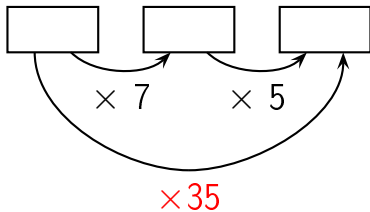


Complète.

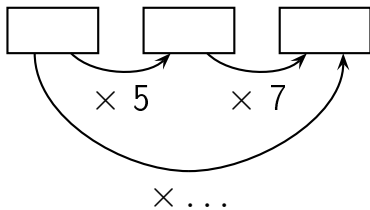




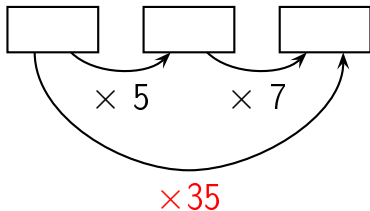
Réponse :



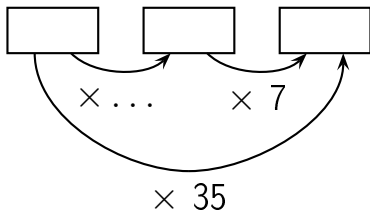
Complète.



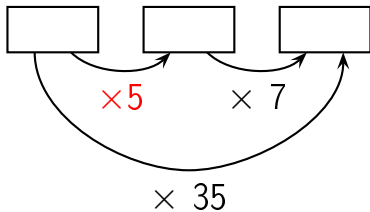
Réponse :



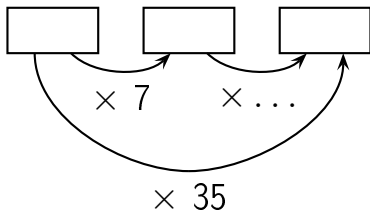
Complète.



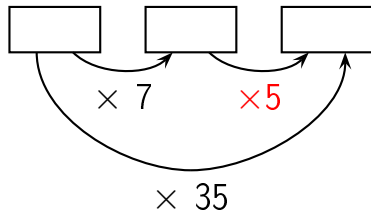
Réponse :



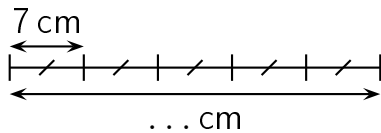
Complète.



Réponse :

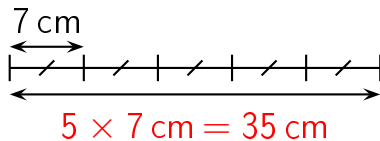


Complète.

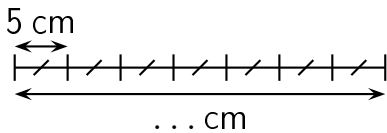




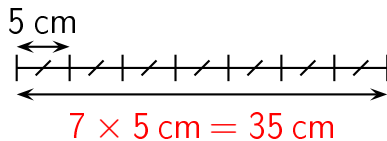
Réponse :



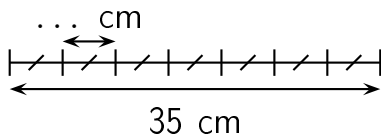
Complète.



Réponse :

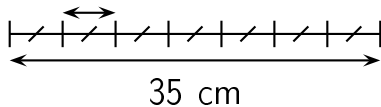


Complète.

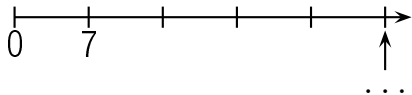


Réponse :

$$35 \text{ cm} \div 7 = 5 \text{ cm}$$

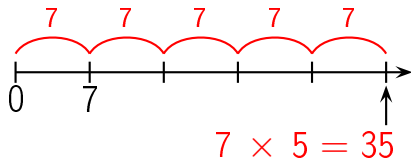


question 79

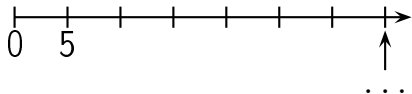


réponse à la question 79

Réponse :

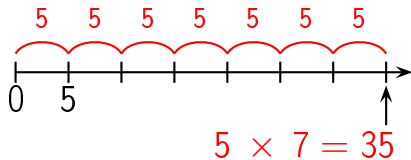


# question 80

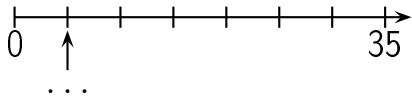




Réponse :

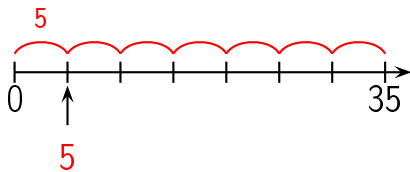


# question 81

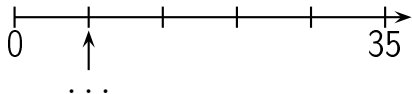


réponse à la question 81

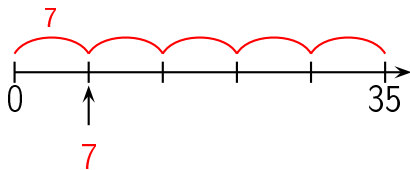
Réponse :




question 82



Réponse :



Combien y a-t-il de fleurs ?



**Réponse :**

**35 fleurs**

Il y a 7 lignes de 5 fleurs chacune. Il y a donc


$$7 \times 5 = 35 \text{ fleurs.}$$

Autre manière:

Il y a 5 colonnes de 7 fleurs chacune. Il y a donc  $5 \times$

$$7 = 35 \text{ fleurs.}$$

Combien y a-t-il de fleurs ?





**Réponse :**

**35 fleurs**

Il y a 5 lignes de 7 fleurs chacune. Il y a donc

$$5 \times 7 = 35 \text{ fleurs.}$$

Autre manière:

Il y a 7 colonnes de 5 fleurs chacune. Il y a donc  $7 \times$

$$5 = 35 \text{ fleurs.}$$

# question 85

$$7 \times 6$$

**Réponse :**

$$7 \times 6 = 42$$

# question 86

$$6 \times 7$$

**Réponse :**

$$6 \times 7 = 42$$

Complète.

$$7 \times \dots = 42$$

**Réponse :**

$$7 \times 6 = 42$$

Complète.

$$6 \times \dots = 42$$



**Réponse :**

$$6 \times 7 = 42$$

Complète.

$$\dots \times 7 = 42$$

**Réponse :**

$$6 \times 7 = 42$$

Complète.

$$\dots \times 6 = 42$$

**Réponse :**

$$7 \times 6 = 42$$

# question 91

$$42 = \dots \times \dots$$

**Réponse :**

$$42 = 7 \times 6$$

ou

...

Dans 42,  
combien de fois 7 ?



**Réponse :**

$$42 = 6 \times 7$$

Dans 42, il y a 6 fois 7.

Dans 48,  
combien de fois 7 ?

## Réponse :

$$48 = 6 \times 7 + 6$$

Dans 48, il y a 6 fois 7.

Quel est le reste de la division euclidienne  
de 46 par 7 ?

**Réponse :**

$$46 = 6 \times 7 + 4$$

Le reste de la division euclidienne  
de 46 par 7 est 4.

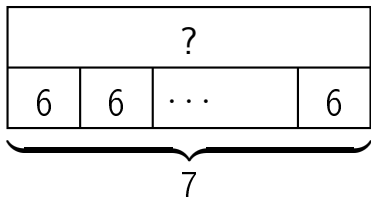
# question 95

$$42 \div 7$$

**Réponse :**

$$42 \div 7 = 6$$

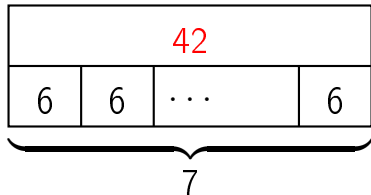
# question 96



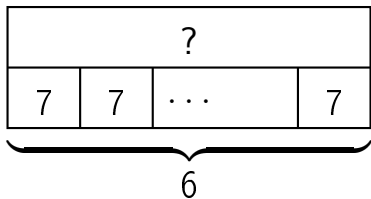


**Réponse :**

$$7 \times 6 = 42$$

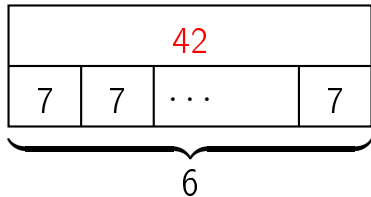


# question 97

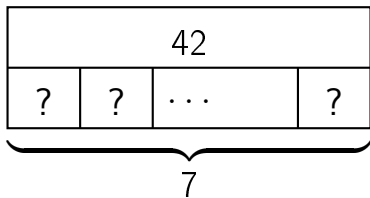


**Réponse :**

$$6 \times 7 = 42$$



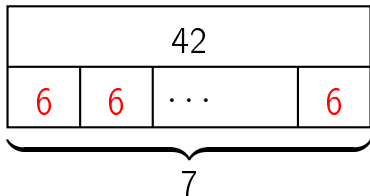
# question 98



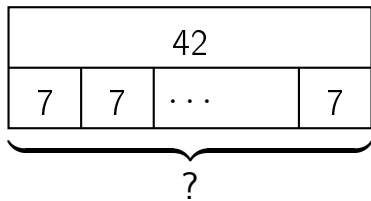
**Réponse :**

$$7 \times ? = 42$$

$$\text{donc } ? = 42 \div 7 = 6$$



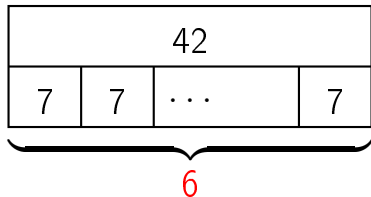
# question 99



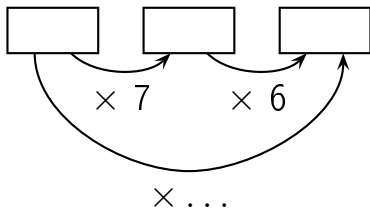
**Réponse :**

$$? \times 7 = 42$$

$$\text{donc } ? = 42 \div 7 = 6$$

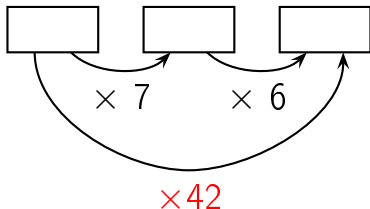


Complète.

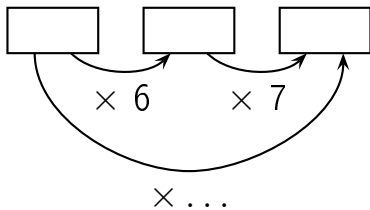




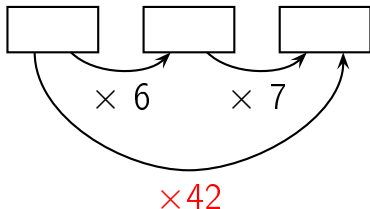
Réponse :



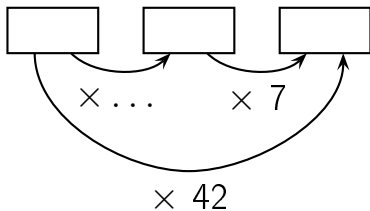
Complète.



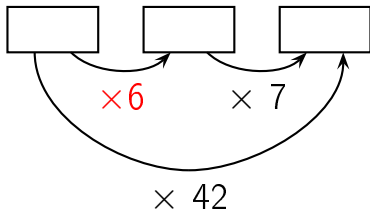
Réponse :



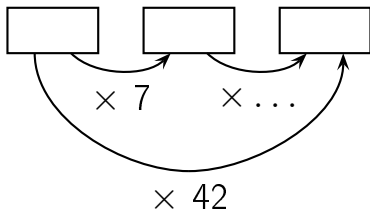
Complète.



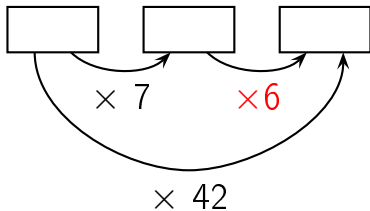
Réponse :



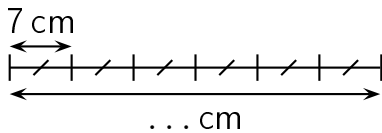
Complète.



Réponse :

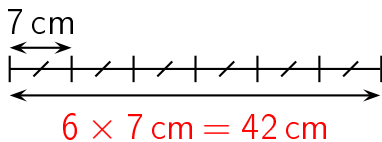


Complète.

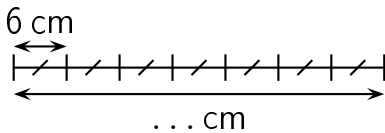




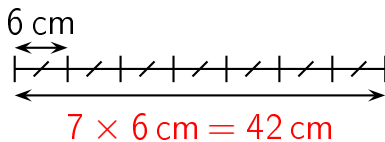
Réponse :



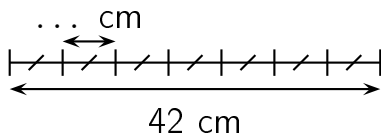
Complète.



Réponse :

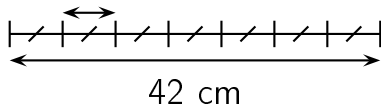


Complète.

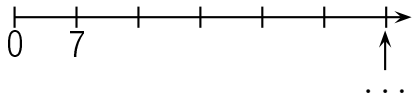


Réponse :

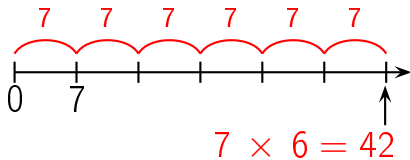
$$42 \text{ cm} \div 7 = 6 \text{ cm}$$



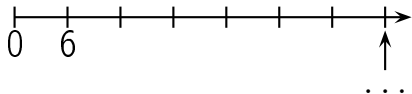
# question 107



Réponse :

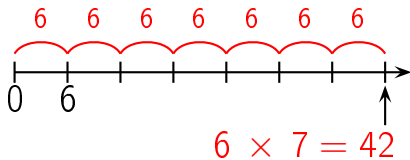


# question 108

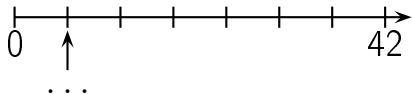




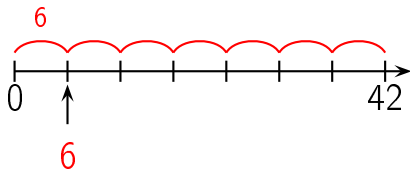
Réponse :



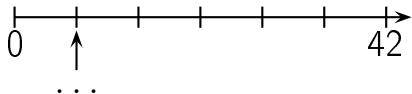
# question 109



Réponse :

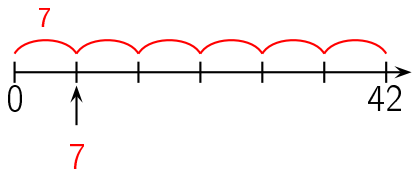


# question 110




réponse à la question 110

Réponse :



Combien y a-t-il de fleurs ?



## Réponse :


42 fleurs

Il y a 7 lignes de 6 fleurs chacune. Il y a donc  
 $7 \times 6 = 42$  fleurs.

Autre manière:

Il y a 6 colonnes de 7 fleurs chacune. Il y a donc  $6 \times$   
 $7 = 42$  fleurs.

Combien y a-t-il de fleurs ?





## Réponse :

42 fleurs

Il y a 6 lignes de 7 fleurs chacune. Il y a donc

$$6 \times 7 = 42 \text{ fleurs.}$$

Autre manière:

Il y a 7 colonnes de 6 fleurs chacune. Il y a donc  $7 \times$

$$6 = 42 \text{ fleurs.}$$

# question 113

$$7 \times 7$$

**Réponse :**

$$7 \times 7 = 49$$

Complète.

$$7 \times \dots = 49$$

**Réponse :**

$$7 \times 7 = 49$$

Complète.

$$\dots \times 7 = 49$$

**Réponse :**

$$7 \times 7 = 49$$

# question 116

$$49 = \dots \times \dots$$



**Réponse :**

$$49 = 7 \times 7$$

ou

...

Dans 49,  
combien de fois 7 ?

**Réponse :**

$$49 = 7 \times 7$$

Dans 49, il y a 7 fois 7.

Dans 50,  
combien de fois 7 ?

## Réponse :

$$50 = 7 \times 7 + 1$$

Dans 50, il y 7 fois 7.

Quel est le reste de la division euclidienne  
de 51 par 7 ?

**Réponse :**

$$51 = 7 \times 7 + 2$$

Le reste de la division euclidienne  
de 51 par 7 est 2.

# question 120

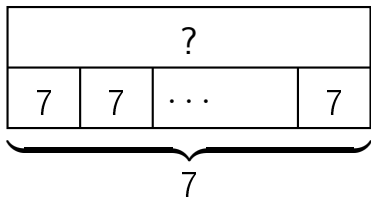
$$49 \div 7$$



**Réponse :**

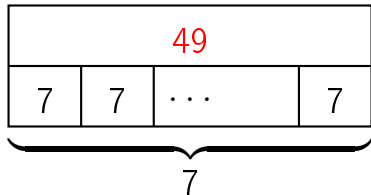
$$49 \div 7 = 7$$

# question 121

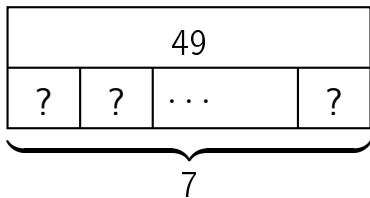


**Réponse :**

$$7 \times 7 = 49$$



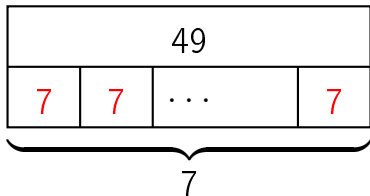
# question 122



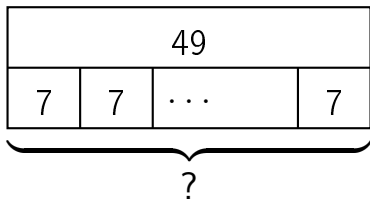
**Réponse :**

$$7 \times ? = 49$$

$$\text{donc } ? = 49 \div 7 = 7$$



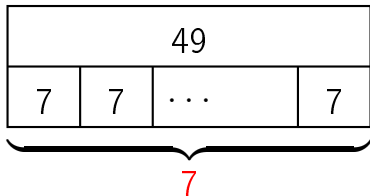
# question 123



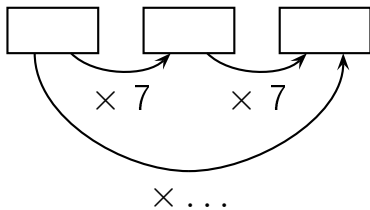
**Réponse :**

$$? \times 7 = 49$$

$$\text{donc } ? = 49 \div 7 = 7$$

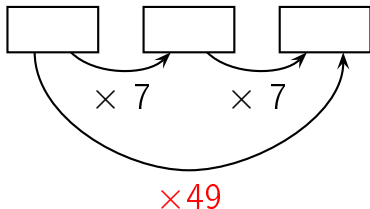


Complète.

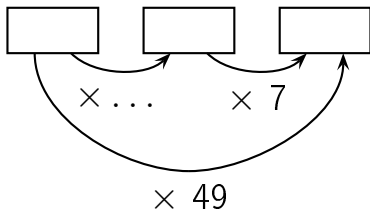




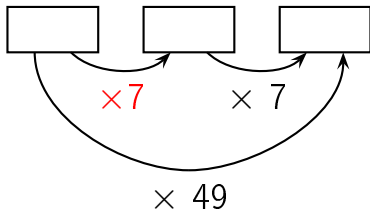
Réponse :



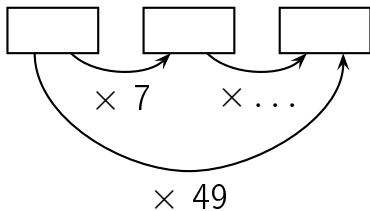
Complète.



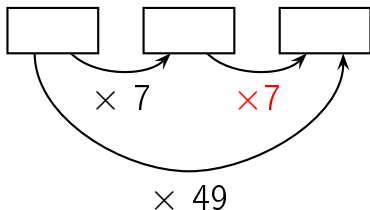
Réponse :



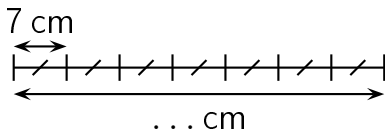
Complète.



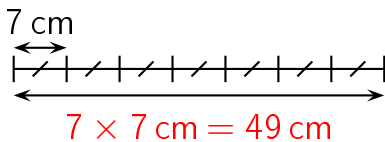
Réponse :



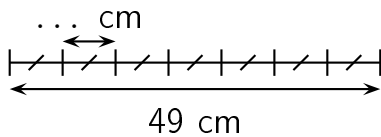
Complète.



Réponse :



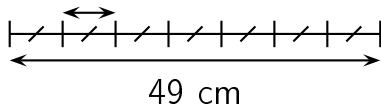
Complète.



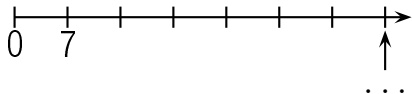


Réponse :

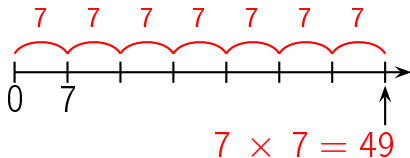
$$49 \text{ cm} \div 7 = 7 \text{ cm}$$



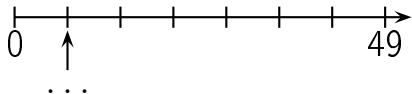
# question 129



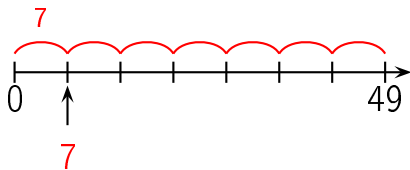
Réponse :




# question 130



Réponse :



Combien y a-t-il de fleurs ?



## Réponse :

49 fleurs

Il y a 7 lignes de 7 fleurs chacune. Il y a donc  
 $7 \times 7 = 49$  fleurs.

Autre manière:

Il y a 7 colonnes de 7 fleurs chacune. Il y a donc  $7 \times 7 = 49$  fleurs.

# question 132

$$7 \times 8$$



**Réponse :**

$$7 \times 8 = 56$$

# question 133

$$8 \times 7$$

**Réponse :**

$$8 \times 7 = 56$$

Complète.

$$7 \times \dots = 56$$

**Réponse :**

$$7 \times 8 = 56$$

Complète.

$$8 \times \dots = 56$$

**Réponse :**

$$8 \times 7 = 56$$

Complète.

$$\dots \times 7 = 56$$



**Réponse :**

$$8 \times 7 = 56$$

Complète.

$$\dots \times 8 = 56$$

**Réponse :**

$$7 \times 8 = 56$$

# question 138

$$56 = \dots \times \dots$$

**Réponse :**

$$56 = 7 \times 8$$

ou

...

Dans 56,  
combien de fois 7 ?

**Réponse :**

$$56 = 8 \times 7$$

Dans 56, il y a 8 fois 7.

Dans 57,  
combien de fois 7 ?



## Réponse :

$$57 = 8 \times 7 + 1$$

Dans 57, il y 8 fois 7.

Quel est le reste de la division euclidienne  
de 57 par 7 ?

**Réponse :**

$$57 = 8 \times 7 + 1$$

Le reste de la division euclidienne  
de 57 par 7 est 1.

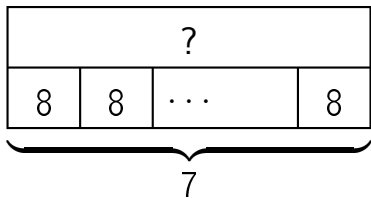
question 142

$$56 \div 7$$

**Réponse :**

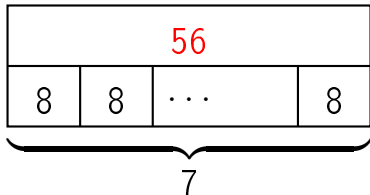
$$56 \div 7 = 8$$

# question 143

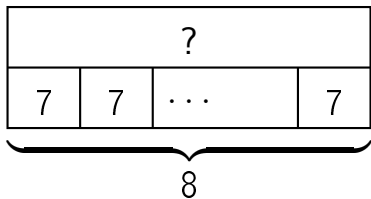


**Réponse :**

$$7 \times 8 = 56$$



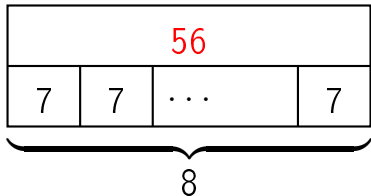
question 144



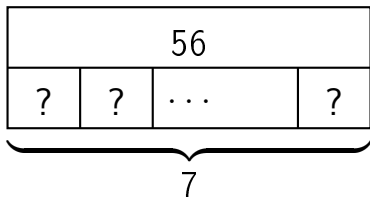


**Réponse :**

$$8 \times 7 = 56$$



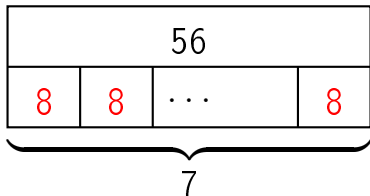
question 145



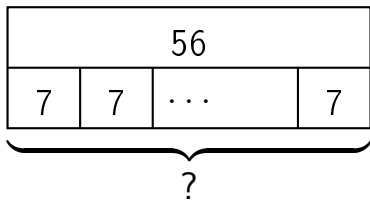
**Réponse :**

$$7 \times ? = 56$$

$$\text{donc } ? = 56 \div 7 = 8$$



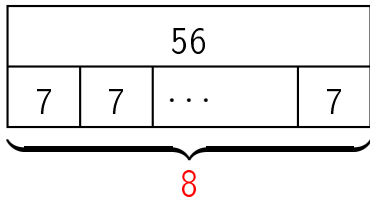
question 146



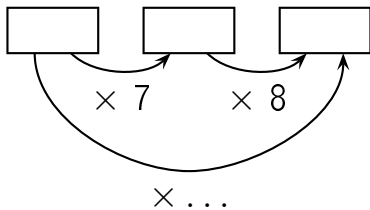
**Réponse :**

$$? \times 7 = 56$$

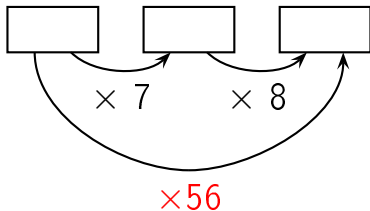
$$\text{donc } ? = 56 \div 7 = 8$$



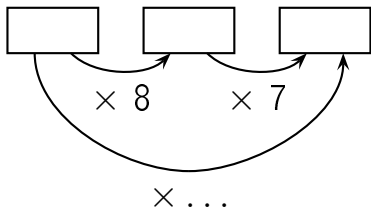
Complète.



Réponse :

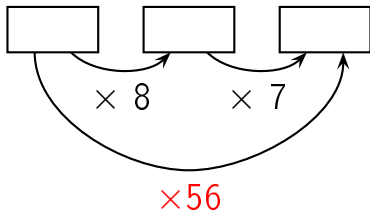


Complète.

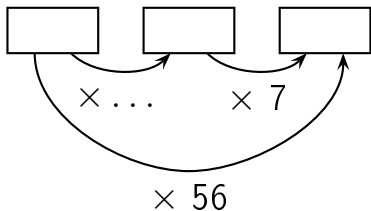




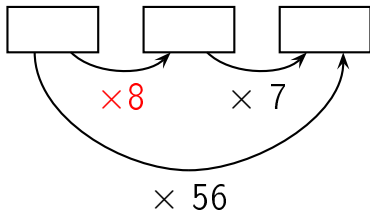
Réponse :



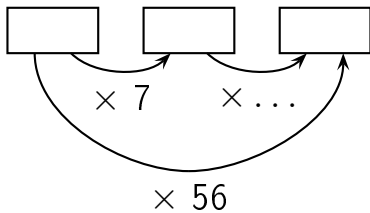
Complète.



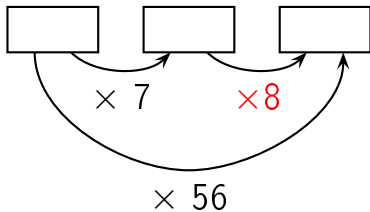
Réponse :



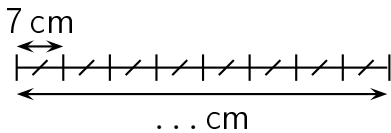
Complète.



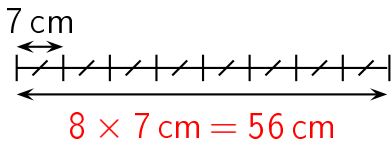
Réponse :



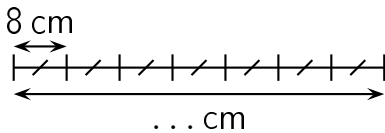
Complète.



Réponse :

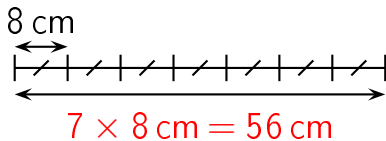


Complète.

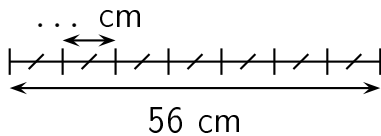




Réponse :

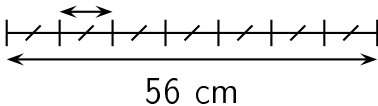


Complète.

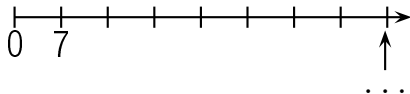


Réponse :

$$56 \text{ cm} \div 7 = 8 \text{ cm}$$

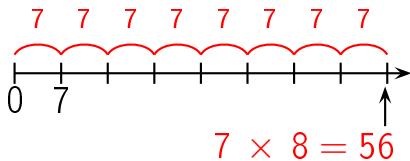


# question 154

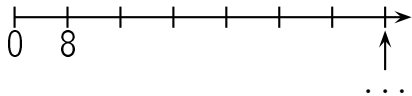


réponse à la question 154

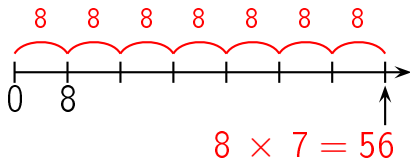
Réponse :



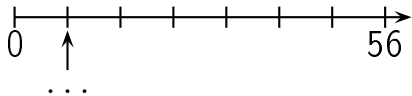
# question 155



Réponse :



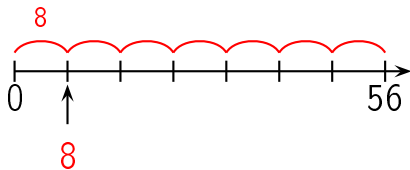
# question 156



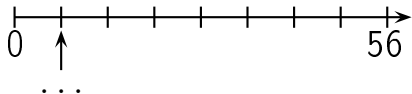


réponse à la question 156

Réponse :

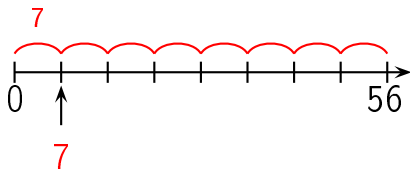


# question 157




réponse à la question 157

Réponse :



Combien y a-t-il de fleurs ?



**Réponse :**

**56 fleurs**

Il y a 7 lignes de 8 fleurs chacune. Il y a donc


$$7 \times 8 = 56 \text{ fleurs.}$$

Autre manière:

Il y a 8 colonnes de 7 fleurs chacune. Il y a donc  $8 \times$

$$7 = 56 \text{ fleurs.}$$

Combien y a-t-il de fleurs ?



**Réponse :**

**56 fleurs**

Il y a 8 lignes de 7 fleurs chacune. Il y a donc  
 $8 \times 7 = 56$  fleurs.

Autre manière:

Il y a 7 colonnes de 8 fleurs chacune. Il y a donc  $7 \times$   
 $8 = 56$  fleurs.

# question 160

$$7 \times 9$$



**Réponse :**

$$7 \times 9 = 63$$

# question 161

$$9 \times 7$$

**Réponse :**

$$9 \times 7 = 63$$

Complète.

$$7 \times \dots = 63$$

**Réponse :**

$$7 \times 9 = 63$$

Complète.

$$9 \times \dots = 63$$

**Réponse :**

$$9 \times 7 = 63$$

Complète.

$$\dots \times 7 = 63$$



**Réponse :**

$$9 \times 7 = 63$$

Complète.

$$\dots \times 9 = 63$$

**Réponse :**

$$7 \times 9 = 63$$

# question 166

$$63 = \dots \times \dots$$

**Réponse :**

$$63 = 7 \times 9$$

ou

...

Dans 63,  
combien de fois 7 ?

**Réponse :**

$$63 = 9 \times 7$$

Dans 63, il y a 9 fois 7.

Dans 69,  
combien de fois 7 ?



## Réponse :

$$69 = 9 \times 7 + 6$$

Dans 69, il y 9 fois 7.

Quel est le reste de la division euclidienne  
de 68 par 7 ?

**Réponse :**

$$68 = 9 \times 7 + 5$$

Le reste de la division euclidienne  
de 68 par 7 est 5.

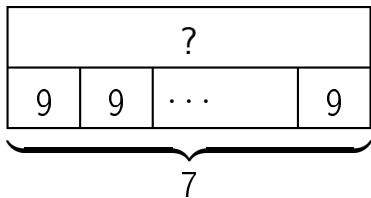
question 170

$$63 \div 7$$

**Réponse :**

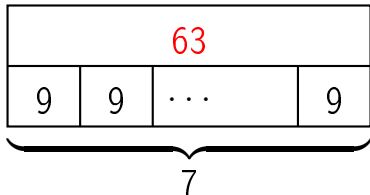
$$63 \div 7 = 9$$

# question 171

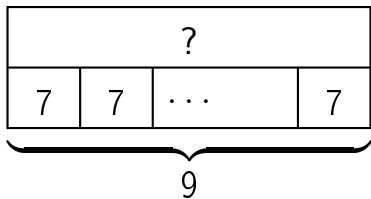


**Réponse :**

$$7 \times 9 = 63$$



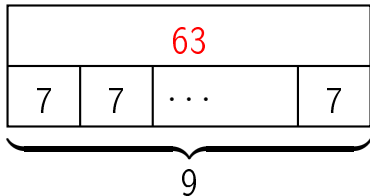
question 172



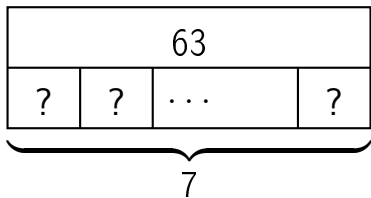


**Réponse :**

$$9 \times 7 = 63$$



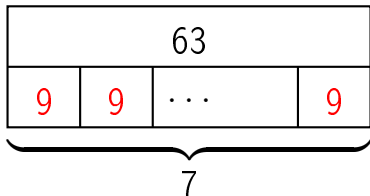
question 173



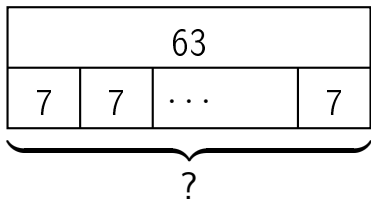
**Réponse :**

$$7 \times ? = 63$$

$$\text{donc } ? = 63 \div 7 = 9$$



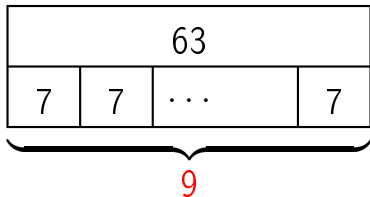
question 174



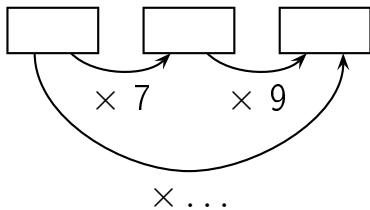
**Réponse :**

$$? \times 7 = 63$$

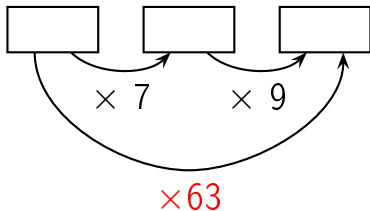
$$\text{donc } ? = 63 \div 7 = 9$$



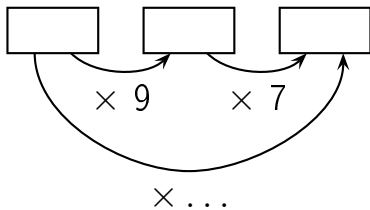
Complète.



Réponse :

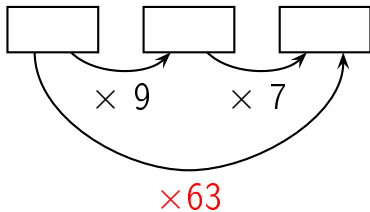


Complète.

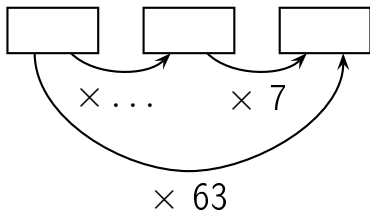




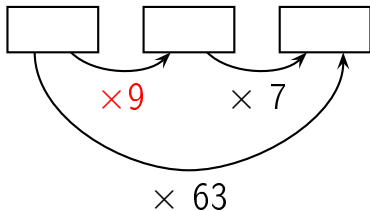
Réponse :



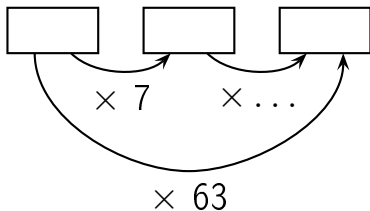
Complète.



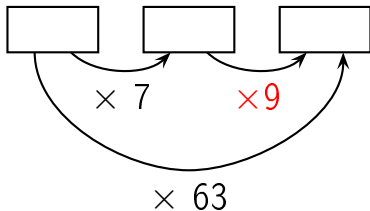
Réponse :



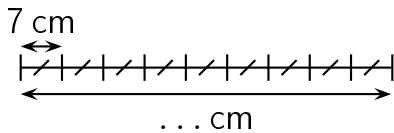
Complète.



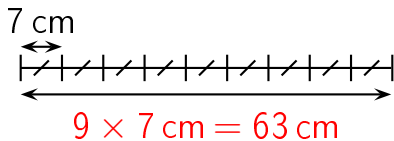
Réponse :



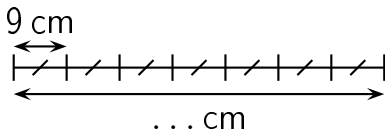
Complète.



Réponse :

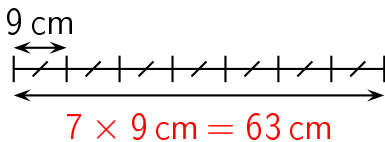


Complète.

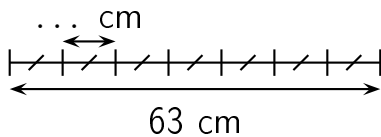




Réponse :

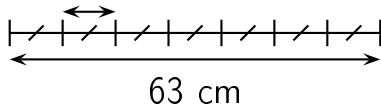


Complète.

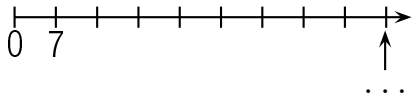


Réponse :

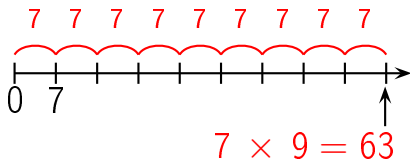
$$63 \text{ cm} \div 7 = 9 \text{ cm}$$



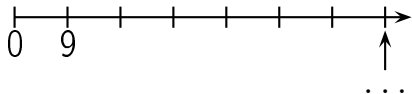
question 182



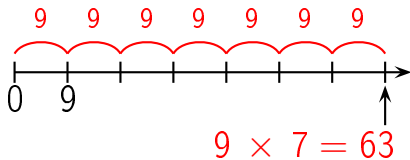
Réponse :



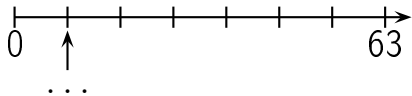
# question 183



Réponse :

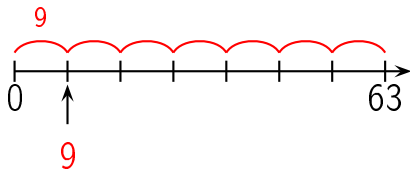


# question 184

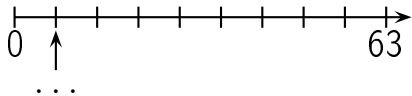




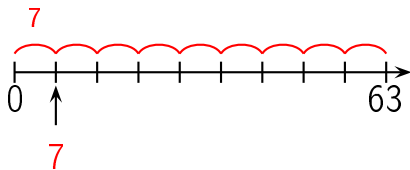
Réponse :




# question 185



Réponse :



Combien y a-t-il de fleurs ?



**Réponse :**

**63 fleurs**

Il y a 7 lignes de 9 fleurs chacune. Il y a donc


$$7 \times 9 = 63 \text{ fleurs.}$$

Autre manière:

Il y a 9 colonnes de 7 fleurs chacune. Il y a donc  $9 \times$

$$7 = 63 \text{ fleurs.}$$

Combien y a-t-il de fleurs ?



**Réponse :**

**63 fleurs**

Il y a 9 lignes de 7 fleurs chacune. Il y a donc  
 $9 \times 7 = 63$  fleurs.

Autre manière:

Il y a 7 colonnes de 9 fleurs chacune. Il y a donc  $7 \times$   
 $9 = 63$  fleurs.