

Autour de la table de 9

question 1

$$9 \times 3$$

Réponse :

$$9 \times 3 = 27$$

question 2

$$3 \times 9$$

Réponse :

$$3 \times 9 = 27$$

Complète.

$$9 \times \dots = 27$$

Réponse :

$$9 \times 3 = 27$$

Complète.

$$3 \times \dots = 27$$

Réponse :

$$3 \times 9 = 27$$

Complète.

$$\dots \times 9 = 27$$

Réponse :

$$3 \times 9 = 27$$

Complète.

$$\dots \times 3 = 27$$

Réponse :

$$9 \times 3 = 27$$

question 7

$$27 = \dots \times \dots$$

Réponse :

$$27 = 9 \times 3$$

ou

...

Dans 27,
combien de fois 9 ?

Réponse :

$$27 = 3 \times 9$$

Dans 27, il y a 3 fois 9.

Dans 34,
combien de fois 9 ?

Réponse :

$$34 = 3 \times 9 + 7$$

Dans 34, il y 3 fois 9.

Quel est le reste de la division euclidienne
de 35 par 9 ?

Réponse :

$$35 = 3 \times 9 + 8$$

Le reste de la division euclidienne
de 35 par 9 est 8.

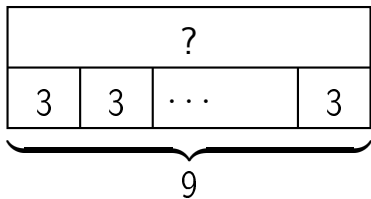
question 11

$$27 \div 9$$

Réponse :

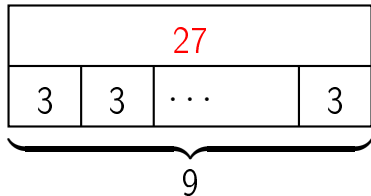
$$27 \div 9 = 3$$

question 12

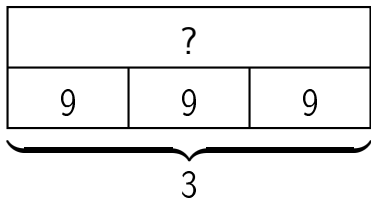


Réponse :

$$9 \times 3 = 27$$

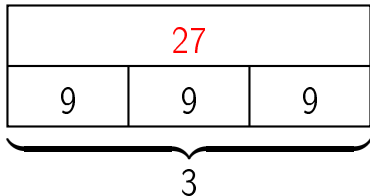


question 13

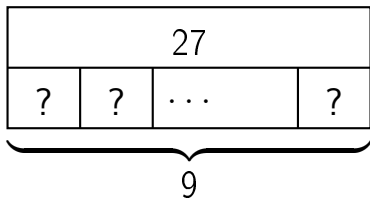


Réponse :

$$3 \times 9 = 27$$



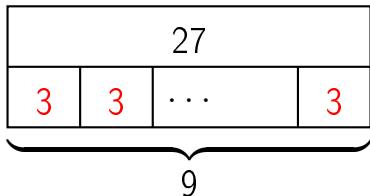
question 14



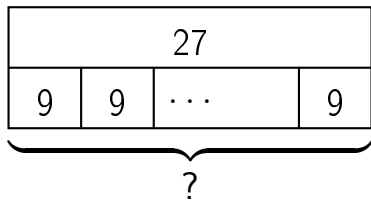
Réponse :

$$9 \times ? = 27$$

$$\text{donc } ? = 27 \div 9 = 3$$



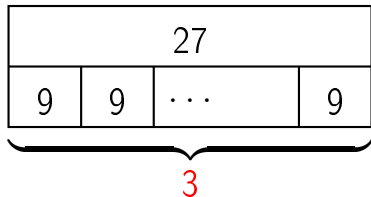
question 15



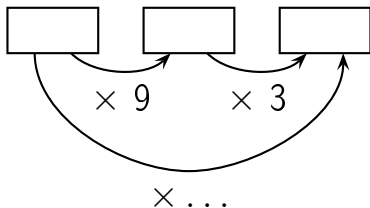
Réponse :

$$? \times 9 = 27$$

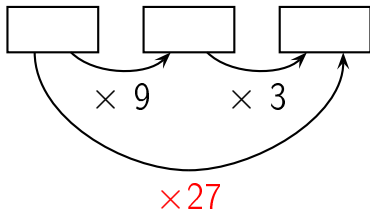
$$\text{donc } ? = 27 \div 9 = 3$$



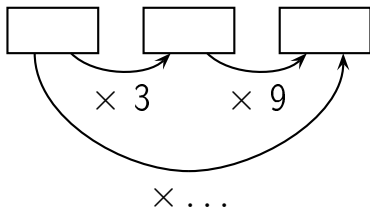
Complète.



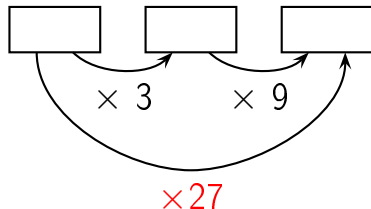
Réponse :



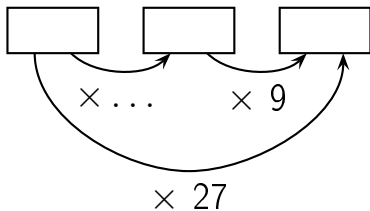
Complète.



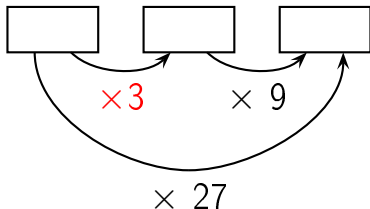
Réponse :



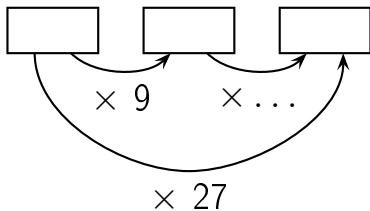
Complète.



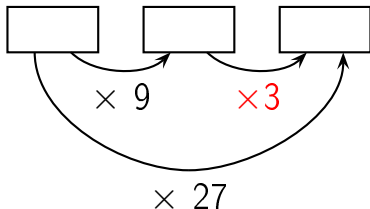
Réponse :



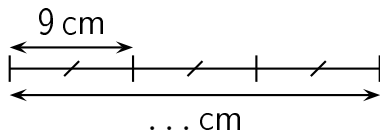
Complète.



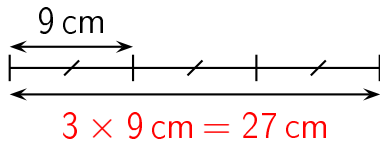
Réponse :



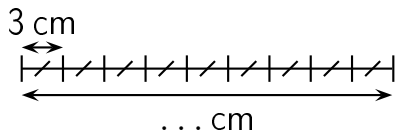
Complète.



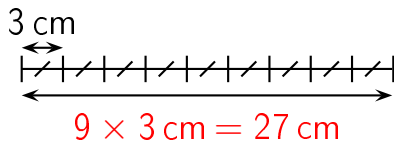
Réponse :



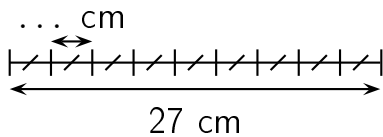
Complète.



Réponse :

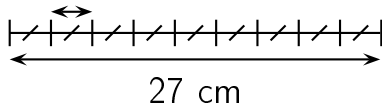


Complète.




Réponse :

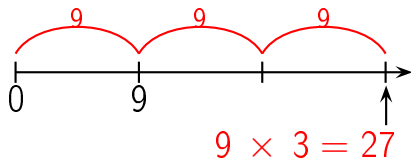
$$27 \text{ cm} \div 9 = 3 \text{ cm}$$



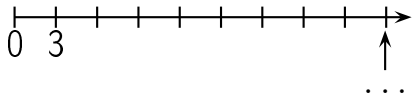
question 23



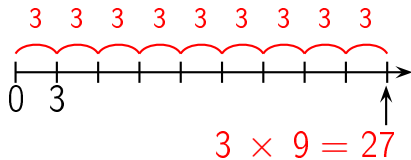
Réponse :



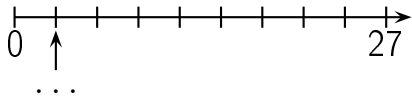
question 24



Réponse :

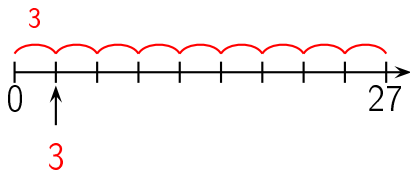


question 25




réponse à la question 25

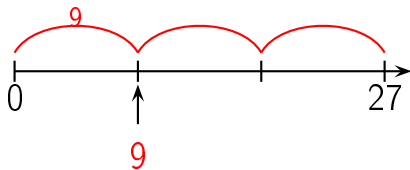
Réponse :



question 26



Réponse :



Combien y a-t-il de fleurs ?



Réponse :

27 fleurs

Il y a 9 lignes de 3 fleurs chacune. Il y a donc
 $9 \times 3 = 27$ fleurs.

Autre manière:

Il y a 3 colonnes de 9 fleurs chacune. Il y a donc $3 \times 9 = 27$ fleurs.

Combien y a-t-il de fleurs ?



Réponse :

27 fleurs

Il y a 3 lignes de 9 fleurs chacune. Il y a donc

$$3 \times 9 = 27 \text{ fleurs.}$$

Autre manière:

Il y a 9 colonnes de 3 fleurs chacune. Il y a donc $9 \times$

$$3 = 27 \text{ fleurs.}$$

question 29

$$9 \times 4$$

Réponse :

$$9 \times 4 = 36$$

question 30

$$4 \times 9$$

Réponse :

$$4 \times 9 = 36$$

Complète.

$$9 \times \dots = 36$$

Réponse :

$$9 \times 4 = 36$$

Complète.

$$4 \times \dots = 36$$

Réponse :

$$4 \times 9 = 36$$

Complète.

$$\dots \times 9 = 36$$

Réponse :

$$4 \times 9 = 36$$

Complète.

$$\dots \times 4 = 36$$

Réponse :

$$9 \times 4 = 36$$

question 35

$$36 = \dots \times \dots$$

Réponse :

$$36 = 9 \times 4$$

ou

...

question 36

Dans 36,
combien de fois 9 ?

Réponse :

$$36 = 4 \times 9$$

Dans 36, il y a 4 fois 9.

question 37

Dans 39,
combien de fois 9 ?

Réponse :

$$39 = 4 \times 9 + 3$$

Dans 39, il y 4 fois 9.

Quel est le reste de la division euclidienne
de 44 par 9 ?

Réponse :

$$44 = 4 \times 9 + 8$$

Le reste de la division euclidienne
de 44 par 9 est 8.

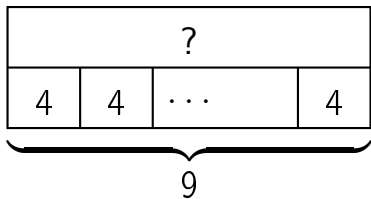
question 39

$$36 \div 9$$

Réponse :

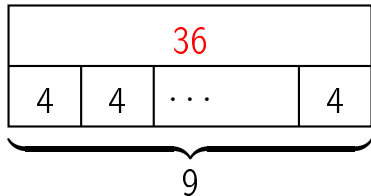
$$36 \div 9 = 4$$

question 40

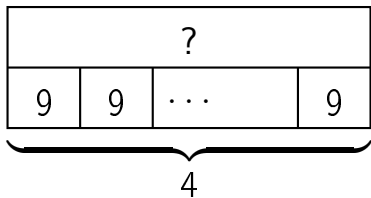


Réponse :

$$9 \times 4 = 36$$

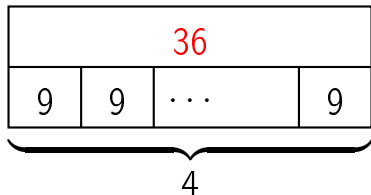


question 41

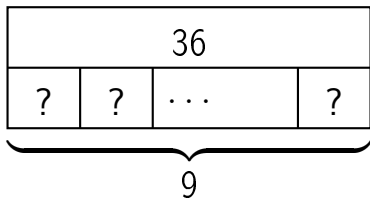


Réponse :

$$4 \times 9 = 36$$



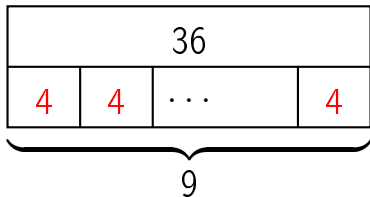
question 42



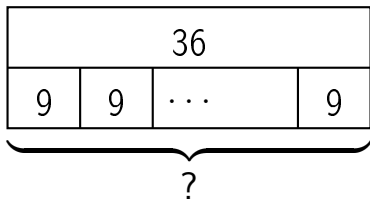
Réponse :

$$9 \times ? = 36$$

$$\text{donc } ? = 36 \div 9 = 4$$



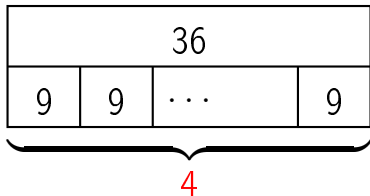
question 43



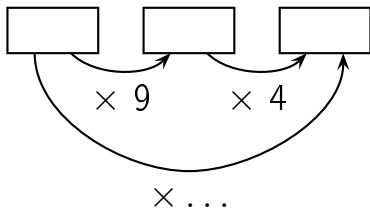
Réponse :

$$? \times 9 = 36$$

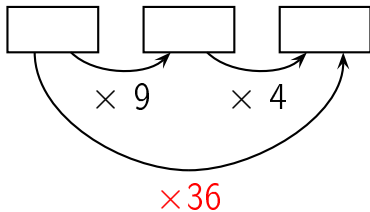
$$\text{donc } ? = 36 \div 9 = 4$$



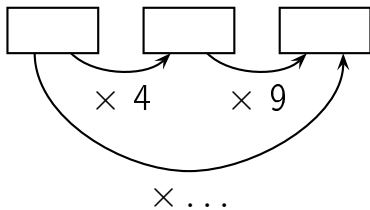
Complète.



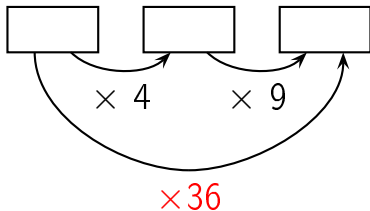
Réponse :



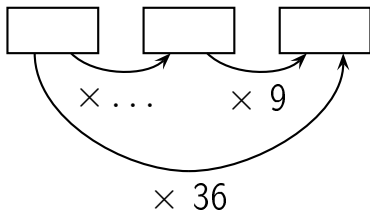
Complète.



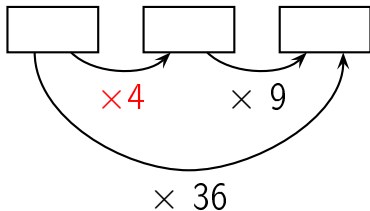
Réponse :



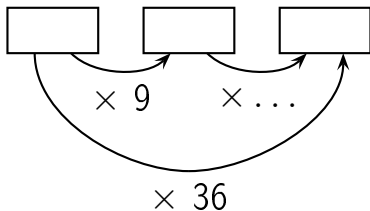
Complète.



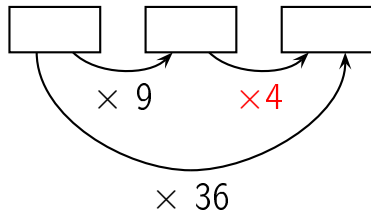
Réponse :



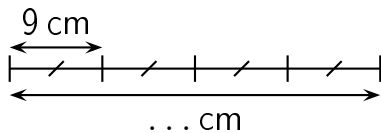
Complète.



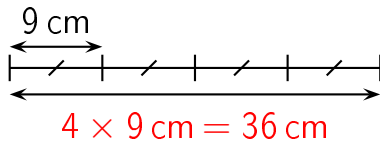
Réponse :



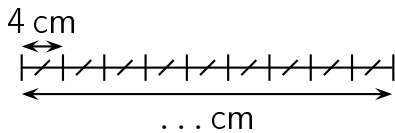
Complète.



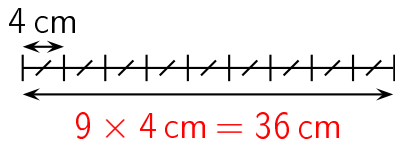
Réponse :



Complète.

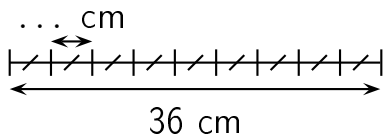


Réponse :



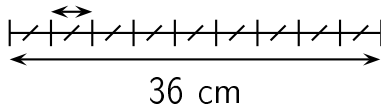
question 50

Complète.

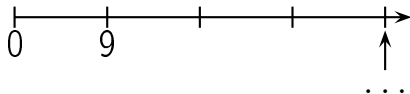


Réponse :

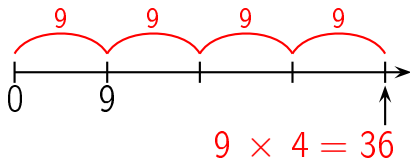
$$36 \text{ cm} \div 9 = 4 \text{ cm}$$



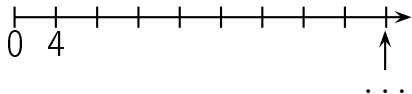
question 51



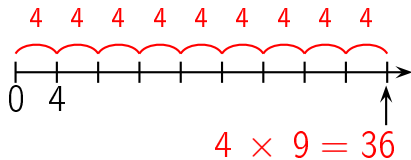
Réponse :



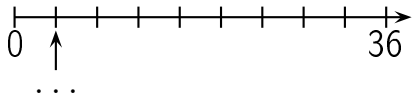
question 52



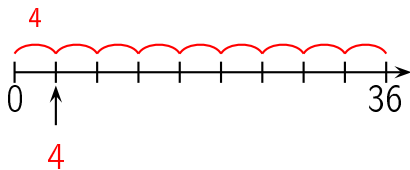
Réponse :



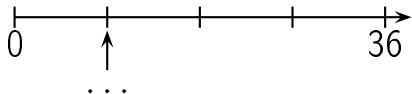
question 53



Réponse :

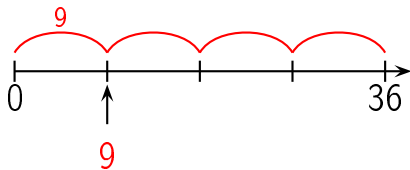


question 54




réponse à la question 54

Réponse :



Combien y a-t-il de fleurs ?



Réponse :


36 fleurs

Il y a 9 lignes de 4 fleurs chacune. Il y a donc
 $9 \times 4 = 36$ fleurs.

Autre manière:

Il y a 4 colonnes de 9 fleurs chacune. Il y a donc $4 \times$
 $9 = 36$ fleurs.

Combien y a-t-il de fleurs ?



Réponse :

36 fleurs

Il y a 4 lignes de 9 fleurs chacune. Il y a donc
 $4 \times 9 = 36$ fleurs.

Autre manière:

Il y a 9 colonnes de 4 fleurs chacune. Il y a donc $9 \times$
 $4 = 36$ fleurs.

question 57

$$9 \times 5$$

réponse à la question 57

Réponse :

$$9 \times 5 = 45$$

question 58

$$5 \times 9$$

Réponse :

$$5 \times 9 = 45$$

Complète.

$$9 \times \dots = 45$$

Réponse :

$$9 \times 5 = 45$$

Complète.

$$5 \times \dots = 45$$

Réponse :

$$5 \times 9 = 45$$

Complète.

$$\dots \times 9 = 45$$

Réponse :

$$5 \times 9 = 45$$

Complète.

$$\dots \times 5 = 45$$

Réponse :

$$9 \times 5 = 45$$

question 63

$$45 = \dots \times \dots$$

Réponse :

$$45 = 9 \times 5$$

ou

...

Dans 45,
combien de fois 9 ?

Réponse :

$$45 = 5 \times 9$$

Dans 45, il y a 5 fois 9.

question 65

Dans 47,
combien de fois 9 ?

Réponse :

$$47 = 5 \times 9 + 2$$

Dans 47, il y 5 fois 9.

Quel est le reste de la division euclidienne
de 51 par 9 ?

Réponse :

$$51 = 5 \times 9 + 6$$

Le reste de la division euclidienne
de 51 par 9 est 6.

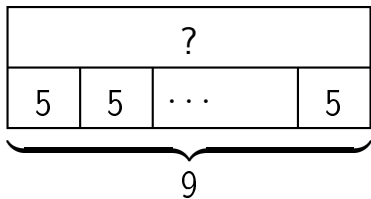
question 67

$$45 \div 9$$

Réponse :

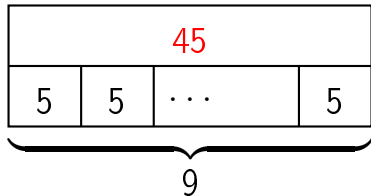
$$45 \div 9 = 5$$

question 68

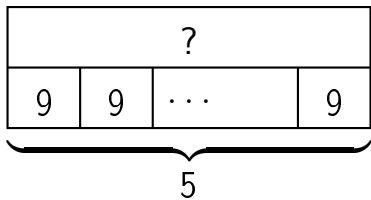


Réponse :

$$9 \times 5 = 45$$

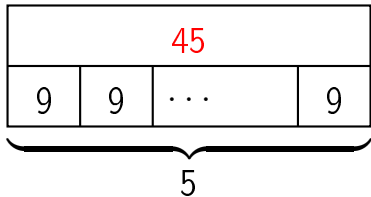


question 69

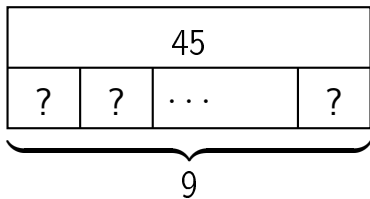


Réponse :

$$5 \times 9 = 45$$



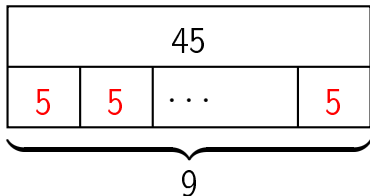
question 70



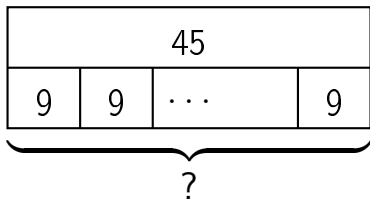
Réponse :

$$9 \times ? = 45$$

$$\text{donc } ? = 45 \div 9 = 5$$



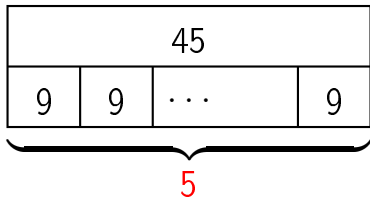
question 71



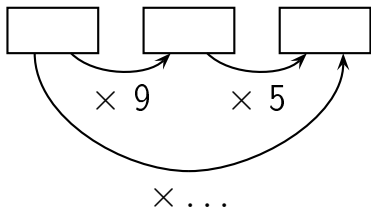
Réponse :

$$? \times 9 = 45$$

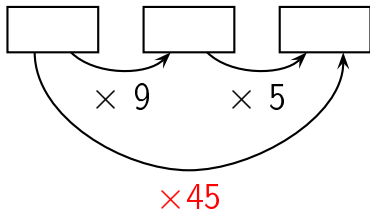
$$\text{donc } ? = 45 \div 9 = 5$$



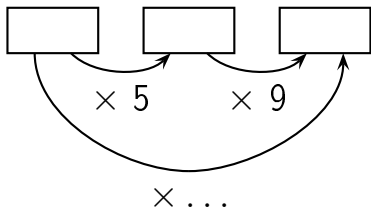
Complète.



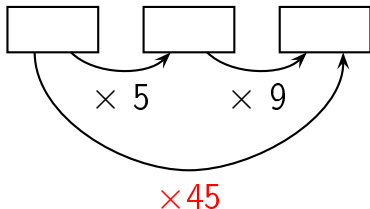
Réponse :



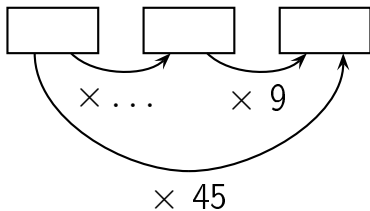
Complète.



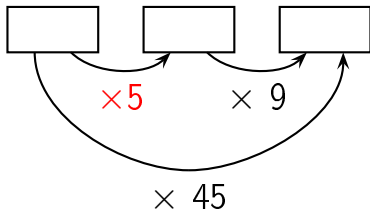
Réponse :



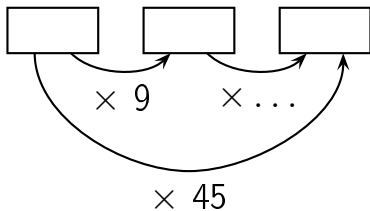
Complète.



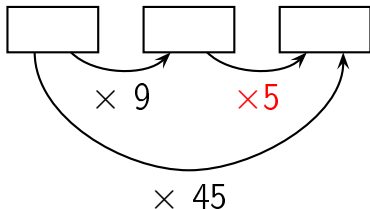
Réponse :



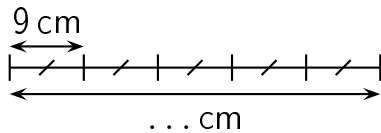
Complète.



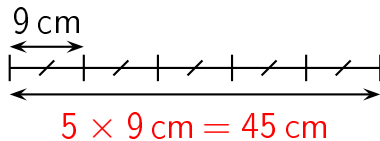
Réponse :



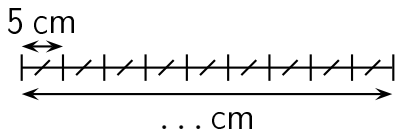
Complète.



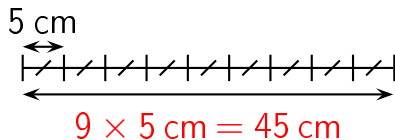
Réponse :



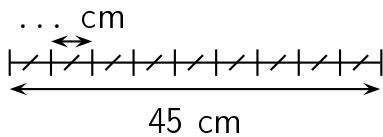
Complète.



Réponse :

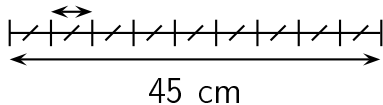


Complète.

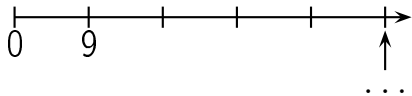


Réponse :

$$45 \text{ cm} \div 9 = 5 \text{ cm}$$

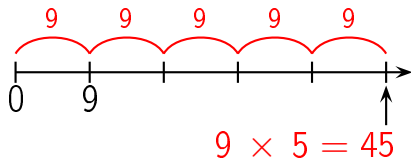


question 79

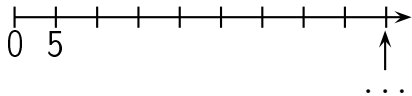


réponse à la question 79

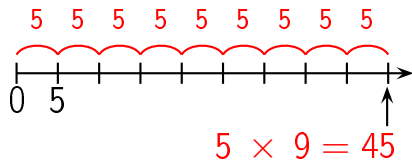
Réponse :



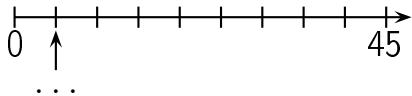
question 80



Réponse :

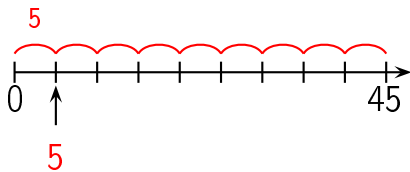


question 81

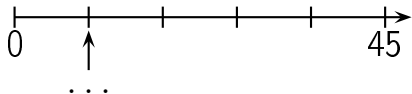


réponse à la question 81

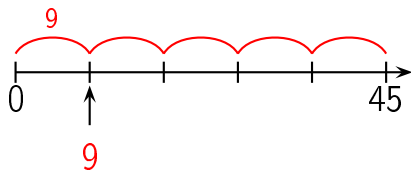
Réponse :




question 82



Réponse :



Combien y a-t-il de fleurs ?



Réponse :


45 fleurs

Il y a 9 lignes de 5 fleurs chacune. Il y a donc
 $9 \times 5 = 45$ fleurs.

Autre manière:

Il y a 5 colonnes de 9 fleurs chacune. Il y a donc $5 \times$
 $9 = 45$ fleurs.

Combien y a-t-il de fleurs ?



Réponse :

45 fleurs

Il y a 5 lignes de 9 fleurs chacune. Il y a donc

$$5 \times 9 = 45 \text{ fleurs.}$$

Autre manière:

Il y a 9 colonnes de 5 fleurs chacune. Il y a donc $9 \times$

$$5 = 45 \text{ fleurs.}$$

question 85

$$9 \times 6$$

Réponse :

$$9 \times 6 = 54$$

question 86

$$6 \times 9$$

Réponse :

$$6 \times 9 = 54$$

Complète.

$$9 \times \dots = 54$$

Réponse :

$$9 \times 6 = 54$$

Complète.

$$6 \times \dots = 54$$

Réponse :

$$6 \times 9 = 54$$

Complète.

$$\dots \times 9 = 54$$

Réponse :

$$6 \times 9 = 54$$

Complète.

$$\dots \times 6 = 54$$

Réponse :

$$9 \times 6 = 54$$

question 91

$$54 = \dots \times \dots$$

Réponse :

$$54 = 9 \times 6$$

ou

...

Dans 54,
combien de fois 9 ?

Réponse :

$$54 = 6 \times 9$$

Dans 54, il y a 6 fois 9.

Dans 61,
combien de fois 9 ?

Réponse :

$$61 = 6 \times 9 + 7$$

Dans 61, il y 6 fois 9.

Quel est le reste de la division euclidienne
de 59 par 9 ?

Réponse :

$$59 = 6 \times 9 + 5$$

Le reste de la division euclidienne
de 59 par 9 est 5.

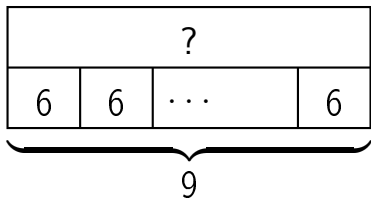
question 95

$$54 \div 9$$

Réponse :

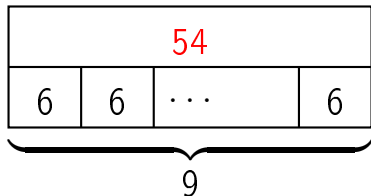
$$54 \div 9 = 6$$

question 96

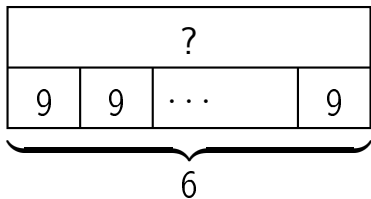


Réponse :

$$9 \times 6 = 54$$

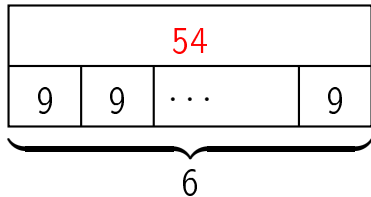


question 97

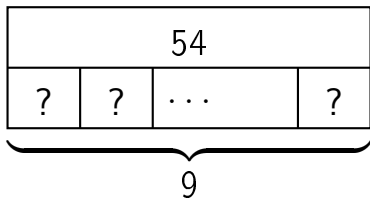


Réponse :

$$6 \times 9 = 54$$



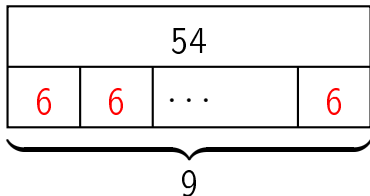
question 98



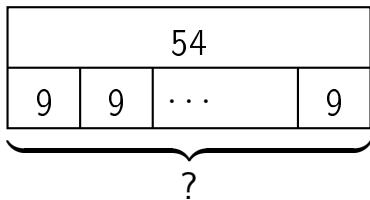
Réponse :

$$9 \times ? = 54$$

$$\text{donc } ? = 54 \div 9 = 6$$



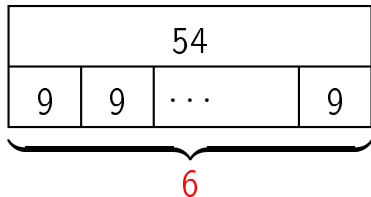
question 99



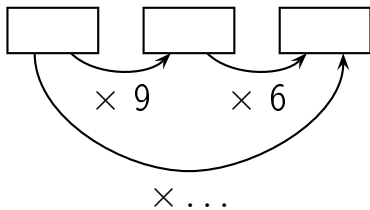
Réponse :

$$? \times 9 = 54$$

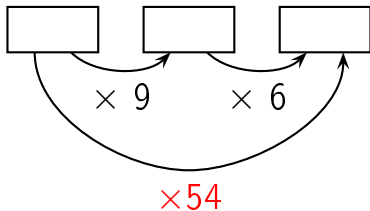
$$\text{donc } ? = 54 \div 9 = 6$$



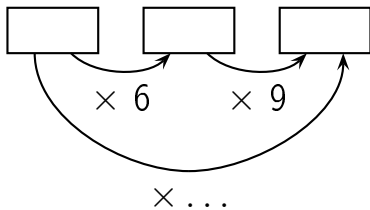
Complète.



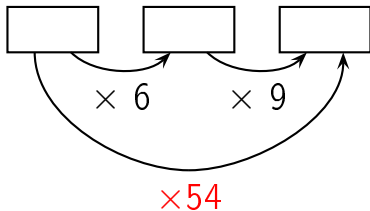
Réponse :



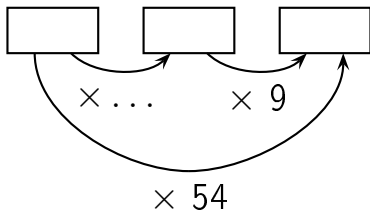
Complète.



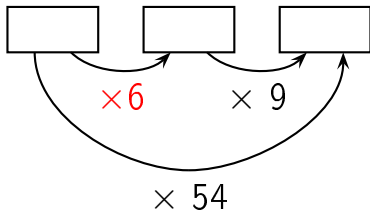
Réponse :



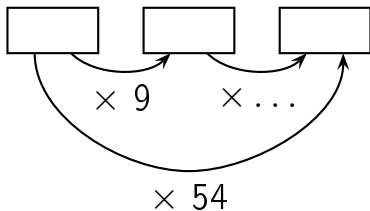
Complète.



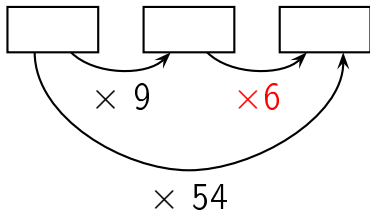
Réponse :



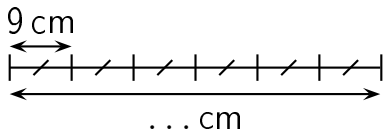
Complète.



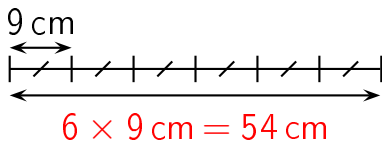
Réponse :



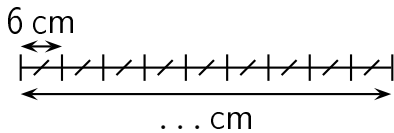
Complète.



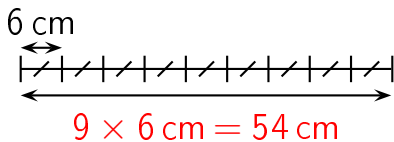
Réponse :



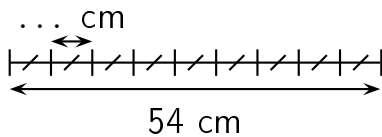
Complète.



Réponse :

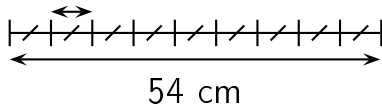


Complète.

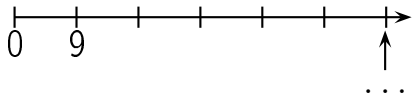


Réponse :

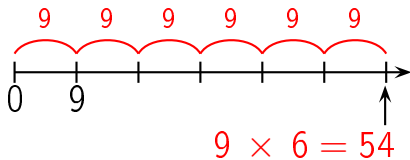
$$54 \text{ cm} \div 9 = 6 \text{ cm}$$



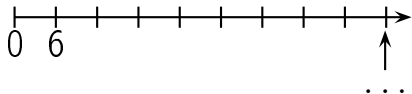
question 107



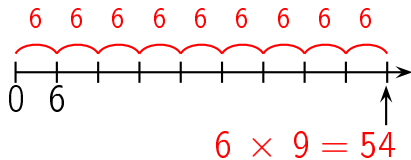
Réponse :



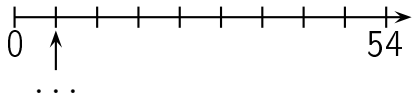
question 108



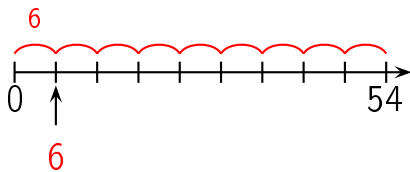
Réponse :



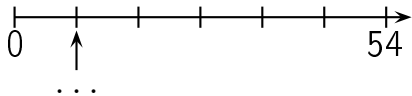
question 109



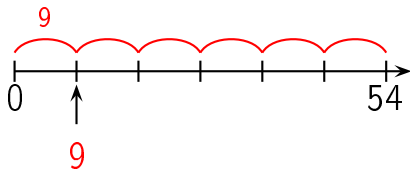
Réponse :




question 110



Réponse :



Combien y a-t-il de fleurs ?



Réponse :


54 fleurs

Il y a 9 lignes de 6 fleurs chacune. Il y a donc
 $9 \times 6 = 54$ fleurs.

Autre manière:

Il y a 6 colonnes de 9 fleurs chacune. Il y a donc $6 \times$
 $9 = 54$ fleurs.

Combien y a-t-il de fleurs ?



Réponse :

54 fleurs

Il y a 6 lignes de 9 fleurs chacune. Il y a donc

$$6 \times 9 = 54 \text{ fleurs.}$$

Autre manière:

Il y a 9 colonnes de 6 fleurs chacune. Il y a donc $9 \times$

$$6 = 54 \text{ fleurs.}$$

question 113

$$9 \times 7$$

Réponse :

$$9 \times 7 = 63$$

question 114

$$7 \times 9$$

Réponse :

$$7 \times 9 = 63$$

Complète.

$$9 \times \dots = 63$$

Réponse :

$$9 \times 7 = 63$$

Complète.

$$7 \times \dots = 63$$

Réponse :

$$7 \times 9 = 63$$

Complète.

$$\dots \times 9 = 63$$

Réponse :

$$7 \times 9 = 63$$

Complète.

$$\dots \times 7 = 63$$

Réponse :

$$9 \times 7 = 63$$

question 119

$$63 = \dots \times \dots$$

Réponse :

$$63 = 9 \times 7$$

ou

...

Dans 63,
combien de fois 9 ?

Réponse :

$$63 = 7 \times 9$$

Dans 63, il y a 7 fois 9.

Dans 68,
combien de fois 9 ?

Réponse :

$$68 = 7 \times 9 + 5$$

Dans 68, il y 7 fois 9.

Quel est le reste de la division euclidienne
de 68 par 9 ?

Réponse :

$$68 = 7 \times 9 + 5$$

Le reste de la division euclidienne
de 68 par 9 est 5.

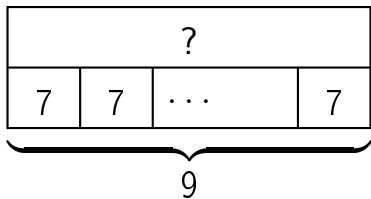
question 123

$$63 \div 9$$

Réponse :

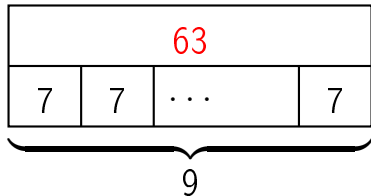
$$63 \div 9 = 7$$

question 124

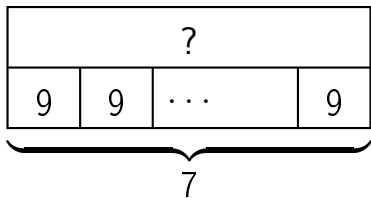


Réponse :

$$9 \times 7 = 63$$

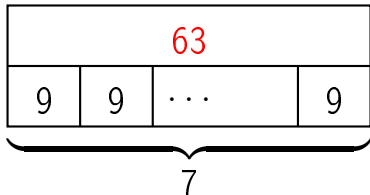


question 125

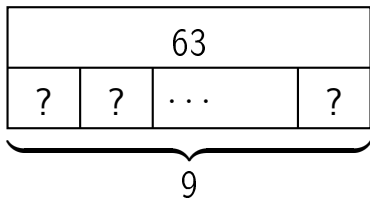


Réponse :

$$7 \times 9 = 63$$



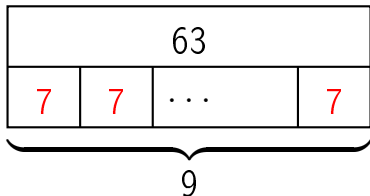
question 126



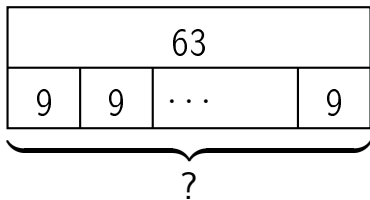
Réponse :

$$9 \times ? = 63$$

$$\text{donc } ? = 63 \div 9 = 7$$



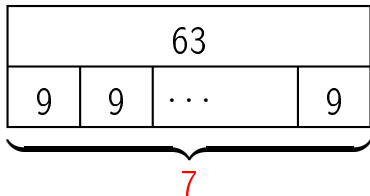
question 127



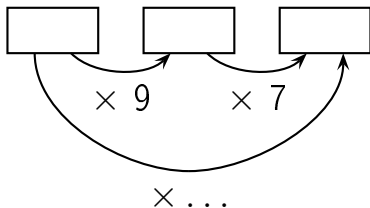
Réponse :

$$? \times 9 = 63$$

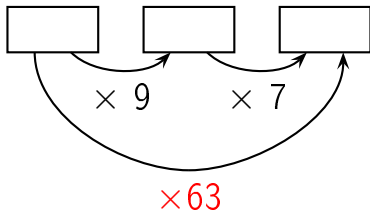
$$\text{donc } ? = 63 \div 9 = 7$$



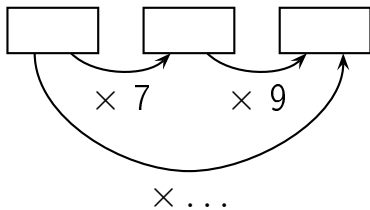
Complète.



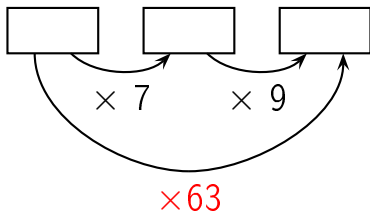
Réponse :



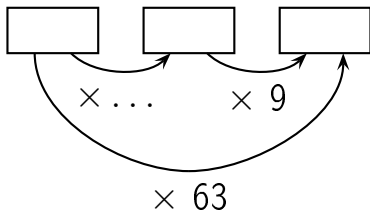
Complète.



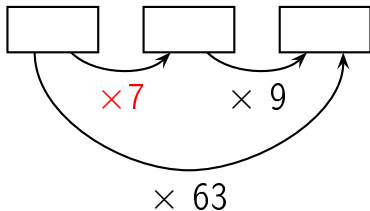
Réponse :



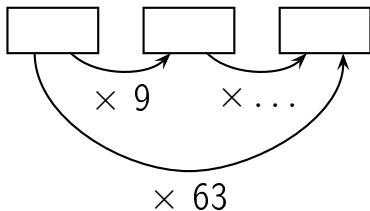
Complète.



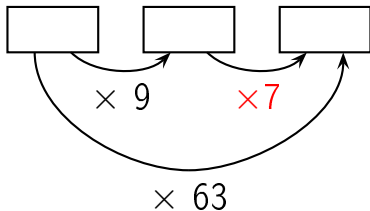
Réponse :



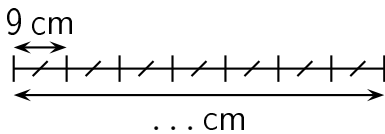
Complète.



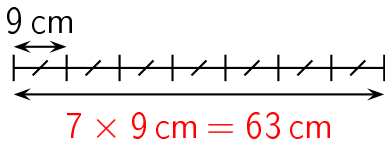
Réponse :



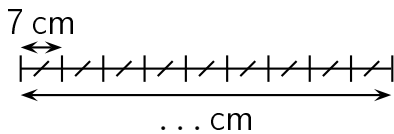
Complète.



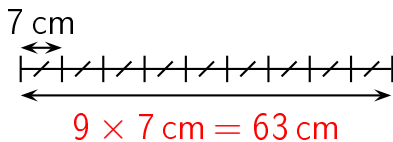
Réponse :



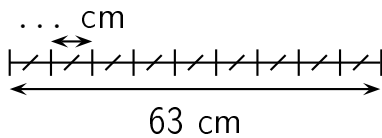
Complète.



Réponse :

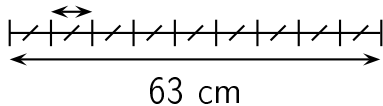


Complète.

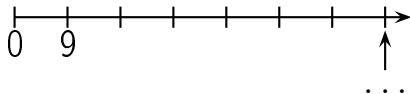


Réponse :

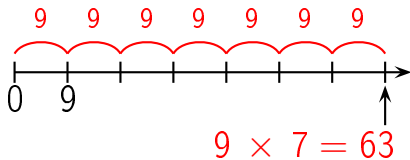
$$63 \text{ cm} \div 9 = 7 \text{ cm}$$



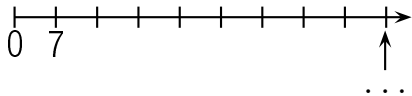
question 135



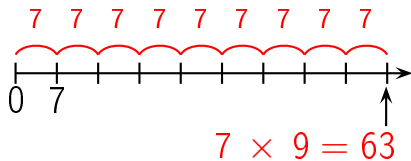
Réponse :



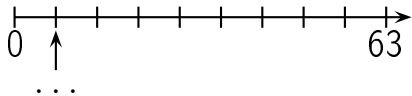
question 136



Réponse :

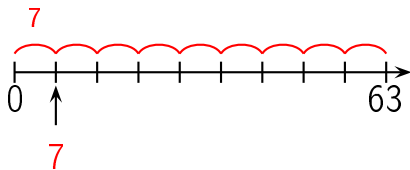


question 137

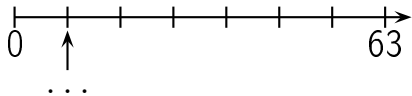


réponse à la question 137

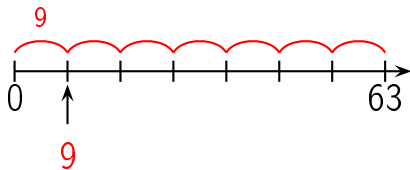
Réponse :




question 138



Réponse :



Combien y a-t-il de fleurs ?



Réponse :


63 fleurs

Il y a 9 lignes de 7 fleurs chacune. Il y a donc
 $9 \times 7 = 63$ fleurs.

Autre manière:

Il y a 7 colonnes de 9 fleurs chacune. Il y a donc $7 \times$
 $9 = 63$ fleurs.

Combien y a-t-il de fleurs ?



Réponse :

63 fleurs

Il y a 7 lignes de 9 fleurs chacune. Il y a donc

$$7 \times 9 = 63 \text{ fleurs.}$$

Autre manière:

Il y a 9 colonnes de 7 fleurs chacune. Il y a donc $9 \times$

$$7 = 63 \text{ fleurs.}$$

question 141

$$9 \times 8$$

Réponse :

$$9 \times 8 = 72$$

question 142

$$8 \times 9$$

Réponse :

$$8 \times 9 = 72$$

Complète.

$$9 \times \dots = 72$$

Réponse :

$$9 \times 8 = 72$$

Complète.

$$8 \times \dots = 72$$

Réponse :

$$8 \times 9 = 72$$

Complète.

$$\dots \times 9 = 72$$

Réponse :

$$8 \times 9 = 72$$

Complète.

$$\dots \times 8 = 72$$

Réponse :

$$9 \times 8 = 72$$

question 147

$$72 = \dots \times \dots$$

Réponse :

$$72 = 9 \times 8$$

ou

...

Dans 72,
combien de fois 9 ?

Réponse :

$$72 = 8 \times 9$$

Dans 72, il y a 8 fois 9.

Dans 78,
combien de fois 9 ?

Réponse :

$$78 = 8 \times 9 + 6$$

Dans 78, il y a 8 fois 9.

Quel est le reste de la division euclidienne
de 79 par 9 ?

Réponse :

$$79 = 8 \times 9 + 7$$

Le reste de la division euclidienne
de 79 par 9 est 7.

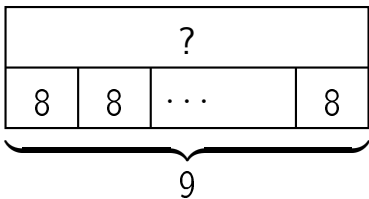
question 151

$$72 \div 9$$

Réponse :

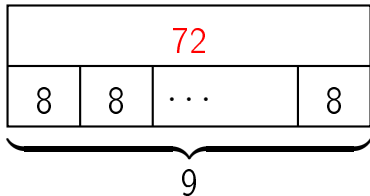
$$72 \div 9 = 8$$

question 152

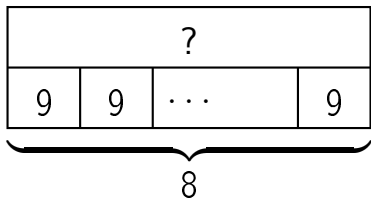


Réponse :

$$9 \times 8 = 72$$

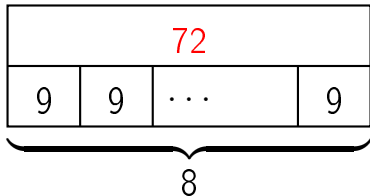


question 153

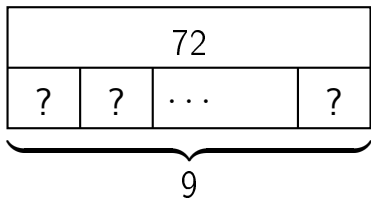


Réponse :

$$8 \times 9 = 72$$



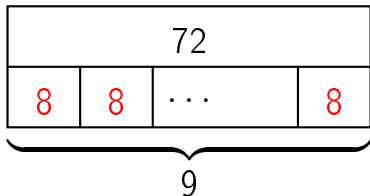
question 154



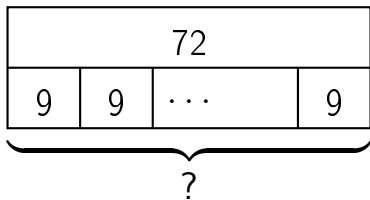
Réponse :

$$9 \times ? = 72$$

$$\text{donc } ? = 72 \div 9 = 8$$



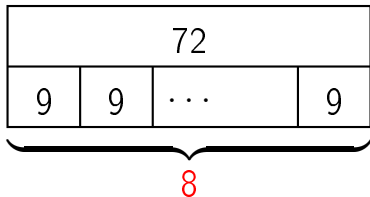
question 155



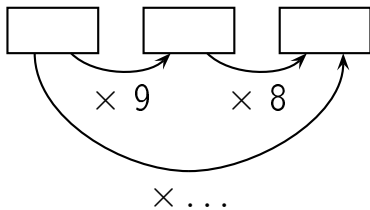
Réponse :

$$? \times 9 = 72$$

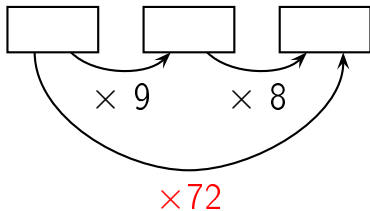
$$\text{donc } ? = 72 \div 9 = 8$$



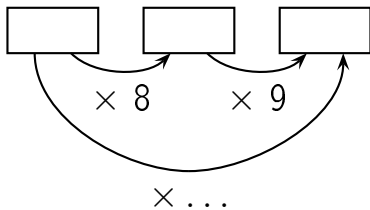
Complète.



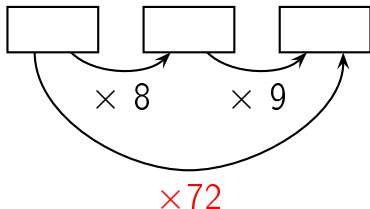
Réponse :



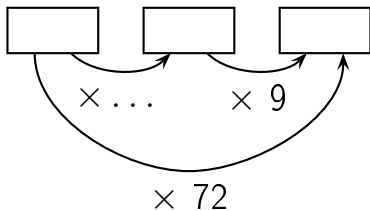
Complète.



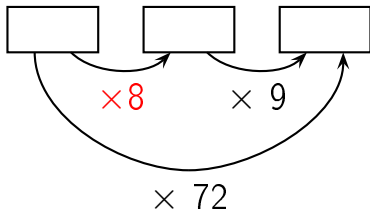
Réponse :



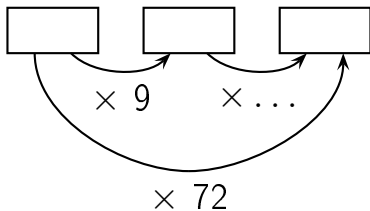
Complète.



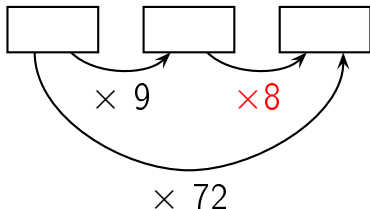
Réponse :



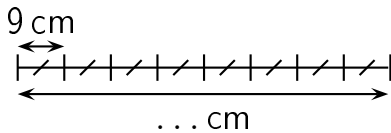
Complète.



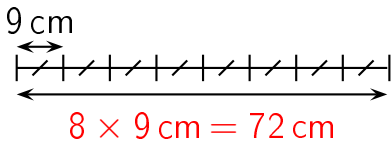
Réponse :



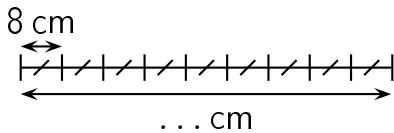
Complète.



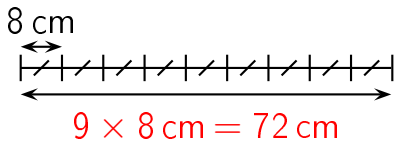
Réponse :



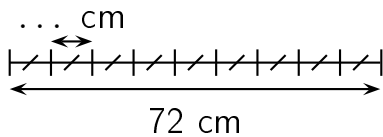
Complète.



Réponse :

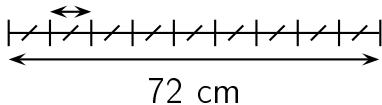


Complète.

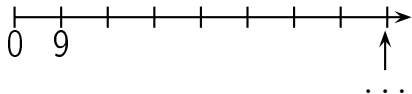


Réponse :

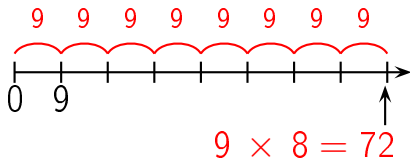
$$72 \text{ cm} \div 9 = 8 \text{ cm}$$



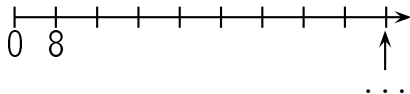
question 163



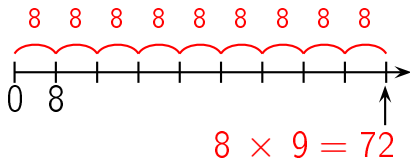
Réponse :



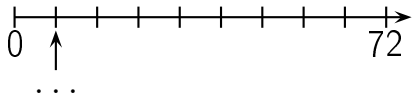
question 164



Réponse :

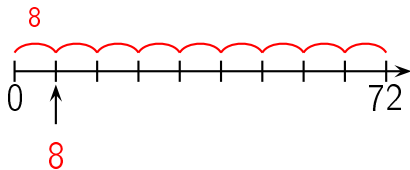


question 165

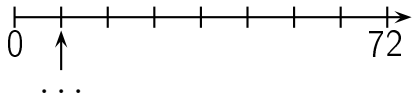


réponse à la question 165

Réponse :

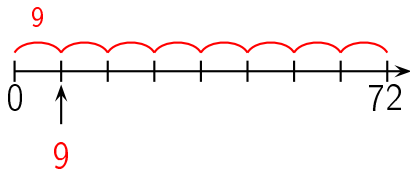


question 166




réponse à la question 166

Réponse :



Combien y a-t-il de fleurs ?



Réponse :


72 fleurs

Il y a 9 lignes de 8 fleurs chacune. Il y a donc
 $9 \times 8 = 72$ fleurs.

Autre manière:

Il y a 8 colonnes de 9 fleurs chacune. Il y a donc $8 \times$
 $9 = 72$ fleurs.

Combien y a-t-il de fleurs ?



Réponse :

72 fleurs

Il y a 8 lignes de 9 fleurs chacune. Il y a donc
 $8 \times 9 = 72$ fleurs.

Autre manière:

Il y a 9 colonnes de 8 fleurs chacune. Il y a donc $9 \times$
 $8 = 72$ fleurs.

question 169

$$9 \times 9$$

Réponse :

$$9 \times 9 = 81$$

Complète.

$$9 \times \dots = 81$$

Réponse :

$$9 \times 9 = 81$$

Complète.

$$\dots \times 9 = 81$$

Réponse :

$$9 \times 9 = 81$$

$$81 = \dots \times \dots$$

Réponse :

$$81 = 9 \times 9$$

ou

...

Dans 81,
combien de fois 9 ?

Réponse :

$$81 = 9 \times 9$$

Dans 81, il y a 9 fois 9.

Dans 85,
combien de fois 9 ?

Réponse :

$$85 = 9 \times 9 + 4$$

Dans 85, il y a 9 fois 9.

Quel est le reste de la division euclidienne
de 82 par 9 ?

Réponse :

$$82 = 9 \times 9 + 1$$

Le reste de la division euclidienne
de 82 par 9 est 1.

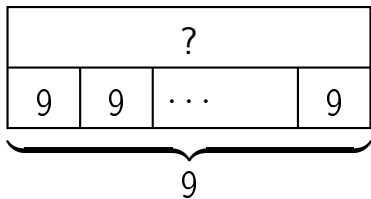
question 176

$$81 \div 9$$

Réponse :

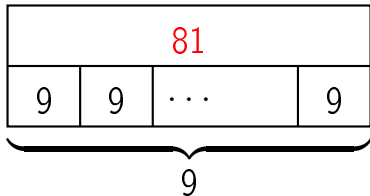
$$81 \div 9 = 9$$

question 177

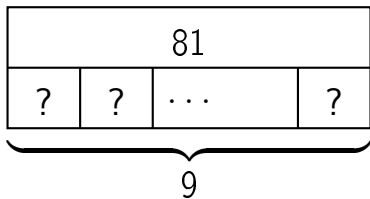


Réponse :

$$9 \times 9 = 81$$



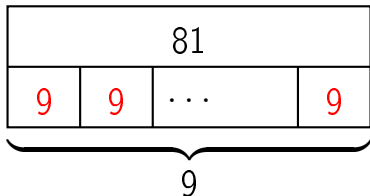
question 178



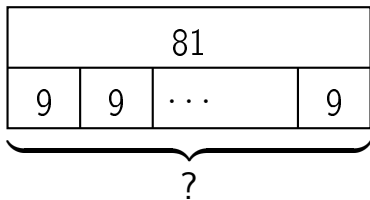
Réponse :

$$9 \times ? = 81$$

$$\text{donc } ? = 81 \div 9 = 9$$



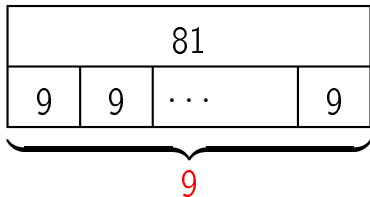
question 179



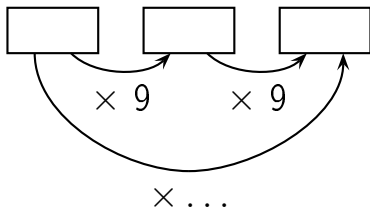
Réponse :

$$? \times 9 = 81$$

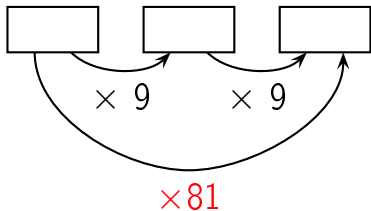
$$\text{donc } ? = 81 \div 9 = 9$$



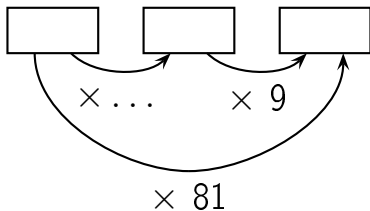
Complète.



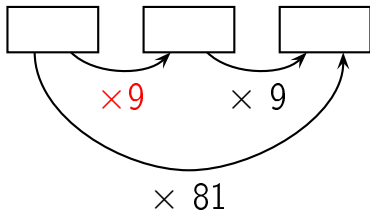
Réponse :



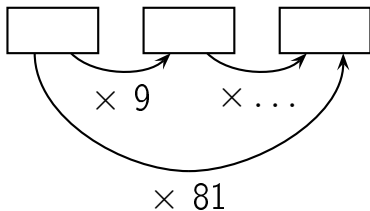
Complète.



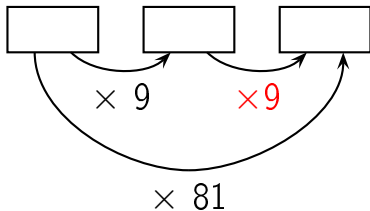
Réponse :



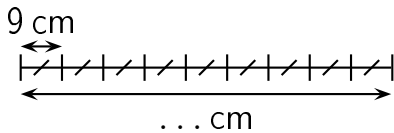
Complète.



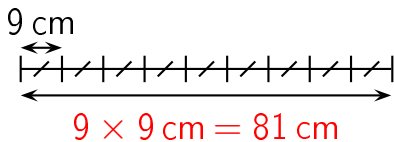
Réponse :



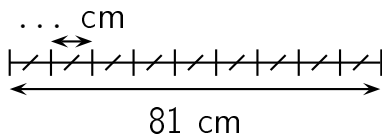
Complète.



Réponse :

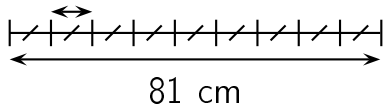


Complète.

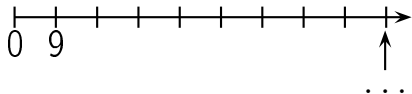


Réponse :

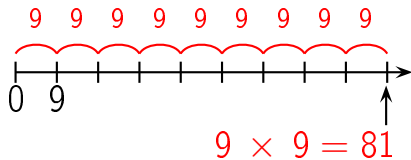
$$81 \text{ cm} \div 9 = 9 \text{ cm}$$



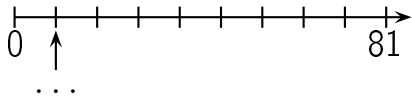
question 185



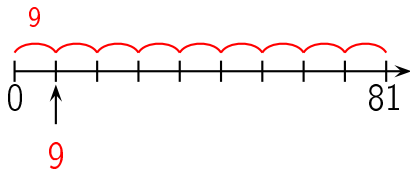
Réponse :




question 186



Réponse :



Combien y a-t-il de fleurs ?



réponse à la question 187